

JEE MAIN 2019

Application No	
Candidate Name	
Roll No.	
Test Date	11/01/2019
Test Time	2:30 PM - 5:30 PM
Subject	Paper I EH

Section : Physics

Q.1 A particle moves from the point $(2.0\hat{i} + 4.0\hat{j})$ m, at $t=0$, with an initial velocity $(5.0\hat{i} + 4.0\hat{j})$ ms^{-1} . It is acted upon by a constant force which produces a constant acceleration $(4.0\hat{i} + 4.0\hat{j})$ ms^{-2} . What is the distance of the particle from the origin at time 2 s ?

- Options
1. 15 m
 2. $20\sqrt{2}$ m
 3. 5 m
 4. $10\sqrt{2}$ m

Question ID : 4165299507

Option 1 ID : 41652937487

Option 2 ID : 41652937486

Option 3 ID : 41652937489

Option 4 ID : 41652937488

Status : Marked For Review

Chosen Option : 2

Q.2 A thermometer graduated according to a linear scale reads a value x_0 when in contact with boiling water, and $x_0/3$ when in contact with ice. What is the temperature of an object in $^{\circ}\text{C}$, if this thermometer in the contact with the object reads $x_0/2$?

- Options
1. 25
 2. 60
 3. 40
 4. 35

Question ID : 4165299535

Option 1 ID : 41652937599

Option 2 ID : 41652937598

Option 3 ID : 41652937601

Option 4 ID : 41652937600

Status : Marked For Review

Chosen Option : 2

Q.3 A galvanometer having a resistance of $20\ \Omega$ and 30 divisions on both sides has figure of merit $0.005\ \text{ampere/division}$. The resistance that should be connected in series such that it can be used as a voltmeter upto 15 volt, is :

- Options
1. $100\ \Omega$
 2. $120\ \Omega$
 3. $80\ \Omega$
 4. $125\ \Omega$

Question ID : 4165299534

Option 1 ID : 41652937595

Option 2 ID : 41652937596

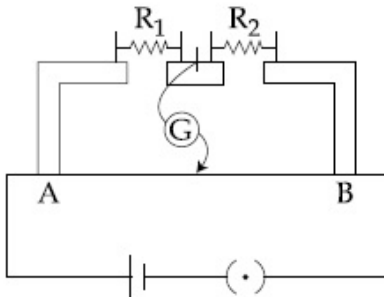
Option 3 ID : 41652937594

Option 4 ID : 41652937597

Status : Marked For Review

Chosen Option : 2

Q.4 In the experimental set up of metre bridge shown in the figure, the null point is obtained at a distance of 40 cm from A. If a $10\ \Omega$ resistor is connected in series with R_1 , the null point shifts by 10 cm. The resistance that should be connected in parallel with $(R_1 + 10)\ \Omega$ such that the null point shifts back to its initial position is :



- Options
1. $20\ \Omega$
 2. $40\ \Omega$
 3. $60\ \Omega$
 4. $30\ \Omega$

Question ID : 4165299522

Option 1 ID : 41652937549

Option 2 ID : 41652937547

Option 3 ID : 41652937546

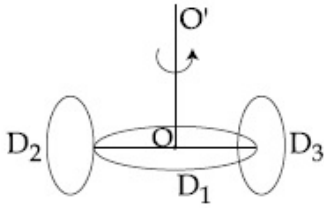
Option 4 ID : 41652937548

Status : Marked For Review

Chosen Option : 2

Q.5

A circular disc D_1 of mass M and radius R has two identical discs D_2 and D_3 of the same mass M and radius R attached rigidly at its opposite ends (see figure). The moment of inertia of the system about the axis OO' , passing through the centre of D_1 , as shown in the figure, will be :



Options

1. MR^2
2. $3MR^2$
3. $\frac{4}{5}MR^2$
4. $\frac{2}{3}MR^2$

Question ID : 4165299512

Option 1 ID : 41652937506

Option 2 ID : 41652937508

Option 3 ID : 41652937509

Option 4 ID : 41652937507

Status : Marked For Review

Chosen Option : 2

Q.6 The magnitude of torque on a particle of mass 1 kg is 2.5 Nm about the origin. If the force acting on it is 1 N, and the distance of the particle from the origin is 5 m, the angle between the force and the position vector is (in radians) :

Options

1. $\frac{\pi}{6}$
2. $\frac{\pi}{3}$
3. $\frac{\pi}{8}$
4. $\frac{\pi}{4}$

Question ID : 4165299508

Option 1 ID : 41652937491

Option 2 ID : 41652937490

Option 3 ID : 41652937493

Option 4 ID : 41652937492

Status : Marked For Review

Chosen Option : 2

Q.7

A copper wire is wound on a wooden frame, whose shape is that of an equilateral triangle. If the linear dimension of each side of the frame is increased by a factor of 3, keeping the number of turns of the coil per unit length of the frame the same, then the self inductance of the coil :

- Options
1. decreases by a factor of 9
 2. increases by a factor of 27
 3. increases by a factor of 3
 4. decreases by a factor of $9\sqrt{3}$

Question ID : 4165299526

Option 1 ID : 41652937563

Option 2 ID : 41652937564

Option 3 ID : 41652937562

Option 4 ID : 41652937565

Status : Marked For Review

Chosen Option : 2

Q.8 A particle of mass m is moving in a straight line with momentum p . Starting at time $t = 0$, a force $F = kt$ acts in the same direction on the moving particle during time interval T so that its momentum changes from p to $3p$. Here k is a constant. The value of T is :

- Options
1. $2\sqrt{\frac{k}{P}}$
 2. $2\sqrt{\frac{P}{k}}$
 3. $\sqrt{\frac{2k}{P}}$
 4. $\sqrt{\frac{2P}{k}}$

Question ID : 4165299509

Option 1 ID : 41652937496

Option 2 ID : 41652937495

Option 3 ID : 41652937497

Option 4 ID : 41652937494

Status : Marked For Review

Chosen Option : 2

Q.9 A paramagnetic substance in the form of a cube with sides 1 cm has a magnetic dipole moment of 20×10^{-6} J/T when a magnetic intensity of 60×10^3 A/m is applied. Its magnetic susceptibility is :

- Options
1. 3.3×10^{-2}

2. 4.3×10^{-2}
3. 2.3×10^{-2}
4. 3.3×10^{-4}

Question ID : 4165299524

Option 1 ID : 41652937554

Option 2 ID : 41652937555

Option 3 ID : 41652937556

Option 4 ID : 41652937557

Status : Marked For Review

Chosen Option : 2

Q.10 A simple pendulum of length 1 m is oscillating with an angular frequency 10 rad/s. The support of the pendulum starts oscillating up and down with a small angular frequency of 1 rad/s and an amplitude of 10^{-2} m. The relative change in the angular frequency of the pendulum is best given by :

- Options
1. 10^{-3} rad/s
 2. 1 rad/s
 3. 10^{-1} rad/s
 4. 10^{-5} rad/s

Question ID : 4165299518

Option 1 ID : 41652937531

Option 2 ID : 41652937533

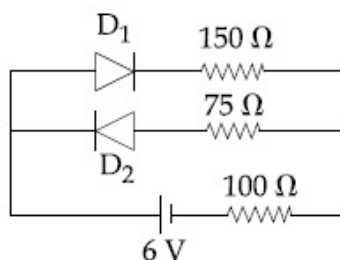
Option 3 ID : 41652937530

Option 4 ID : 41652937532

Status : Marked For Review

Chosen Option : 2

Q.11 The circuit shown below contains two ideal diodes, each with a forward resistance of 50Ω . If the battery voltage is 6 V, the current through the 100Ω resistance (in Amperes) is :



- Options
1. 0.036
 2. 0.020
 3. 0.027
 4. 0.030

Question ID : 4165299532

Option 1 ID : 41652937589

Option 2 ID : 41652937586

Option 3 ID : 41652937587
 Option 4 ID : 41652937588
 Status : Marked For Review
 Chosen Option : 2

Q.12 An electric field of 1000 V/m is applied to an electric dipole at angle of 45° . The value of electric dipole moment is 10^{-29} C.m. What is the potential energy of the electric dipole ?

- Options
1. -20×10^{-18} J
 2. -7×10^{-27} J
 3. -10×10^{-29} J
 4. -9×10^{-20} J

Question ID : 4165299520
 Option 1 ID : 41652937541
 Option 2 ID : 41652937538
 Option 3 ID : 41652937539
 Option 4 ID : 41652937540
 Status : Marked For Review
 Chosen Option : 2

Q.13 A metal ball of mass 0.1 kg is heated upto 500°C and dropped into a vessel of heat capacity 800 JK^{-1} and containing 0.5 kg water. The initial temperature of water and vessel is 30°C . What is the approximate percentage increment in the temperature of the water ? [Specific Heat Capacities of water and metal are, respectively, $4200 \text{ Jkg}^{-1}\text{K}^{-1}$ and $400 \text{ Jkg}^{-1}\text{K}^{-1}$]

- Options
1. 15 %
 2. 30 %
 3. 25 %
 4. 20 %

Question ID : 4165299516
 Option 1 ID : 41652937524
 Option 2 ID : 41652937522
 Option 3 ID : 41652937523
 Option 4 ID : 41652937525
 Status : Marked For Review
 Chosen Option : 2

Q.14 The region between $y=0$ and $y=d$ contains a magnetic field $\vec{B} = B_z \hat{z}$. A particle of mass m and charge q enters the region with a velocity $\vec{v} = v \hat{i}$. If $d = \frac{mv}{2qB}$, the acceleration of the charged particle at the point of its emergence at the other side is :

Options

1. $\frac{qvB}{m} \left(\frac{1}{2} \hat{i} - \frac{\sqrt{3}}{2} \hat{j} \right)$

2. $\frac{qvB}{m} \left(\frac{\sqrt{3}}{2} \hat{i} + \frac{1}{2} \hat{j} \right)$

3. $\frac{qvB}{m} \left(\frac{-\hat{j} + \hat{i}}{\sqrt{2}} \right)$

4. $\frac{qvB}{m} \left(\frac{\hat{i} + \hat{j}}{\sqrt{2}} \right)$

Question ID : 4165299525

Option 1 ID : 41652937559

Option 2 ID : 41652937558

Option 3 ID : 41652937561

Option 4 ID : 41652937560

Status : Marked For Review

Chosen Option : 2

Q.15 A pendulum is executing simple harmonic motion and its maximum kinetic energy is K_1 . If the length of the pendulum is doubled and it performs simple harmonic motion with the same amplitude as in the first case, its maximum kinetic energy is K_2 . Then :

Options 1. $K_2 = 2K_1$

2. $K_2 = \frac{K_1}{2}$

3. $K_2 = \frac{K_1}{4}$

4. $K_2 = K_1$

Question ID : 4165299517

Option 1 ID : 41652937527

Option 2 ID : 41652937528

Option 3 ID : 41652937529

Option 4 ID : 41652937526

Status : Marked For Review

Chosen Option : 2

Q.16 Two rods A and B of identical dimensions are at temperature 30°C . If A is heated upto 180°C and B upto $T^\circ\text{C}$, then the new lengths are the same. If the ratio of the coefficients of linear expansion of A and B is 4 : 3, then the value of T is :

Options 1. 230°C

2. 270°C

3. 200°C

4. 250°C

Question ID : 4165299521

Option 1 ID : 41652937543

Option 2 ID : 41652937545

Option 3 ID : 41652937542

Option 4 ID : 41652937544

Status : Marked For Review

Chosen Option : 2

Q.17 If speed (V), acceleration (A) and force (F) are considered as fundamental units, the dimension of Young's modulus will be :

Options 1. $V^{-2}A^2F^{-2}$ 2. $V^{-2}A^2F^2$ 3. $V^{-4}A^{-2}F$ 4. $V^{-4}A^2F$

Question ID : 4165299506

Option 1 ID : 41652937485

Option 2 ID : 41652937484

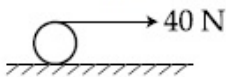
Option 3 ID : 41652937483

Option 4 ID : 41652937482

Status : Marked For Review

Chosen Option : 2

Q.18 A string is wound around a hollow cylinder of mass 5 kg and radius 0.5 m. If the string is now pulled with a horizontal force of 40 N, and the cylinder is rolling without slipping on a horizontal surface (see figure), then the angular acceleration of the cylinder will be (Neglect the mass and thickness of the string) :

Options 1. 20 rad/s²2. 16 rad/s²3. 12 rad/s²4. 10 rad/s²

Question ID : 4165299511

Option 1 ID : 41652937505

Option 2 ID : 41652937504

Option 3 ID : 41652937503

Option 4 ID : 41652937502

Status : Marked For Review

Chosen Option : 2

Q.19

A 27 mW laser beam has a cross-sectional area of 10 mm^2 . The magnitude of the maximum electric field in this electromagnetic wave is given by :

[Given permittivity of space $\epsilon_0 = 9 \times 10^{-12}$ SI units, Speed of light $c = 3 \times 10^8 \text{ m/s}$]

- Options
1. 2 kV/m
 2. 0.7 kV/m
 3. 1 kV/m
 4. 1.4 kV/m

Question ID : 4165299527

Option 1 ID : 41652937568

Option 2 ID : 41652937569

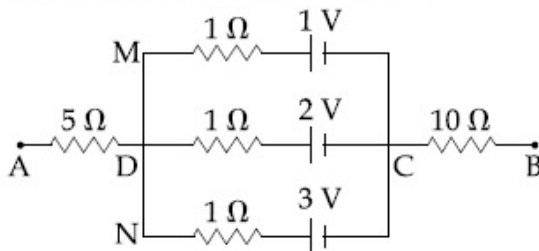
Option 3 ID : 41652937567

Option 4 ID : 41652937566

Status : Marked For Review

Chosen Option : 2

Q.20 In the circuit shown, the potential difference between A and B is :



- Options
1. 1 V
 2. 2 V
 3. 3 V
 4. 6 V

Question ID : 4165299523

Option 1 ID : 41652937553

Option 2 ID : 41652937550

Option 3 ID : 41652937551

Option 4 ID : 41652937552

Status : Marked For Review

Chosen Option : 2

Q.21 The mass and the diameter of a planet are three times the respective values for the Earth. The period of oscillation of a simple pendulum on the Earth is 2 s. The period of oscillation of the same pendulum on the planet would be :

- Options
1. $\frac{\sqrt{3}}{2} \text{ s}$
 2. $\frac{2}{\sqrt{3}} \text{ s}$

3. $\frac{3}{2}$ s
4. $2\sqrt{3}$ s

Question ID : 4165299513

Option 1 ID : 41652937511

Option 2 ID : 41652937512

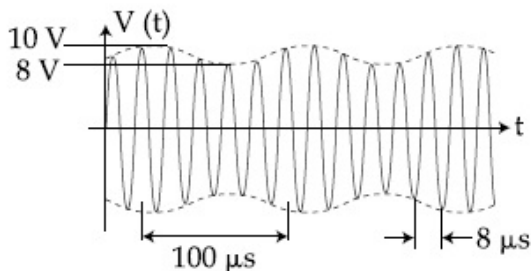
Option 3 ID : 41652937510

Option 4 ID : 41652937513

Status : Marked For Review

Chosen Option : 2

Q.22 An amplitude modulated signal is plotted below :



Which one of the following best describes the above signal ?

- Options
1. $(9 + \sin(2.5\pi \times 10^5 t))\sin(2\pi \times 10^4 t)$ V
 2. $(1 + 9\sin(2\pi \times 10^4 t))\sin(2.5\pi \times 10^5 t)$ V
 3. $(9 + \sin(2\pi \times 10^4 t))\sin(2.5\pi \times 10^5 t)$ V
 4. $(9 + \sin(4\pi \times 10^4 t))\sin(5\pi \times 10^5 t)$ V

Question ID : 4165299533

Option 1 ID : 41652937590

Option 2 ID : 41652937591

Option 3 ID : 41652937593

Option 4 ID : 41652937592

Status : Marked For Review

Chosen Option : 2

Q.23 In a process, temperature and volume of one mole of an ideal monoatomic gas are varied according to the relation $VT = K$, where K is a constant. In this process the temperature of the gas is increased by ΔT . The amount of heat absorbed by gas is (R is gas constant) :

- Options
1. $\frac{1}{2}R\Delta T$
 2. $\frac{1}{2}KR\Delta T$
 3. $\frac{3}{2}R\Delta T$

4. $\frac{2K}{3}\Delta T$

Question ID : 4165299515

Option 1 ID : 41652937518

Option 2 ID : 41652937519

Option 3 ID : 41652937521

Option 4 ID : 41652937520

Status : Marked For Review

Chosen Option : 2

Q.24 When 100 g of a liquid A at 100°C is added to 50 g of a liquid B at temperature 75°C, the temperature of the mixture becomes 90°C. The temperature of the mixture, if 100 g of liquid A at 100°C is added to 50 g of liquid B at 50°C, will be :

Options 1. 85°C

2. 60°C

3. 80°C

4. 70°C

Question ID : 4165299514

Option 1 ID : 41652937517

Option 2 ID : 41652937514

Option 3 ID : 41652937516

Option 4 ID : 41652937515

Status : Marked For Review

Chosen Option : 2

Q.25 In a hydrogen like atom, when an electron jumps from the M - shell to the L - shell, the wavelength of emitted radiation is λ . If an electron jumps from N-shell to the L-shell, the wavelength of emitted radiation will be :

Options 1. $\frac{27}{20} \lambda$

2. $\frac{16}{25} \lambda$

3. $\frac{25}{16} \lambda$

4. $\frac{20}{27} \lambda$

Question ID : 4165299531

Option 1 ID : 41652937585

Option 2 ID : 41652937582

Option 3 ID : 41652937583

Option 4 ID : 41652937584

Status : Marked For Review

Chosen Option : 2

Q.26 A monochromatic light is incident at a certain angle on an equilateral triangular prism and suffers minimum deviation. If the refractive index of the material of the prism is $\sqrt{3}$, then the angle of incidence is :

- Options
1. 90°
 2. 30°
 3. 60°
 4. 45°

Question ID : 4165299528

Option 1 ID : 41652937573

Option 2 ID : 41652937571

Option 3 ID : 41652937572

Option 4 ID : 41652937570

Status : Marked For Review

Chosen Option : 2

Q.27 In a double-slit experiment, green light (5303\AA) falls on a double slit having a separation of $19.44\ \mu\text{m}$ and a width of $4.05\ \mu\text{m}$. The number of bright fringes between the first and the second diffraction minima is :

- Options
1. 10
 2. 05
 3. 04
 4. 09

Question ID : 4165299529

Option 1 ID : 41652937574

Option 2 ID : 41652937576

Option 3 ID : 41652937577

Option 4 ID : 41652937575

Status : Marked For Review

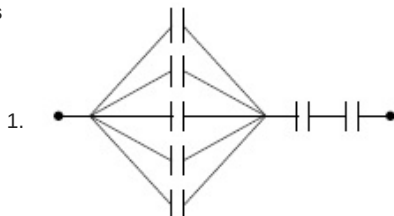
Chosen Option : 2

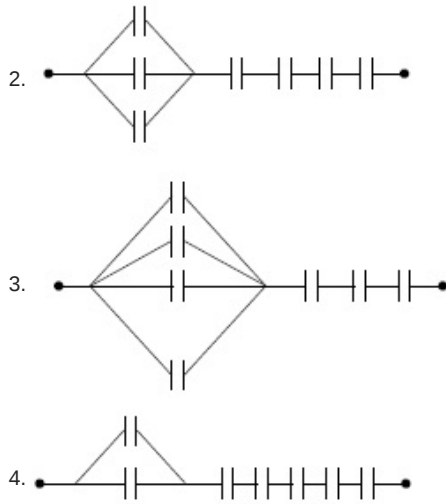
Q.28 Seven capacitors, each of capacitance $2\ \mu\text{F}$, are to be connected in a configuration to

obtain an effective capacitance of $\left(\frac{6}{13}\right)\ \mu\text{F}$.

Which of the combinations, shown in figures below, will achieve the desired value ?

Options





Question ID : 4165299519

Option 1 ID : 41652937534

Option 2 ID : 41652937536

Option 3 ID : 41652937535

Option 4 ID : 41652937537

Status : Marked For Review

Chosen Option : 2

Q.29

A particle of mass m and charge q is in an electric and magnetic field given by

$$\vec{E} = 2\hat{i} + 3\hat{j} ; \vec{B} = 4\hat{j} + 6\hat{k}.$$

The charged particle is shifted from the origin to the point $P(x=1 ; y=1)$ along a straight path. The magnitude of the total work done is :

- Options
1. $(0.35)q$
 2. $5q$
 3. $(2.5)q$
 4. $(0.15)q$

Question ID : 4165299510

Option 1 ID : 41652937501

Option 2 ID : 41652937498

Option 3 ID : 41652937499

Option 4 ID : 41652937500

Status : Marked For Review

Chosen Option : 2

Q.30

In a photoelectric experiment, the wavelength of the light incident on a metal is changed from 300 nm to 400 nm. The decrease in the stopping potential is close

$$\text{to : } \left(\frac{hc}{e} = 1240 \text{ nm-V} \right)$$

- Options
1. 0.5 V
 2. 1.5 V
 3. 1.0 V

4. 2.0 V

Question ID : 4165299530

Option 1 ID : 41652937580

Option 2 ID : 41652937581

Option 3 ID : 41652937578

Option 4 ID : 41652937579

Status : Marked For Review

Chosen Option : 2

Section : Chemistry

Q.1 The reaction,
 $\text{MgO(s)} + \text{C(s)} \rightarrow \text{Mg(s)} + \text{CO(g)}$, for which
 $\Delta_r H^\circ = +491.1 \text{ kJ mol}^{-1}$ and
 $\Delta_r S^\circ = 198.0 \text{ JK}^{-1} \text{ mol}^{-1}$, is not feasible at
 298 K. Temperature above which reaction
 will be feasible is :

- Options**
1. 2040.5 K
 2. 1890.0 K
 3. 2480.3 K
 4. 2380.5 K

Question ID : 4165299560

Option 1 ID : 41652937698

Option 2 ID : 41652937701

Option 3 ID : 41652937699

Option 4 ID : 41652937700

Status : Marked For Review

Chosen Option : 2

Q.2 The correct match between Item I and
 Item II is :

- | Item I | Item II |
|---------------------------|---|
| (A) Allosteric effect | (P) Molecule binding to the active site of enzyme |
| (B) Competitive inhibitor | (Q) Molecule crucial for communication in the body |
| (C) Receptor | (R) Molecule binding to a site other than the active site of enzyme |
| (D) Poison | (S) Molecule binding to the enzyme covalently |

- Options**
1. (A)→(R); (B)→(P); (C)→(Q); (D)→(S)
 2. (A)→(P); (B)→(R); (C)→(Q); (D)→(S)
 3. (A)→(R); (B)→(P); (C)→(S); (D)→(Q)
 4. (A)→(P); (B)→(R); (C)→(S); (D)→(Q)

Question ID : 4165299545

Option 1 ID : 41652937640

Option 2 ID : 41652937638

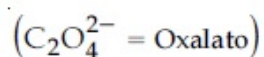
Option 3 ID : 41652937641

Option 4 ID : 41652937639

Status : Marked For Review

Chosen Option : 1

Q.3 The coordination number of Th in $K_4[Th(C_2O_4)_4(OH_2)_2]$ is :



Options 1. 14

2. 6

3. 8

4. 10

Question ID : 4165299553

Option 1 ID : 41652937673

Option 2 ID : 41652937670

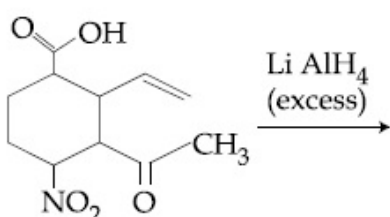
Option 3 ID : 41652937671

Option 4 ID : 41652937672

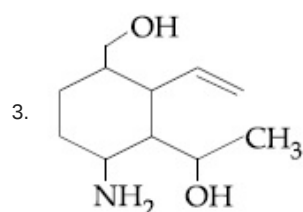
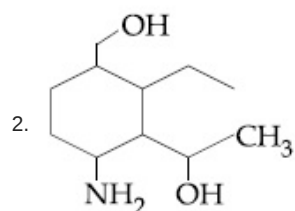
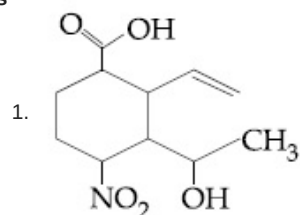
Status : Marked For Review

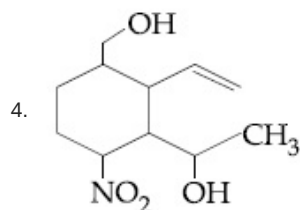
Chosen Option : 2

Q.4 The major product obtained in the following reaction is :



Options





Question ID : 4165299541

Option 1 ID : 41652937623

Option 2 ID : 41652937624

Option 3 ID : 41652937625

Option 4 ID : 41652937622

Status : Marked For Review

Chosen Option : 2

Q.5 The standard reaction Gibbs energy for a chemical reaction at an absolute temperature T is given by

$$\Delta_r G^\circ = A - BT$$

Where A and B are non-zero constants.

Which of the following is TRUE about this reaction ?

- Options
1. Endothermic if $A > 0$
 2. Exothermic if $A > 0$ and $B < 0$
 3. Endothermic if $A < 0$ and $B > 0$
 4. Exothermic if $B < 0$

Question ID : 4165299559

Option 1 ID : 41652937694

Option 2 ID : 41652937697

Option 3 ID : 41652937696

Option 4 ID : 41652937695

Status : Marked For Review

Chosen Option : 2

Q.6 The radius of the largest sphere which fits properly at the centre of the edge of a body centred cubic unit cell is : (Edge length is represented by 'a')

- Options
1. 0.027 a
 2. 0.047 a
 3. 0.134 a
 4. 0.067 a

Question ID : 4165299557

Option 1 ID : 41652937688

Option 2 ID : 41652937689

Option 3 ID : 41652937686

Option 4 ID : 41652937687

Status : Marked For Review

Chosen Option : 2

Q.7 The hydride that is NOT electron deficient is :

- Options
1. SiH_4
 2. B_2H_6
 3. GaH_3
 4. AlH_3

Question ID : 4165299548
 Option 1 ID : 41652937650
 Option 2 ID : 41652937652
 Option 3 ID : 41652937653
 Option 4 ID : 41652937651
 Status : Marked For Review
 Chosen Option : 1

- Q.8 Given the equilibrium constant :
 K_C of the reaction :
 $\text{Cu(s)} + 2\text{Ag}^+(\text{aq}) \rightarrow \text{Cu}^{2+}(\text{aq}) + 2\text{Ag(s)}$ is
 10×10^{15} , calculate the E_{cell}^\ominus of this reaction
 at 298 K

$$\left[2.303 \frac{RT}{F} \text{ at } 298 \text{ K} = 0.059 \text{ V} \right]$$

- Options
1. 0.04736 mV
 2. 0.4736 mV
 3. 0.4736 V
 4. 0.04736 V

Question ID : 4165299563
 Option 1 ID : 41652937712
 Option 2 ID : 41652937713
 Option 3 ID : 41652937711
 Option 4 ID : 41652937710
 Status : Marked For Review
 Chosen Option : 3

- Q.9 The correct option with respect to the Pauling electronegativity values of the elements is :

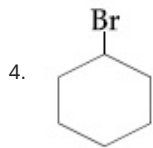
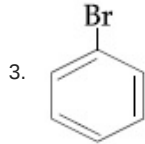
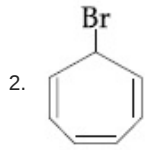
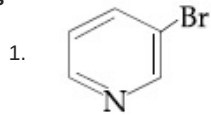
- Options
1. $\text{Te} > \text{Se}$
 2. $\text{Ga} < \text{Ge}$
 3. $\text{Si} < \text{Al}$
 4. $\text{P} > \text{S}$

Question ID : 4165299546
 Option 1 ID : 41652937642
 Option 2 ID : 41652937645
 Option 3 ID : 41652937644
 Option 4 ID : 41652937643
 Status : Marked For Review
 Chosen Option : 2

Q.10

Which of the following compounds will produce a precipitate with AgNO_3 ?

Options



Question ID : 4165299544

Option 1 ID : 41652937636

Option 2 ID : 41652937637

Option 3 ID : 41652937634

Option 4 ID : 41652937635

Status : Marked For Review

Chosen Option : 2

Q.11 The de Broglie wavelength (λ) associated with a photoelectron varies with the frequency (ν) of the incident radiation as, [ν_0 is threshold frequency] :

Options

1. $\lambda \propto \frac{1}{(\nu - \nu_0)}$

2. $\lambda \propto \frac{1}{(\nu - \nu_0)^{\frac{1}{4}}}$

3. $\lambda \propto \frac{1}{(\nu - \nu_0)^{\frac{3}{2}}}$

4. $\lambda \propto \frac{1}{(\nu - \nu_0)^{\frac{1}{2}}}$

Question ID : 4165299558

Option 1 ID : 41652937691

Option 2 ID : 41652937692

Option 3 ID : 41652937693

Option 4 ID : 41652937690

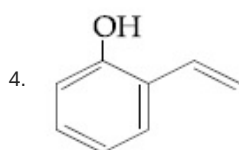
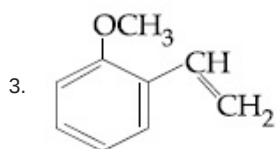
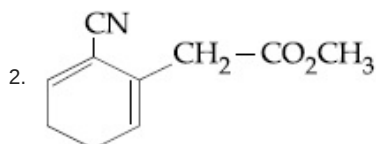
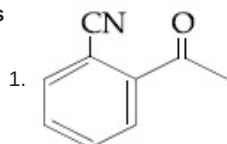
Status : Marked For Review

Chosen Option : 2

Q.12

Which of the following compounds reacts with ethylmagnesium bromide and also decolourizes bromine water solution :

Options



Question ID : 4165299536

Option 1 ID : 41652937604

Option 2 ID : 41652937603

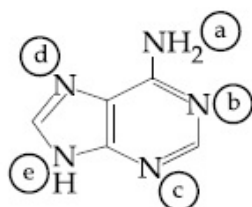
Option 3 ID : 41652937605

Option 4 ID : 41652937602

Status : Marked For Review

Chosen Option : 2

Q.13 In the following compound,



the favourable site/s for protonation is/are :

- Options
1. (a) and (e)
 2. (b), (c) and (d)
 3. (a) and (d)
 4. (a)

Question ID : 4165299539

Option 1 ID : 41652937615

Option 2 ID : 41652937616

Option 3 ID : 41652937617

Option 4 ID : 41652937614

Status : Marked For Review

Chosen Option : 2

Q.14

Taj Mahal is being slowly disfigured and discoloured. This is primarily due to :

- Options
1. global warming
 2. acid rain
 3. water pollution
 4. soil pollution

Question ID : 4165299554
Option 1 ID : 41652937675
Option 2 ID : 41652937676
Option 3 ID : 41652937677
Option 4 ID : 41652937674
Status : Marked For Review
Chosen Option : 2

Q.15 The relative stability of +1 oxidation state of group 13 elements follows the order :

- Options
1. Al < Ga < Tl < In
 2. Tl < In < Ga < Al
 3. Ga < Al < In < Tl
 4. Al < Ga < In < Tl

Question ID : 4165299550
Option 1 ID : 41652937661
Option 2 ID : 41652937659
Option 3 ID : 41652937660
Option 4 ID : 41652937658
Status : Marked For Review
Chosen Option : 2

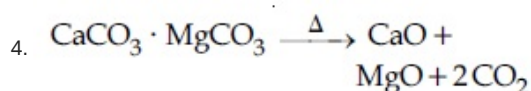
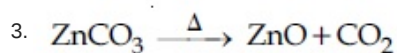
Q.16 For the equilibrium,
 $2 \text{H}_2\text{O} \rightleftharpoons \text{H}_3\text{O}^+ + \text{OH}^-$, the value of ΔG°
at 298 K is approximately :

- Options
1. 100 kJ mol^{-1}
 2. -80 kJ mol^{-1}
 3. 80 kJ mol^{-1}
 4. -100 kJ mol^{-1}

Question ID : 4165299562
Option 1 ID : 41652937709
Option 2 ID : 41652937707
Option 3 ID : 41652937708
Option 4 ID : 41652937706
Status : Marked For Review
Chosen Option : 2

Q.17 The reaction that does NOT define calcination is :

- Options
1. $\text{Fe}_2\text{O}_3 \cdot \text{XH}_2\text{O} \xrightarrow{\Delta} \text{Fe}_2\text{O}_3 + \text{XH}_2\text{O}$
 2. $2 \text{Cu}_2\text{S} + 3 \text{O}_2 \xrightarrow{\Delta} 2 \text{Cu}_2\text{O} + 2 \text{SO}_2$



Question ID : 4165299547

Option 1 ID : 41652937646

Option 2 ID : 41652937649

Option 3 ID : 41652937647

Option 4 ID : 41652937648

Status : Marked For Review

Chosen Option : 2

Q.18 A compound 'X' on treatment with Br_2/NaOH , provided $\text{C}_3\text{H}_9\text{N}$, which gives positive carbylamine test. Compound 'X' is :

- Options
1. $\text{CH}_3\text{COCH}_2\text{NHCH}_3$
 2. $\text{CH}_3\text{CH}_2\text{COCH}_2\text{NH}_2$
 3. $\text{CH}_3\text{CH}_2\text{CH}_2\text{CONH}_2$
 4. $\text{CH}_3\text{CON}(\text{CH}_3)_2$

Question ID : 4165299540

Option 1 ID : 41652937621

Option 2 ID : 41652937618

Option 3 ID : 41652937619

Option 4 ID : 41652937620

Status : Marked For Review

Chosen Option : 2

Q.19 Among the colloids cheese (C), milk (M) and smoke (S), the correct combination of the dispersed phase and dispersion medium, respectively is :

- Options
1. C : liquid in solid; M : liquid in solid ;
S : solid in gas
 2. C : liquid in solid; M : liquid in liquid ;
S : solid in gas
 3. C : solid in liquid; M : liquid in liquid ;
S : gas in solid
 4. C : solid in liquid; M : solid in liquid ;
S : solid in gas

Question ID : 4165299565

Option 1 ID : 41652937720

Option 2 ID : 41652937721

Option 3 ID : 41652937718

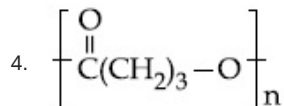
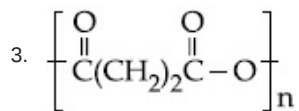
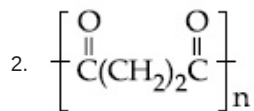
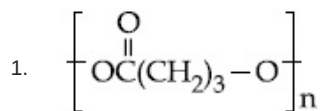
Option 4 ID : 41652937719

Status : Marked For Review

Chosen Option : 2

Q.20 The homopolymer formed from 4-hydroxybutanoic acid is :

Options



Question ID : 4165299538

Option 1 ID : 41652937610

Option 2 ID : 41652937611

Option 3 ID : 41652937612

Option 4 ID : 41652937613

Status : Marked For Review

Chosen Option : 2

Q.21 K_2HgI_4 is 40% ionised in aqueous solution.
The value of its van't Hoff factor (i) is :

Options 1. 1.6

2. 1.8

3. 2.0

4. 2.2

Question ID : 4165299561

Option 1 ID : 41652937702

Option 2 ID : 41652937703

Option 3 ID : 41652937704

Option 4 ID : 41652937705

Status : Marked For Review

Chosen Option : 1

Q.22 25 ml of the given HCl solution requires 30 mL of 0.1 M sodium carbonate solution. What is the volume of this HCl solution required to titrate 30 mL of 0.2 M aqueous NaOH solution ?

Options 1. 25 mL

2. 75 mL

3. 50 mL

4. 12.5 mL

Question ID : 4165299556

Option 1 ID : 41652937682

Option 2 ID : 41652937684

Option 3 ID : 41652937683

Option 4 ID : 41652937685

Status : Marked For Review

Chosen Option : 3

Q.23 The reaction $2X \rightarrow B$ is a zeroth order reaction. If the initial concentration of X is 0.2 M, the half-life is 6 h. When the initial concentration of X is 0.5 M, the time required to reach its final concentration of 0.2 M will be :

- Options
1. 9.0 h
 2. 12.0 h
 3. 18.0 h
 4. 7.2 h

Question ID : 4165299564

Option 1 ID : 41652937716

Option 2 ID : 41652937717

Option 3 ID : 41652937715

Option 4 ID : 41652937714

Status : Marked For Review

Chosen Option : 2

Q.24 Match the following items in column I with the corresponding items in column II.

Column I	Column II
(i) $\text{Na}_2\text{CO}_3 \cdot 10 \text{H}_2\text{O}$ (A)	Portland cement ingredient
(ii) $\text{Mg}(\text{HCO}_3)_2$ (B)	Castner-Kellner process
(iii) NaOH (C)	Solvay process
(iv) $\text{Ca}_3\text{Al}_2\text{O}_6$ (D)	Temporary hardness

- Options
1. (i)→(B); (ii)→(C); (iii)→(A); (iv)→(D)
 2. (i)→(C); (ii)→(B); (iii)→(D); (iv)→(A)
 3. (i)→(D); (ii)→(A); (iii)→(B); (iv)→(C)
 4. (i)→(C); (ii)→(D); (iii)→(B); (iv)→(A)

Question ID : 4165299549

Option 1 ID : 41652937654

Option 2 ID : 41652937655

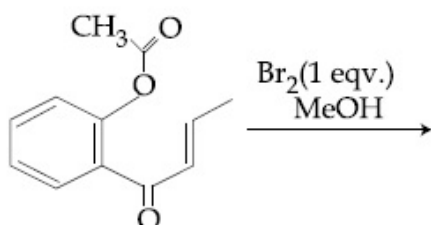
Option 3 ID : 41652937657

Option 4 ID : 41652937656

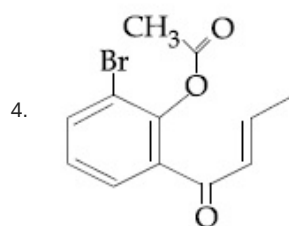
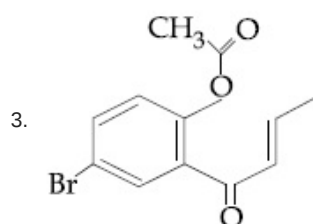
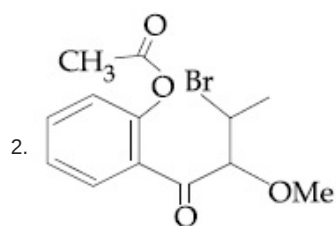
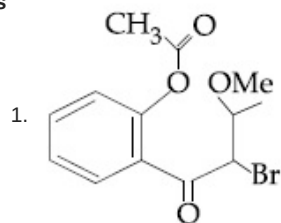
Status : Marked For Review

Chosen Option : 4

Q.25 The major product obtained in the following conversion is :



Options



Question ID : 4165299543

Option 1 ID : 41652937632

Option 2 ID : 41652937633

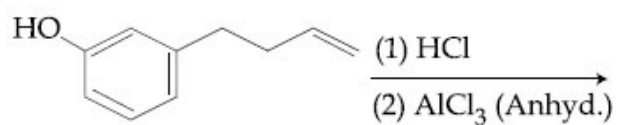
Option 3 ID : 41652937631

Option 4 ID : 41652937630

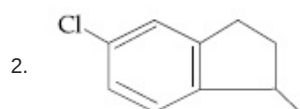
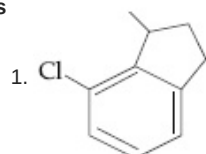
Status : Marked For Review

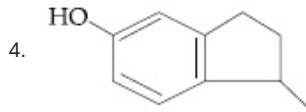
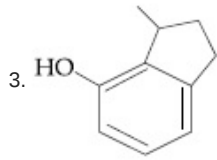
Chosen Option : 1

Q.26 The major product of the following reaction is :



Options





Question ID : 4165299542

Option 1 ID : 41652937627

Option 2 ID : 41652937629

Option 3 ID : 41652937626

Option 4 ID : 41652937628

Status : Marked For Review

Chosen Option : 2

Q.27 The higher concentration of which gas in air can cause stiffness of flower buds ?

- Options
1. NO₂
 2. CO₂
 3. SO₂
 4. CO

Question ID : 4165299555

Option 1 ID : 41652937680

Option 2 ID : 41652937679

Option 3 ID : 41652937678

Option 4 ID : 41652937681

Status : Marked For Review

Chosen Option : 2

Q.28 The correct match between Item I and Item II is :

Item I	Item II
(A) Ester test	(P) Tyr
(B) Carbylamine test	(Q) Asp
(C) Phthalein dye test	(R) Ser
	(S) Lys

- Options
1. (A)→(Q); (B)→(S); (C)→(P)
 2. (A)→(R); (B)→(Q); (C)→(P)
 3. (A)→(R); (B)→(S); (C)→(Q)
 4. (A)→(Q); (B)→(S); (C)→(R)

Question ID : 4165299537

Option 1 ID : 41652937607

Option 2 ID : 41652937608

Option 3 ID : 41652937609

Option 4 ID : 41652937606

Status : Marked For Review

Chosen Option : 2

Q.29

The number of bridging CO ligand(s) and Co-Co bond(s) in $\text{Co}_2(\text{CO})_8$, respectively are :

- Options
1. 2 and 1
 2. 2 and 0
 3. 0 and 2
 4. 4 and 0

Question ID : 4165299552

Option 1 ID : 41652937668

Option 2 ID : 41652937667

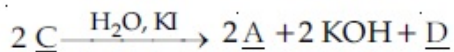
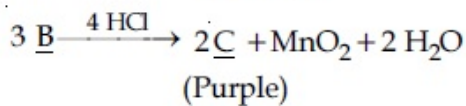
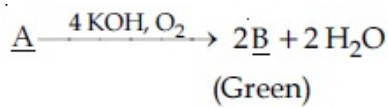
Option 3 ID : 41652937666

Option 4 ID : 41652937669

Status : Marked For Review

Chosen Option : 2

Q.30



In the above sequence of reactions, $\underline{\text{A}}$ and $\underline{\text{D}}$, respectively, are :

- Options
1. KI and KMnO_4
 2. MnO_2 and KIO_3
 3. KIO_3 and MnO_2
 4. KI and K_2MnO_4

Question ID : 4165299551

Option 1 ID : 41652937665

Option 2 ID : 41652937663

Option 3 ID : 41652937664

Option 4 ID : 41652937662

Status : Marked For Review

Chosen Option : 2

Section : Mathematics

Q.1

$\lim_{x \rightarrow 0} \frac{x \cot(4x)}{\sin^2 x \cot^2(2x)}$ is equal to :

- Options
1. 0
 2. 2
 3. 4
 4. 1

Question ID : 4165299575

Option 1 ID : 41652937759

Option 2 ID : 41652937758

Option 3 ID : 41652937761

Option 4 ID : 41652937760
 Status : Marked For Review
 Chosen Option : 4

Q.2 All x satisfying the inequality $(\cot^{-1}x)^2 - 7(\cot^{-1}x) + 10 > 0$, lie in the interval :

- Options
1. $(-\infty, \cot 5) \cup (\cot 4, \cot 2)$
 2. $(\cot 2, \infty)$
 3. $(-\infty, \cot 5) \cup (\cot 2, \infty)$
 4. $(\cot 5, \cot 4)$

Question ID : 4165299594
 Option 1 ID : 41652937836
 Option 2 ID : 41652937835
 Option 3 ID : 41652937837
 Option 4 ID : 41652937834
 Status : Marked For Review
 Chosen Option : 4

Q.3 If a hyperbola has length of its conjugate axis equal to 5 and the distance between its foci is 13, then the eccentricity of the hyperbola is :

- Options
1. $\frac{13}{12}$
 2. 2
 3. $\frac{13}{6}$
 4. $\frac{13}{8}$

Question ID : 4165299587
 Option 1 ID : 41652937809
 Option 2 ID : 41652937807
 Option 3 ID : 41652937806
 Option 4 ID : 41652937808
 Status : Marked For Review
 Chosen Option : 1

Q.4 If the area of the triangle whose one vertex is at the vertex of the parabola, $y^2 + 4(x - a^2) = 0$ and the other two vertices are the points of intersection of the parabola and y -axis, is 250 sq. units, then a value of 'a' is :

- Options
1. $5\sqrt{5}$
 2. $5(2^{1/3})$
 3. $(10)^{2/3}$

4. 5

Question ID : 4165299586
 Option 1 ID : 41652937805
 Option 2 ID : 41652937802
 Option 3 ID : 41652937803
 Option 4 ID : 41652937804
 Status : Marked For Review
 Chosen Option : 4

Q.5 Two lines $\frac{x-3}{1} = \frac{y+1}{3} = \frac{z-6}{-1}$ and $\frac{x+5}{7} = \frac{y-2}{-6} = \frac{z-3}{4}$ intersect at the point R.

The reflection of R in the xy -plane has coordinates :

- Options
1. $(2, -4, -7)$
 2. $(2, 4, 7)$
 3. $(2, -4, 7)$
 4. $(-2, 4, 7)$

Question ID : 4165299588
 Option 1 ID : 41652937810
 Option 2 ID : 41652937811
 Option 3 ID : 41652937812
 Option 4 ID : 41652937813
 Status : Marked For Review
 Chosen Option : 4

Q.6 Contrapositive of the statement "If two numbers are not equal, then their squares are not equal." is :

- Options
1. If the squares of two numbers are not equal, then the numbers are equal.
 2. If the squares of two numbers are equal, then the numbers are not equal.
 3. If the squares of two numbers are equal, then the numbers are equal.
 4. If the squares of two numbers are not equal, then the numbers are not equal.

Question ID : 4165299595
 Option 1 ID : 41652937840
 Option 2 ID : 41652937838
 Option 3 ID : 41652937841
 Option 4 ID : 41652937839
 Status : Marked For Review
 Chosen Option : 3

Q.7

If in a parallelogram $ABDC$, the coordinates of A , B and C are respectively $(1, 2)$, $(3, 4)$ and $(2, 5)$, then the equation of the diagonal AD is :

- Options
1. $5x - 3y + 1 = 0$
 2. $5x + 3y - 11 = 0$
 3. $3x - 5y + 7 = 0$
 4. $3x + 5y - 13 = 0$

Question ID : 4165299583

Option 1 ID : 41652937791

Option 2 ID : 41652937790

Option 3 ID : 41652937792

Option 4 ID : 41652937793

Status : Marked For Review

Chosen Option : 1

Q.8

The integral $\int_{\pi/6}^{\pi/4} \frac{dx}{\sin 2x (\tan^5 x + \cot^5 x)}$ equals :

- Options
1. $\frac{1}{20} \tan^{-1} \left(\frac{1}{9\sqrt{3}} \right)$
 2. $\frac{1}{10} \left(\frac{\pi}{4} - \tan^{-1} \left(\frac{1}{9\sqrt{3}} \right) \right)$
 3. $\frac{\pi}{40}$
 4. $\frac{1}{5} \left(\frac{\pi}{4} - \tan^{-1} \left(\frac{1}{3\sqrt{3}} \right) \right)$

Question ID : 4165299580

Option 1 ID : 41652937781

Option 2 ID : 41652937778

Option 3 ID : 41652937780

Option 4 ID : 41652937779

Status : Marked For Review

Chosen Option : 2

Q.9 Let x, y be positive real numbers and m, n positive integers. The maximum value of

the expression $\frac{x^m y^n}{(1+x^{2m})(1+y^{2n})}$ is :

- Options
1. 1
 2. $\frac{1}{2}$

3. $\frac{1}{4}$

4. $\frac{m+n}{6mn}$

Question ID : 4165299578

Option 1 ID : 41652937771

Option 2 ID : 41652937773

Option 3 ID : 41652937770

Option 4 ID : 41652937772

Status : Marked For Review

Chosen Option : 4

Q.10 Let $S_n = 1 + q + q^2 + \dots + q^n$ and

$$T_n = 1 + \left(\frac{q+1}{2}\right) + \left(\frac{q+1}{2}\right)^2 + \dots + \left(\frac{q+1}{2}\right)^n$$

where q is a real number and $q \neq 1$. If

$${}^{101}C_1 + {}^{101}C_2 \cdot S_1 + \dots + {}^{101}C_{101} \cdot S_{100} = \alpha T_{100}$$

then α is equal to :Options 1. 2^{99}

2. 202

3. 200

4. 2^{100}

Question ID : 4165299574

Option 1 ID : 41652937757

Option 2 ID : 41652937754

Option 3 ID : 41652937755

Option 4 ID : 41652937756

Status : Marked For Review

Chosen Option : 4

Q.11 Let α and β be the roots of the quadratic equation

$$x^2 \sin\theta - x(\sin\theta \cos\theta + 1) + \cos\theta = 0$$

 $(0 < \theta < 45^\circ)$, and $\alpha < \beta$. Then

$$\sum_{n=0}^{\infty} \left(\alpha^n + \frac{(-1)^n}{\beta^n} \right)$$
 is equal to :

Options

1. $\frac{1}{1-\cos\theta} - \frac{1}{1+\sin\theta}$

2. $\frac{1}{1+\cos\theta} + \frac{1}{1-\sin\theta}$

3. $\frac{1}{1-\cos\theta} + \frac{1}{1+\sin\theta}$

4. $\frac{1}{1+\cos\theta} - \frac{1}{1-\sin\theta}$

Question ID : 4165299568

Option 1 ID : 41652937731

Option 2 ID : 41652937732

Option 3 ID : 41652937733

Option 4 ID : 41652937730

Status : Marked For Review

Chosen Option : 4

Q.12 A bag contains 30 white balls and 10 red balls. 16 balls are drawn one by one randomly from the bag with replacement. If X be the number of white balls drawn,

then $\left(\frac{\text{mean of } X}{\text{standard deviation of } X}\right)$ is equal

to :

Options 1. 4

2. $4\sqrt{3}$

3. $3\sqrt{2}$

4. $\frac{4\sqrt{3}}{3}$

Question ID : 4165299591

Option 1 ID : 41652937825

Option 2 ID : 41652937824

Option 3 ID : 41652937822

Option 4 ID : 41652937823

Status : Marked For Review

Chosen Option : 4

Q.13 Let z be a complex number such that

$$|z| + z = 3 + i \text{ (where } i = \sqrt{-1}\text{).}$$

Then $|z|$ is equal to :

Options

1. $\frac{\sqrt{34}}{3}$

2. $\frac{5}{3}$

3. $\frac{\sqrt{41}}{4}$

4. $\frac{5}{4}$

Question ID : 4165299567

Option 1 ID : 41652937728

Option 2 ID : 41652937726

Option 3 ID : 41652937729

Option 4 ID : 41652937727

Status : Marked For Review

Chosen Option : 4

Q.14

$$\text{If } \begin{vmatrix} a-b-c & 2a & 2a \\ 2b & b-c-a & 2b \\ 2c & 2c & c-a-b \end{vmatrix}$$

$= (a+b+c) (x+a+b+c)^2$, $x \neq 0$ and $a+b+c \neq 0$, then x is equal to :

- Options
1. abc
 2. $-(a+b+c)$
 3. $2(a+b+c)$
 4. $-2(a+b+c)$

Question ID : 4165299570

Option 1 ID : 41652937738

Option 2 ID : 41652937740

Option 3 ID : 41652937739

Option 4 ID : 41652937741

Status : Marked For Review

Chosen Option : 4

Q.15

Let $\sqrt{3}\hat{i} + \hat{j}$, $\hat{i} + \sqrt{3}\hat{j}$ and $\beta\hat{i} + (1-\beta)\hat{j}$ respectively be the position vectors of the points A, B and C with respect to the origin O. If the distance of C from the bisector of the acute angle between OA and OB is $\frac{3}{\sqrt{2}}$, then the sum of all possible values of β is :

- Options
1. 4
 2. 3
 3. 2
 4. 1

Question ID : 4165299590

Option 1 ID : 41652937821

Option 2 ID : 41652937820

Option 3 ID : 41652937819

Option 4 ID : 41652937818

Status : Marked For Review

Chosen Option : 4

Q.16 If 19th term of a non-zero A.P. is zero, then its (49th term) : (29th term) is :

- Options
1. 4 : 1
 2. 1 : 3
 3. 3 : 1
 4. 2 : 1

Question ID : 4165299573

Option 1 ID : 41652937750

Option 2 ID : 41652937751

Option 3 ID : 41652937753

Option 4 ID : 41652937752

Status : **Marked For Review**
Chosen Option : **3**

Q.17

If $\int \frac{x+1}{\sqrt{2x-1}} dx = f(x)\sqrt{2x-1} + C$, where C

is a constant of integration, then $f(x)$ is equal to :

Options

1. $\frac{1}{3}(x+1)$
2. $\frac{2}{3}(x+2)$
3. $\frac{2}{3}(x-4)$
4. $\frac{1}{3}(x+4)$

Question ID : **4165299579**
Option 1 ID : **41652937774**
Option 2 ID : **41652937775**
Option 3 ID : **41652937776**
Option 4 ID : **41652937777**
Status : **Answered**
Chosen Option : **4**

Q.18 Let a function $f: (0, \infty) \rightarrow (0, \infty)$ be defined

by $f(x) = \left| 1 - \frac{1}{x} \right|$. Then f is :

Options

1. not injective but it is surjective
2. injective only
3. neither injective nor surjective
4. both injective as well as surjective

Question ID : **4165299566**
Option 1 ID : **41652937723**
Option 2 ID : **41652937722**
Option 3 ID : **41652937724**
Option 4 ID : **41652937725**
Status : **Marked For Review**
Chosen Option : **4**

Q.19

Let K be the set of all real values of x where the function $f(x) = \sin |x| - |x| + 2(x - \pi) \cos |x|$ is not differentiable. Then the set K is equal to :

Options

1. ϕ (an empty set)
2. $\{\pi\}$
3. $\{0\}$
4. $\{0, \pi\}$

Question ID : **4165299576**

Option 1 ID : 41652937765
 Option 2 ID : 41652937763
 Option 3 ID : 41652937762
 Option 4 ID : 41652937764
 Status : Marked For Review
 Chosen Option : 4

Q.20 The area(in sq. units) in the first quadrant bounded by the parabola, $y = x^2 + 1$, the tangent to it at the point (2, 5) and the coordinate axes is :

Options

1. $\frac{8}{3}$
2. $\frac{37}{24}$
3. $\frac{187}{24}$
4. $\frac{14}{3}$

Question ID : 4165299581
 Option 1 ID : 41652937783
 Option 2 ID : 41652937782
 Option 3 ID : 41652937784
 Option 4 ID : 41652937785
 Status : Marked For Review
 Chosen Option : 3

Q.21 Given $\frac{b+c}{11} = \frac{c+a}{12} = \frac{a+b}{13}$ for a ΔABC with usual notation. If $\frac{\cos A}{\alpha} = \frac{\cos B}{\beta} = \frac{\cos C}{\gamma}$, then the ordered triad (α, β, γ) has a value :

- Options
1. (7, 19, 25)
 2. (3, 4, 5)
 3. (5, 12, 13)
 4. (19, 7, 25)

Question ID : 4165299593
 Option 1 ID : 41652937832
 Option 2 ID : 41652937830
 Option 3 ID : 41652937833
 Option 4 ID : 41652937831
 Status : Marked For Review
 Chosen Option : 1

Q.22 The solution of the differential equation,

$$\frac{dy}{dx} = (x-y)^2, \text{ when } y(1) = 1, \text{ is :}$$

Options

1. $\log_e \left| \frac{2-x}{2-y} \right| = x-y$
2. $-\log_e \left| \frac{1-x+y}{1+x-y} \right| = 2(x-1)$
3. $-\log_e \left| \frac{1+x-y}{1-x+y} \right| = x+y-2$
4. $\log_e \left| \frac{2-y}{2-x} \right| = 2(y-1)$

Question ID : 4165299582

Option 1 ID : 41652937788

Option 2 ID : 41652937786

Option 3 ID : 41652937789

Option 4 ID : 41652937787

Status : Marked For Review

Chosen Option : 3

Q.23 Let the length of the latus rectum of an ellipse with its major axis along x -axis and centre at the origin, be 8. If the distance between the foci of this ellipse is equal to the length of its minor axis, then which one of the following points lies on it ?

Options

1. $(4\sqrt{2}, 2\sqrt{2})$
2. $(4\sqrt{3}, 2\sqrt{2})$
3. $(4\sqrt{3}, 2\sqrt{3})$
4. $(4\sqrt{2}, 2\sqrt{3})$

Question ID : 4165299584

Option 1 ID : 41652937794

Option 2 ID : 41652937797

Option 3 ID : 41652937796

Option 4 ID : 41652937795

Status : Marked For Review

Chosen Option : 2

Q.24 Let $S = \{1, 2, \dots, 20\}$. A subset B of S is said to be "nice", if the sum of the elements of B is 203. Then the probability that a randomly chosen subset of S is "nice" is :

Options

1. $\frac{7}{2^{20}}$
2. $\frac{5}{2^{20}}$
3. $\frac{4}{2^{20}}$

4. $\frac{6}{2^{20}}$

Question ID : 4165299592

Option 1 ID : 41652937829

Option 2 ID : 41652937826

Option 3 ID : 41652937828

Option 4 ID : 41652937827

Status : Marked For Review

Chosen Option : 4

Q.25 If the point $(2, \alpha, \beta)$ lies on the plane which passes through the points $(3, 4, 2)$ and $(7, 0, 6)$ and is perpendicular to the plane $2x - 5y = 15$, then $2\alpha - 3\beta$ is equal to :

- Options
1. 12
 2. 7
 3. 5
 4. 17

Question ID : 4165299589

Option 1 ID : 41652937815

Option 2 ID : 41652937817

Option 3 ID : 41652937816

Option 4 ID : 41652937814

Status : Marked For Review

Chosen Option : 2

Q.26 Let $(x + 10)^{50} + (x - 10)^{50} = a_0 + a_1x + a_2x^2 + \dots + a_{50}x^{50}$, for all $x \in \mathbf{R}$; then $\frac{a_2}{a_0}$ is equal to :

- Options
1. 12.50
 2. 12.00
 3. 12.25
 4. 12.75

Question ID : 4165299572

Option 1 ID : 41652937747

Option 2 ID : 41652937749

Option 3 ID : 41652937748

Option 4 ID : 41652937746

Status : Marked For Review

Chosen Option : 4

Q.27 The number of functions f from $\{1, 2, 3, \dots, 20\}$ onto $\{1, 2, 3, \dots, 20\}$ such that $f(k)$ is a multiple of 3, whenever k is a multiple of 4, is :

- Options
1. $6^5 \times (15)!$
 2. $5! \times 6!$

3. $(15)! \times 6!$

4. $5^6 \times 15$

Question ID : 4165299571

Option 1 ID : 41652937744

Option 2 ID : 41652937742

Option 3 ID : 41652937745

Option 4 ID : 41652937743

Status : Marked For Review

Chosen Option : 4

Q.28 A circle cuts a chord of length $4a$ on the x -axis and passes through a point on the y -axis, distant $2b$ from the origin. Then the locus of the centre of this circle, is :

- Options
1. a hyperbola
 2. an ellipse
 3. a straight line
 4. a parabola

Question ID : 4165299585

Option 1 ID : 41652937801

Option 2 ID : 41652937799

Option 3 ID : 41652937798

Option 4 ID : 41652937800

Status : Marked For Review

Chosen Option : 4

Q.29 Let $f(x) = \frac{x}{\sqrt{a^2 + x^2}} - \frac{d-x}{\sqrt{b^2 + (d-x)^2}}$, $x \in \mathbf{R}$,

where a , b and d are non-zero real constants. Then :

- Options
1. f is an increasing function of x
 2. f is a decreasing function of x
 3. f' is not a continuous function of x
 4. f is neither increasing nor decreasing function of x

Question ID : 4165299577

Option 1 ID : 41652937766

Option 2 ID : 41652937768

Option 3 ID : 41652937769

Option 4 ID : 41652937767

Status : Marked For Review

Chosen Option : 4

Q.30 Let A and B be two invertible matrices of order 3×3 . If $\det(ABA^T) = 8$ and $\det(AB^{-1}) = 8$, then $\det(BA^{-1}B^T)$ is equal to :

- Options
1. $\frac{1}{4}$

2. **1**

3. $\frac{1}{16}$

4. **16**

Question ID : **4165299569**

Option 1 ID : **41652937735**

Option 2 ID : **41652937734**

Option 3 ID : **41652937737**

Option 4 ID : **41652937736**

Status : **Marked For Review**

Chosen Option : **4**