



RAILWAY RECRUITMENT BOARDS

रेलवे भर्ती बोर्ड

RRB NTPC 2nd April 2016 Shift 2

Test Date:	02/04/2016
Test Time:	12:30 PM - 2:00 PM
Subject:	RRB NTPC Graduate

- Options shown in green color with a tick icon are correct
- Chosen option on top right of the question indicates the option selected by the candidate

Q.1 Rearrange the following jumbled sentences to make a meaningful one:

P: weather conditions across a vast geographic

Q: the climate of India

R: scale and varied topography

S: comprises of a wide range of

The proper sequence should be:

- A. SRQP
- B. QSPR
- C. PQRS
- D. QRPS

Ans 1. A
 2. B
 3. C
 4. D

Question ID : 988837900

Status : Answered

Chosen Option : 2

Q.2 Choose the pair which is related in the same way as the words in the first pair from the given choices.

SOLDIERS : ARMY :: MUSICIANS : _____

- A. FLOCK
- B. GANG
- C. COLONY
- D. BAND

Ans 1. C
 2. D
 3. B
 4. A

Question ID : 988837926

Status : Answered

Chosen Option : 2

Q.3 The process when the computer is switched on and the operating system gets loaded from hard disk to main memory is called -

- A. Booting
- B. Fetching
- C. Processing
- D. Multi-Processing

Ans 1. B
 2. A
 3. C
 4. D

Question ID : 988837858

Status : Answered

Chosen Option : 2

Q.4

Question ID : 988837843

Status : Answered

Which Indian won the 2014 Nobel Prize for Peace?

Chosen Option : 4

- A. Kailash Satyarthi
- B. Malala Yosufzai
- C. Sanjiv Chaturvedi
- D. Anshu Gupta

Ans  1. C
 2. B
 3. D
 4. A

Q.5 If three numbers are in the ratio 2:3:5 and the twice their sum is 100. Find the square of the largest of the three numbers.

- A. 225
- B. 625
- C. 25
- D. 100

Ans  1. A
 2. C
 3. B
 4. D

Question ID : 988837873

Status : Answered

Chosen Option : 3

Q.6 Who was the first President of the Indian National Congress?

- A. Womesh Chunder Bonnerjee
- B. Bal Gangadhar Tilak
- C. Allan Octavian Hume
- D. Dadabhai Naoroji

Ans  1. A
 2. C
 3. D
 4. B



Question ID : 988837833

Status : Answered

Chosen Option : 1

Q.7 What is the compound interest on Rs. 48,000 for 2 years at 20 % p.a., if interest is compounded annually?

- A. Rs. 69,120
- B. Rs. 21,120
- C. Rs. 76,800
- D. Rs. 72,000

Ans  1. B
 2. D
 3. A
 4. C

Question ID : 988837879

Status : Answered

Chosen Option : 1

Q.8 A ladder 20 m long is leaning against a vertical wall. It makes an angle of 30° with the ground. How high on the wall does the ladder reach?

- A. 10 m
- B. 17.32 m
- C. 34.64 m
- D. 30 m

Ans  1. C
 2. D
 3. B
 4. A

Question ID : 988837893

Status : Answered

Chosen Option : 4

Q.9 Ram said, "Sita is my paternal great grandfather's only son's only daughter-in-law". How is Sita related to Ram?

- A. Maternal Aunt
- B. Paternal Aunt
- C. Mother
- D. Sister

Ans  1. B

Question ID : 988837897

Status : Answered

Chosen Option : 2

✓ 2. C

✗ 3. D

✗ 4. A

Q.10 A piece of cloth costs Rs. 35. If the piece were 4 m longer and each meter were to cost Rs. 1 lesser, then the total cost would remain unchanged. How long is the piece of cloth?

- A. 10 m
- B. 14 m
- C. 12 m
- D. 8 m

Ans ✗ 1. B

✗ 2. D

✗ 3. C

✓ 4. A

Question ID : 988837886

Status : Answered

Chosen Option : 4

Q.11 In 2013, the first woman to be elected as the President of South Korea is -

- A. Park Young-sun
- B. Yuk Young-soo
- C. Park Geun-hye
- D. Sim Sang-jung

Ans ✗ 1. A

✗ 2. B

✓ 3. C

✗ 4. D

Question ID : 988837825

Status : Not Attempted and Marked For Review

Chosen Option : --

Q.12 The Mughal empire was founded by -

- A. Babur
- B. Humayun
- C. Akbar
- D. Shah Jahan

Ans ✓ 1. A

✗ 2. D

✗ 3. B

✗ 4. C

Question ID : 988837832

Status : Answered

Chosen Option : 1

Q.13 Two poles of the height 15 m and 20 m stand vertically upright on a plane ground. If the distance between their feet is 12 m, find the distance between their tops.

- A. 11 m
- B. 12 m
- C. 13 m
- D. 14 m

Ans ✗ 1. A

✗ 2. D

✗ 3. B

✓ 4. C

Question ID : 988837889

Status : Answered

Chosen Option : 3

Q.14 How is Sameer related to Akbar if Sameer introduced Akbar as his maternal grandmother's only son's son?

- A. Brother
- B. Son
- C. Maternal Uncle
- D. Cousin

Ans ✗ 1. B

✗ 2. C

✓ 3. D

✗ 4. A

Question ID : 988837896

Status : Answered

Chosen Option : 3

Q.15

Question ID : 988837915

Given below is a statement followed by some conclusions. You have to take the given statement to be true even if it seems to be at variance with the commonly known facts and then decide which of the given conclusions logically follow(s) from the given statement.

Statement:

According to a recent health survey, people who exercise for at least half an hour every day are less prone to lifestyle diseases.

Conclusions:

- I. Moderate exercise is essential to lead a healthy life.
II. Everyone with no exercise on their routine suffer from lifestyle diseases.

- A. Only conclusion I follows
B. Only conclusion II follows
C. Both I and II follow
D. Neither of them follows

Ans 1. A

2. B

3. C

4. D

Status : **Answered**

Chosen Option : 3

Q.16 কোন দাবার গুটি সোজা এগিয়ে চলে কিন্তু কোণাকুণি আক্রমণ করে?

- A. ঘোড়া (Knight)
B. নৌকো (Rook)
C. হাতি (Bishop)
D. সৈনিক (Pawn)

Ans 1. C

2. D

3. A

4. B

Question ID : 988837837

Status : **Answered**

Chosen Option : 3

Q.17 The oldest oil field in Asia is located in -

- A. Gujarat
B. Assam
C. Arunachal Pradesh
D. Nagaland

Ans 1. C

2. B

3. A

4. D

Question ID : 988837829

Status : **Answered**

Chosen Option : 2

Q.18 The simple interest on a certain sum of money invested at a certain rate for 2 years amounts to Rs. 1200. The compound interest on the same sum of money invested at the same rate of interest for 2 years amounts to Rs. 1290. What was the principal?

- A. Rs. 12000
B. Rs. 16000
C. Rs. 6000
D. Rs. 4000

Ans 1. C

2. A

3. D

4. B

Question ID : 988837880

Status : **Not Attempted and Marked For Review**

Chosen Option : --

Q.19 Which of the following is false?

Sound waves are _____ waves.

- A. Pressure
B. Longitudinal
C. Electromagnetic
D. Mechanical

Ans 1. B

2. C

Question ID : 988837846

Status : **Answered**

Chosen Option : 2

~~X~~ 3. A~~X~~ 4. D

Q.20 Given below is a statement followed by some conclusions. You have to take the given statement to be true even if it seems to be at variance with the commonly known facts and then decide which of the given conclusions logically follow(s) from the given statement.

Statement:

In some tier 2 cities in India, transportation is one of the major problems.

Conclusions:

- I. All tier 2 cities are not well connected.
 II. Lack of transportation facilities is the only problem in Indian metros.

- A. Only conclusion I follows
 B. Only conclusion II follows
 C. Both I and II follow
 D. Neither of them follows

Ans ~~X~~ 1. A

✓ 2. D

~~X~~ 3. B~~X~~ 4. C

Question ID : 988837916

Status : Answered

Chosen Option : 2

Q.21 Below are given statements. You have to take the given statements to be true even if they seem to be at variance with the commonly known facts and then decide which of the given conclusions logically follows from the given statements.

Statements:

- I. All rats are hills.
 II. All hills are rivers.

- A. Some rivers are rats
 B. No river is a hill
 C. All hills are rats
 D. No river is a rat

Ans ~~X~~ 1. C~~X~~ 2. B~~X~~ 3. D

✓ 4. A

Question ID : 988837898

Status : Answered

Chosen Option : 4

Q.22 How many bones does a new born human baby have?

- A. 350
 B. 206
 C. 211
 D. 411

Ans ~~X~~ 1. C

✓ 2. A

~~X~~ 3. D~~X~~ 4. B

Question ID : 988837850

Status : Answered

Chosen Option : 4

Q.23 Which country built the Bird's Nest Stadium for 2008 Summer Olympics?

- A. China
 B. Brazil
 C. Australia
 D. Germany

Ans ~~X~~ 1. B~~X~~ 2. D

✓ 3. A

~~X~~ 4. C

Question ID : 988837826

Status : Answered

Chosen Option : 3

Q.24 Which of the following coloured light has the lowest frequency?

- A. Green
 B. Blue
 C. Red
 D. Violet

Ans ~~X~~ 1. B

Question ID : 988837847

Status : Answered

Chosen Option : 4

 2. A 3. C 4. D

Q.25 In 2015, which auto manufacturer manipulated emissions testing data leading to the resignation of its CEO Martin Winterkom?

- A. Volkswagen
- B. Ford
- C. Toyota
- D. General Motors

Ans  1. A

 2. B 3. C 4. D

Question ID : 988837827

Status : Not Attempted and Marked For Review

Chosen Option : --

Q.26 A closed wooden rectangular box made of 1 cm thick wood has the following outer dimensions: length 22 cm, breadth 17 cm, and height 12 cm. It is filled to capacity with cement. What is the volume of the cement in the box?

- A. 1488 cu. cm
- B. 3000 cu. cm
- C. 4488 cu. cm
- D. 2880 cu. cm

Ans  1. D

 2. C 3. A 4. B

Question ID : 988837888

Status : Answered

Chosen Option : 4

Q.27 If the code for MOTHER is JRQKBU then what is the code for PRINCIPAL?

- A. MRFKZLMXI
- B. SULQFLSDO
- C. MUFQZLMDI
- D. MRFKZFMXI

Ans  1. D

 2. A 3. B 4. C

Question ID : 988837903

Status : Answered

Chosen Option : 4

Q.28 The only non-metal which is liquid at room temperature is -

- A. Mercury
- B. Bromine
- C. Chlorine
- D. Gallium

Ans  1. D

 2. C 3. A 4. B

Question ID : 988837848

Status : Answered

Chosen Option : 4

Q.29 Maanch is a folk dance from -

- A. Haryana
- B. Kerala
- C. Assam
- D. Madhya Pradesh

Ans  1. C

 2. B 3. A 4. D

Question ID : 988837831

Status : Not Attempted and Marked For Review

Chosen Option : --



RRB NTPC

Railway Recruitment Board

RRB NTPC (Tier -1 & Tier -2) Exam

- [RRB NTPC \(Tier -1\) Exam](#)
- [RRB NTPC \(Tier -2\) Exam](#)
- [Exam PAPERS](#)
- [Exam Syllabus](#)
- [Eligibility](#)
- [Medical Fitness](#)
- [RRB Post Preference & Zones List](#)
- [परीक्षा सिलेबस "Exam Syllabus in Hindi"](#)
- [Printed Study Material \(English Medium\)](#)
- [RRB NTPC Exam for Aptitude Test](#)
- [RRB NTPC Exam for Typing Skill Test](#)

[CLICK HERE](#)

**Disclaimer: rrbexamportal.com is not associated with Railway Recruitment Board,
For RRB official website visit - www.rrcb.gov.in**

Q.30 Which of the following insecticides' harmful effects came under media attention when health issues in Kerala were publicized?

- A. Endosulfan
- B. Lethal
- C. Thimet
- D. Monocil

Ans 1. A
 2. D
 3. B
 4. C

Question ID : 988837839

Status : Not Attempted and Mark ed For Review

Chosen Option : --

Q.31 The HCF and LCM of two numbers are 3 and 2730 respectively. If one of the numbers is 78, find the other number.

- A. 107
- B. 103
- C. 105
- D. 102

Ans 1. B
 2. D
 3. A
 4. C

Question ID : 988837871

Status : Answered

Chosen Option : 4

Q.32 If $A = 1$ and $OAR = 34$, then $ROAR =$

- A. 52
- B. 53
- C. 51
- D. 50

Ans 1. B
 2. D
 3. A
 4. C

Question ID : 988837901

Status : Answered

Chosen Option : 1

Q.33 Choose the one which is different or odd from the following.

- A. Aluminum
- B. Iron
- C. Copper
- D. Brass

Ans 1. C
 2. B
 3. D
 4. A

Question ID : 988837927

Status : Answered

Chosen Option : 3

Q.34 According to the Constitution, the ratio between the length and breadth of the national tricolor should be -

- A. 3 : 2
- B. 3 : 1
- C. 2 : 1
- D. 4 : 3

Ans 1. A
 2. C
 3. B
 4. D

Question ID : 988837840

Status : Answered

Chosen Option : 1

Q.35 If P travelled the first half of a journey at 40 km/hr and the remaining distance at 50 km/hr, what is the average speed of his travel?

- A. 44.44 km/hr
- B. 53.33 km/hr
- C. 45 km/hr
- D. 60 km/hr

Ans 1. D

Question ID : 988837878

Status : Answered

Chosen Option : 2

✓ 2. A

✗ 3. C

✗ 4. B

Q.36 Find the LCM of 15, 25 and 29.

A. 2335

B. 3337

C. 2175

D. 2375

Ans ✗ 1. A

✗ 2. B

✓ 3. C

✗ 4. D

Question ID : 988837872

Status : Answered

Chosen Option : 3

Q.37 In 1981, ISRO launched India's first geostationary satellite called -

A. Aryabhata

B. APPLE

C. Bhaskara II

D. INSAT 1B

Ans ✗ 1. C

✗ 2. A

✗ 3. D

✓ 4. B

Question ID : 988837861

Status : Answered

Chosen Option : 3

Q.38 Which of the following was the first antibiotic discovered by Alexander Fleming in 1928?

A. Penicillin

B. Prontosil

C. Streptomycin

D. Tetracycline

Ans ✗ 1. D

✓ 2. A

✗ 3. B

✗ 4. C

Question ID : 988837853

Status : Answered

Chosen Option : 2

Q.39 If '+' means \times , '-' means \div , ' \times ' means $+$ and ' \div ' means $-$; compute the value of the expression:

$$17 + 6 \times 13 \div 8$$

A. 100

B. 107

C. 110

D. 109

Ans ✗ 1. C

✗ 2. A

✗ 3. D

✓ 4. B

Question ID : 988837906

Status : Answered

Chosen Option : 4

Q.40 Which among the following is true for the given numbers?

A. $\frac{3}{8} < \frac{19}{73} < \frac{29}{47} < \frac{17}{39}$ B. $\frac{19}{73} < \frac{3}{8} < \frac{17}{39} < \frac{29}{47}$ C. $\frac{19}{73} < \frac{3}{8} < \frac{29}{47} < \frac{17}{39}$ D. $\frac{19}{73} < \frac{29}{47} < \frac{3}{8} < \frac{17}{39}$

Ans ✗ 1. C

✓ 2. B

✗ 3. A

Question ID : 988837869

Status : Answered

Chosen Option : 2

 4. D

Q.41 Divide 3740 in three parts in such a way that half of the first part, one-third of the second part and one-sixth of the third part are equal.

- A. 700, 1000, 2040
- B. 340, 1360, 2040
- C. 680, 1020, 2040
- D. 500, 1200, 2040

Ans  1. D

 2. B

 3. A

 4. C

Question ID : 988837874

Status : Answered

Chosen Option : 4

Q.42 নিম্নলিখিত ভারতের কোন রাজ্যে সাদা মরুভূমি (White Desert) অবস্থিত?

- A. গুজরাত
- B. তামিলনাড়ু
- C. জম্মু ও কাশ্মীর
- D. সিকিম

Ans  1. D

 2. B

 3. C

 4. A

Question ID : 988837828

Status : Answered

Chosen Option : 3

Q.43 Which of the following Acts under the Indian Constitution is described by Article 21A?

- A. Right to Education
- B. Right to Information
- C. Representation of the People
- D. Right to Freedom of Religion

Ans  1. A

 2. C

 3. B

 4. D

Question ID : 988837841

Status : Answered

Chosen Option : 1

Q.44 Which of the following monuments built by Muhammad Quli Qutb Shah is said to be built to commemorate the eradication of plague?

- A. Alai Minar
- B. Charminar
- C. Fateh Burj
- D. Qutub Minar

Ans  1. C

 2. D

 3. B

 4. A

Question ID : 988837845

Status : Answered

Chosen Option : 3

Q.45 Which of the following is not an example of a Word Processor?

- A. IBM Lotus Symphony
- B. Microsoft Word
- C. Google Docs
- D. Microsoft Excel

Ans  1. C

 2. A

 3. D

 4. B

Question ID : 988837859

Status : Answered

Chosen Option : 2

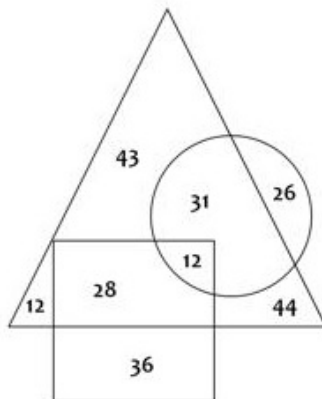
Comprehension:

Study the diagram given below and answer the questions based on it.

△ represents Persons who like Reading

○ represents Persons who like Cycling

□ represents Persons who like Trekking



SubQuestion No : 46

Q.4 How many persons like Reading?

- A. 170
- B. 154
- C. 176
- D. 117

Ans ~~1. B~~
 ✓ 2. A
~~3. C~~
~~4. D~~

Question ID : 988837920

Status : Answered

Chosen Option : 2

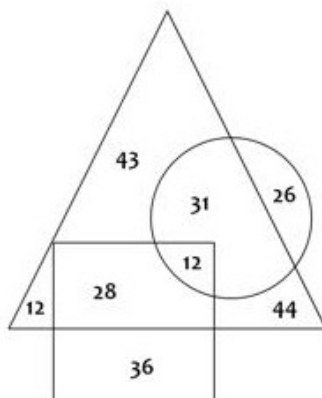
Comprehension:

Study the diagram given below and answer the questions based on it.

△ represents Persons who like Reading

○ represents Persons who like Cycling

□ represents Persons who like Trekking



SubQuestion No : 47

Q.4 How many persons like Trekking and Reading but not Cycling?

- A. 12
- B. 31
- C. 44
- D. 28

Question ID : 988837919

Status : Answered

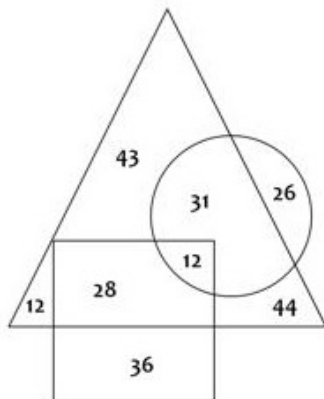
Chosen Option : 4

- Ans 1. B
 2. C
 3. A
 4. D

Comprehension:

Study the diagram given below and answer the questions based on it.

- represents Persons who like Reading
 represents Persons who like Cycling
 represents Persons who like Trekking



SubQuestion No : 48

Q.4 How many persons like Reading and Cycling but not Trekking?

- A. 31
 B. 12
 C. 26
 D. 28

Question ID : 988837918

Status : Answered

Chosen Option : 3

- Ans 1. B
 2. D
 3. A
 4. C

Q.49 There are 90 coins, comprising of 5 and 10 paise coins. The value of all the coins is Rs. 7. How many 5 paise coins are there?

- A. 50
 B. 45
 C. 40
 D. 35

Question ID : 988837885

Status : Answered

Chosen Option : 1

- Ans 1. C
 2. D
 3. B
 4. A

Q.50 How high is the badminton net at the center?

- A. 5 feet
 B. 5.1 feet
 C. 5.5 feet
 D. 4.8 feet

Question ID : 988837835

Status : Not Attempted and Mark ed For Review

Chosen Option : --

- Ans 1. D
 2. C
 3. B

✓ 4. A

Q.51 Given below is a statement followed by some conclusions. You have to take the given statement to be true even if it seems to be at variance with the commonly known facts and then decide which of the given conclusions logically follow(s) from the given statement.

Statement:

Success cannot be achieved without hard work.

Conclusions:

- I. Every hardworking person is successful.
II. Every successful person is hardworking.

- A. Only conclusion I follows
B. Only conclusion II follows
C. Both I and II follow
D. Neither of them follows

Ans ✗ 1. D

✗ 2. C

✗ 3. A

✓ 4. B

Question ID : 988837914

Status : Answered

Chosen Option : 4

Q.52 নীচের তালিকায় থাকা নম্বরগুলির মোড হবে:

52, 54, 55, 56, 55, 54, 53, 55, 53, 51, ও 57

A. 53

B. 54

C. 55

D. 52

Ans ✗ 1. A

✓ 2. C

✗ 3. D

✗ 4. B

Question ID : 988837892

Status : Not Attempted and Marked For Review

Chosen Option : --

Comprehension:

Use the following passage for the questions based on it.

There are six flats on a floor in two rows. Out of these, three are north facing and the other three are south facing flats. The flats are to be allotted amongst Arun, Biswajyot, Chitra, Derek, Evan and Fatima. Biswajyot gets a north facing flat and is not next to Derek. Derek and Fatima get diagonally opposite flats. Chitra is next to Fatima, and gets a south facing flat. Evan gets a north facing flat.

SubQuestion No : 53

Q.5 Except Derek and Fatima, which other pair is diagonally opposite to each other?

3

- A. Arun and Biswajyot
B. Arun and Chitra
C. Evan and Derek
D. Evan and Chitra

Ans ✗ 1. C

✓ 2. A

✗ 3. D

✗ 4. B

Question ID : 988837911

Status : Answered

Chosen Option : 2

Comprehension:

Use the following passage for the questions based on it.

There are six flats on a floor in two rows. Out of these, three are north facing and the other three are south facing flats. The flats are to be allotted amongst Arun, Biswajyot, Chitra, Derek, Evan and Fatima. Biswajyot gets a north facing flat and is not next to Derek. Derek and Fatima get diagonally opposite flats. Chitra is next to Fatima, and gets a south facing flat. Evan gets a north facing flat.

SubQuestion No : 54

Q.5

4

Question ID : 988837913

Status : Answered

Chosen Option : 3

RRB NTPC EXAM Study Kit



- ▶ 100% Exam Syllabus Covered
- ▶ 4 Books, 950+ Pages
- ▶ Mathematics, General Intelligence & Reasoning,
- ▶ General Science, General Awareness
- ▶ Previous year Solved Papers
- ▶ Mock Tests with Answers
- ▶ 1 Year Current Affairs



₹ 6,000/-
₹ 1,999/-
Only



For RRB Exam Courses & Study Materials Call Us at: +91-8800734161

What you will get:

- 100% Syllabus Covered in printed format.
- 4 Booklets
 - General Intelligence & Reasoning
 - General Awareness
 - Arithmetic
 - General Science
- 950+ Pages
- One Year Current Affairs (PDF Copy)
- Guidance & Support from Our Experts

Price of the Kit:

Rs. 6,000

Rs. 1,999/-

(Limited time Offer)



Net Banking

Order Online (100% Safe)

अन्य भुगतान विकल्प (Offline Payment Options)

**50%
OFF**

CLICK HERE

**Disclaimer: rrbexamportal.com is not associated with Railway Recruitment Board,
For RRB official website visit - www.rrcb.gov.in**

Which of the following pairs is exactly opposite to each other?

- A. Derek and Evan
- B. Fatima and Chitra
- C. Evan and Chitra
- D. Evan and Arun

Ans 1. D
 2. A
 3. C
 4. B

Comprehension:

Use the following passage for the questions based on it.

There are six flats on a floor in two rows. Out of these, three are north facing and the other three are south facing flats. The flats are to be allotted amongst Arun, Biswajyot, Chitra, Derek, Evan and Fatima. Biswajyot gets a north facing flat and is not next to Derek. Derek and Fatima get diagonally opposite flats. Chitra is next to Fatima, and gets a south facing flat. Evan gets a north facing flat.

SubQuestion No : 55

Q.5 Which of the following combination gets south facing flats?

- A. Arun, Chitra and Fatima
- B. Chitra, Biswajyot and Derek
- C. Evan, Arun and Fatima
- D. Derek, Arun and Biswajyot

Ans 1. C
 2. A
 3. D
 4. B

Question ID : 988837912

Status : Answered

Chosen Option : 2

Q.56 30 men working 5 hours a day can do a task in 16 days. In how many days will 40 men working 6 hours a day do the same task?

- A. 12 days
- B. 10 days
- C. 15 days
- D. 18 days

Ans 1. C
 2. B
 3. A
 4. D

Question ID : 988837875

Status : Answered

Chosen Option : 2

Comprehension:

Study the following table and answer the questions based on it.

Below is the Household Expenditure (in Thousand Rupees) per annum.

Year	Household Expenditure				
	Grocery	Rent	Leisure	EMI	Taxes
2010	32	12	5	3.4	9
2011	37	13	6.5	4.5	13
2012	46	14	7.3	5.6	17
2013	48	16	7.9	6.4	18
2014	52	18	8.5	7.4	19

SubQuestion No : 57

Q.5
7

Question ID : 988837924

Status : Answered

Chosen Option : 4

What is the total Household Expenditure for the year 2012?

- A. Rs. 89,900
- B. Rs. 87,120
- C. Rs. 89,100
- D. Rs. 88,200

Ans 1. B
 2. D
 3. C
 4. A

Comprehension:

Study the following table and answer the questions based on it.

Below is the Household Expenditure (in Thousand Rupees) per annum.

Year	Household Expenditure				
	Grocery	Rent	Leisure	EMI	Taxes
2010	32	12	5	3.4	9
2011	37	13	6.5	4.5	13
2012	46	14	7.3	5.6	17
2013	48	16	7.9	6.4	18
2014	52	18	8.5	7.4	19

SubQuestion No : 58

Q.5 Expenditure on EMI forms what percentage of expenditure on Grocery for the year 2014?

- 8
- A. 11.34 %
 - B. 14.23 %
 - C. 13.22 %
 - D. 15.55 %

Ans 1. A
 2. B
 3. D
 4. C

Question ID : 988837923

Status : Answered

Chosen Option : 2

Comprehension:

Study the following table and answer the questions based on it.

Below is the Household Expenditure (in Thousand Rupees) per annum.

Year	Household Expenditure				
	Grocery	Rent	Leisure	EMI	Taxes
2010	32	12	5	3.4	9
2011	37	13	6.5	4.5	13
2012	46	14	7.3	5.6	17
2013	48	16	7.9	6.4	18
2014	52	18	8.5	7.4	19

SubQuestion No : 59

Q.5 What is the average spending on Leisure per annum?

- 9
- A. Rs. 7,040
 - B. Rs. 6,500
 - C. Rs. 7,100
 - D. Rs. 7,400

Ans 1. B
 2. C

Question ID : 988837922

Status : Answered

Chosen Option : 4

✓ 3. A

✗ 4. D

Q.60 A triangle has a perimeter of 200. If two of its sides are equal and the third side is 20 more than the equal sides, what is the length of the third side?

- A. 60
- B. 50
- C. 80
- D. 70

Ans ✗ 1. A

✓ 2. C

✗ 3. D

✗ 4. B

Question ID : 988837894

Status : Answered

Chosen Option : 2

Q.61 The operating system UNIX is the trademark of -

- A. Microsoft
- B. Bell Laboratories
- C. Apple
- D. Motorola

Ans ✓ 1. B

✗ 2. D

✗ 3. C

✗ 4. A

Question ID : 988837857

Status : Answered

Chosen Option : 4

Q.62 The first large scale electrical air conditioning was invented and used in 1902 by -

- A. Willis Carrier
- B. John Gorrie
- C. Stuart Cramer
- D. H. H. Schultz

Ans ✓ 1. A

✗ 2. D

✗ 3. B

✗ 4. C

Question ID : 988837854

Status : Not Attempted and Marked For Review

Chosen Option : --

Q.63 The area of a triangle ABC is 63 sq. units. Two parallel lines DE, FG, are drawn such that they divide the line segments AB and AC into three equal parts. What is the area of the quadrilateral DEGF?

- A. 28 sq. units
- B. 35 sq. units
- C. 21 sq. units
- D. 48 sq. units

Ans ✗ 1. A

✓ 2. C

✗ 3. D

✗ 4. B

Question ID : 988837887

Status : Not Attempted and Marked For Review

Chosen Option : --

Q.64 Which of the following is the most common kidney stone-forming compound?

- A. Calcium oxalate
- B. Magnesium oxide
- C. Sodium bicarbonate
- D. Magnesium citrate

Ans ✗ 1. B

✗ 2. C

✗ 3. D

✓ 4. A

Question ID : 988837864

Status : Answered

Chosen Option : 4

Q.65


Question ID : 988837868

Status : Answered

Compute: $(50 + 0.5 \times 20) \div 0.7$

Chosen Option : 2

- A. 8.571
- B. 857.1
- C. 85.71
- D. 72.85

Ans  1. D
 2. C
 3. B
 4. A

Q.66 Working together, P, Q and R reap a field in 6 days. If P can do it alone in 10 days and Q in 24 days, in how many days will R alone be able to reap the field?

- A. 32 days
- B. 40 days
- C. 45 days
- D. 60 days

Ans  1. A
 2. D
 3. C
 4. B



Question ID : 988837876

Status : Answered

Chosen Option : 4

Q.67 In 2015, underground glaciers of frozen water were discovered on -

- A. Mars
- B. Venus
- C. Jupiter
- D. Saturn

Ans  1. C
 2. D
 3. B
 4. A

Question ID : 988837852

Status : Answered

Chosen Option : 4

Q.68 A shopkeeper marks the price of an article at Rs. 320. Find the cost price if after allowing a discount of 10%, he still gains 20% on the cost price.

- A. Rs. 240
- B. Rs. 280
- C. Rs. 300
- D. Rs. 264

Ans  1. A
 2. C
 3. B
 4. D

Question ID : 988837882

Status : Answered

Chosen Option : 1

Q.69 Which leader adopted Orthodox Christianity as the official religion of Russia?

- A. Vladimir the Great
- B. Michael Romanov
- C. Ivan IV
- D. Boris Godunov

Ans  1. D
 2. C
 3. A
 4. B

Question ID : 988837830

Status : Not Attempted and Marked For Review

Chosen Option : --

Q.70




Question ID : 988837902

Status : Answered

Chosen Option : 2





If RUN = 182114 and BIN = 2914, then BRING =

- A. 2189147
- B. 1178136
- C. 31910158
- D. 21910158

Ans  1. B
 2. A
 3. C
 4. D

Q.71 On an average, how many taste buds are present in a human tongue?

- A. 2000 to 8000
- B. 50000 to 100000
- C. 1 million to 10 million
- D. More than 10 million

Ans  1. C
 2. A
 3. D
 4. B





Question ID : 988837856

Status : Answered

Chosen Option : 2

Q.72 $5.16 \times 3.2 =$

- A. 15.502
- B. 16.512
- C. 17.772
- D. 17.52

Ans  1. C
 2. B
 3. D
 4. A

Question ID : 988837870





Status : Answered

Chosen Option : 2

Q.73 Choose the pair which is related in the same way as the words in the first pair from the given choices.

DOG : KENNEL :: BEE : _____

- A. HIVE
- B. BARN
- C. HOLE
- D. NEST

Ans  1. B
 2. D
 3. C
 4. A

Question ID : 988837909

Status : Answered

Chosen Option : 4

Q.74 Below are given statements followed by some conclusions. You have to take the given statements to be true even if they seem to be at variance with the commonly known facts and then decide which of the given conclusions logically follow(s) from the given statements.

Statements:

- A. Some fruits are vegetables.
- B. All vegetables are plants.

Conclusions:

- I. Some plants are vegetables.
- II. Some fruits are plants.

- A. Only conclusion I follows
- B. Only conclusion II follows
- C. Both I and II follow
- D. Neither of them follows

Ans  1. A
 2. B
 3. C
 4. D

Question ID : 988837899

Status : Answered

Chosen Option : 1

Q.75 A table was sold at a profit of 10%. If its cost price was 5% less and it was sold for Rs. 7 more, the gain would have been 20%. Find the cost price of the table.

- A. Rs. 175
- B. Rs. 200
- C. Rs. 250
- D. Rs. 150

Ans 1. C
 2. A
 3. D
 4. B

Question ID : 988837881

Status : Answered

Chosen Option : 3

Q.76 নিম্নলিখিত কোন জীবটি অযৌন জনন প্রক্রিয়া দ্বারা বংশবৃদ্ধি করে না?

- A. প্রবাল (Coral)
- B. হাইড্রা (Hydra)
- C. স্পঞ্জ (Sponges)
- D. অ্যানিলিডো (Annelido)

Ans 1. D
 2. A
 3. C
 4. B

Question ID : 988837851

Status : Not Attempted and Mark ed For Review

Chosen Option : --

Q.77 কোন নক্ষত্রবিজ্ঞানীকে হিলিওসেন্ট্রিজমের (heliocentrism) সমর্থন করার জন্য গৃহবন্দি করা হয়েছিল?

- A. নিকোলাস কোপারনিকাস (Nicolaus Copernicus)
- B. গ্যালিলিও গ্যালিলি (Galileo Galilei)
- C. জোহানেস কেপলার (Johannes Kepler)
- D. ফ্রেডরিক বেসেল (Friedrich Bessel)

Ans 1. B
 2. D
 3. C
 4. A

Question ID : 988837862

Status : Not Attempted and Mark ed For Review

Chosen Option : --

Q.78 The 'Father of Indian Space Program' is -

- A. Dr. A. P. J. Abdul Kalam
- B. Dr. Vikram A. Sarabhai
- C. Dr. K. Kasturirangan
- D. Prof. Satish Dhawan

Ans 1. D
 2. A
 3. B
 4. C

Question ID : 988837860

Status : Answered

Chosen Option : 3

Q.79 The filament of a light bulb is made up of -

- A. Platinum
- B. Tantalum
- C. Tungsten
- D. Antimony

Ans 1. B
 2. D
 3. C
 4. A

Question ID : 988837863

Status : Answered

Chosen Option : 3

Q.80

Question ID : 988837842




**रेलवे भर्ती बोर्ड
स्टडी किट**

FOR HELP CALL
011-45151781, 45041881

रेलवे भर्ती बोर्ड (आरआरबी) परीक्षा अध्ययन सामग्री

- 100% Syllabus Covered
- 4 Comprehensive Books
- 1000 Pages
- Current Affairs (PDF)
- Practice MCQs
- Support and Guidance

Only
~~₹6,000/-~~
₹1,995/-
70% Off



www.rrbportal.com

प्रिय अभ्यर्थियों,

आज इस गलाकाट प्रतिस्पर्धा के दौर में, हर जगह, हर क्षेत्र में मारामारी है। बात अगर सरकारी नौकरी की हो तो प्रतिस्पर्धा और भी कड़ी हो जाती है। जैसा की आप सभी जानते हैं RRBPORTAL विगत वर्षों से आप सबों को अंग्रेजी माध्यम में एक समग्र पाठ्यक्रम एवं मार्गदर्शन उपलब्ध करा रहा है। हमारे अध्ययन सामग्री की सफलता की दर करीब 70% है। विगत कुछ वर्षों की सरकारी विज्ञप्तियों (VACANCIES) पर नजर डालें तो आप देखेंगे की सर्वाधिक संख्या Railway के विज्ञप्तियों की है, और उसी अनुपात में भीड़ भी।

मित्रों इस परीक्षा में अंग्रेजी एवं हिंदी माध्यम के छात्र लगभग समान संख्या में सम्मिलित होते हैं, लेकिन हिंदी माध्यम से तैयारी करने वाले छात्रों के साथ सबसे बड़ी समस्या विश्वसनीय अध्ययन सामग्री एवं सही मार्गदर्शन की है।

आपकी इन्हीं समस्याओं और मांग को विचार में रखकर हमने नववर्ष में आपको हिंदी माध्यम में रेलवे भर्ती बोर्ड (आरआरबी), अध्ययन सामग्री उपलब्ध कराने का निर्णय लिया है। मित्रों हमने इस बात का पूरा ध्यान रखा है की आपको पाठ्यक्रम के अनुसार सारी चीजें एक जगह मिलें। हमने व्यवस्थित तरीके से लगभग 800पृष्ठों में इस अध्ययन सामग्री को परीक्षोपयोगी बनाया है।

आप क्या प्राप्त करेंगे?

- माध्यम: हिन्दी
- 100 प्रतिशत पाठ्यक्रम
- 838 पृष्ठ
- कुल 6 पुस्तिकायें
- Guidance & Support from Our Experts

Price of the Kit:

Rs. 4,000

Rs. 1,995/-
(Limited time Offer)



Order Online (100% Safe)

अन्य भुगतान विकल्प (Offline Payment Options)

**50%
OFF**

CLICK HERE

Disclaimer: RRB EXAM PORTAL वेबसाइट किसी भी प्रकार से रेलवे भर्ती बोर्ड (RRB) के साथ संबद्ध नहीं है, रेलवे भर्ती बोर्ड एवं भारतीय रेलवे की आधिकारिक वेबसाइट पर जाने के लिए www.rrcb.gov.in पर विजिट करें।

Who among the following became the first tourist to space by spending \$20 million for 8 days in orbit?

- A. Greg Olsen
- B. Charles Simonyi
- C. Dennis Tito
- D. Mark Shuttleworth

Ans 1. A
 2. B
 3. D
 4. C

Status : **Answered**
 Chosen Option : 4

Q.81 P bought an article for Rs. 1600 and sold it at a profit of 10%. What would have been the increase in the profit percent if it was sold for Rs. 1840?

- A. 5%
- B. 10%
- C. 12%
- D. 15%

Ans 1. D
 2. A
 3. B
 4. C

Question ID : **988837883**

Status : **Answered**
 Chosen Option : 2

Q.82 প্রাচীন হোমিনয়েড যাদের হোমো সেপিয়েন্সের শ্রেণীতে রাখা হয়েছে, তারা ছিল -

- A. এর্গাস্টার লাইন (Ergaster line)
- B. ক্রো-ম্যাগনন (Cro-magnon)
- C. নিয়ান্ডারথাল (Neanderthal)
- D. প্রোকাল্মাল (Proconsul)

Ans 1. D
 2. B
 3. C
 4. A

Question ID : **988837855**

Status : **Not Attempted and Marked For Review**
 Chosen Option : --

Q.83 What is $C_{12}H_{22}O_{11}$ also known as -

- A. Sand
- B. Sugar
- C. Salt
- D. Clay

Ans 1. B
 2. C
 3. D
 4. A

Question ID : **988837849**

Status : **Answered**
 Chosen Option : 1

Q.84 Select the correct set of symbols:

$$27 \times 3 + 19 - 10 = 90$$

- A. $\times, -, \div$
- B. $+, \div, -$
- C. $+, -, \div$
- D. $\times, +, -$

Ans 1. B
 2. A
 3. C
 4. D

Question ID : **988837908**

Status : **Answered**
 Chosen Option : 4

Q.85




Question ID : **988837865**

Status : **Answered**

Simplify: $(2/7 + 3/5) \div (2/5 + 2/7)$

Chosen Option : 4

- A. 31/24
- B. 24/31
- C. 26/25
- D. 12/13

Ans  1. C
 2. D
 3. B
 4. A

Q.86 Select the correct set of symbols:

$44 \ 4 \ 7 \ 5 = 82$

- A. $\times, -, \div$
- B. $+, \div, -$
- C. $+, -, \div$
- D. $\div, \times, +$

Ans  1. B
 2. D
 3. C
 4. A





Question ID : 988837907

Status : Answered

Chosen Option : 2

Q.87 If R019 is divisible by 11, find the value of the smallest natural number R?

- A. 5
- B. 6
- C. 7
- D. 8

Ans  1. B
 2. A
 3. C
 4. D

Question ID : 988837867

Status : Answered

Chosen Option : 4

Q.88 Malini said, "Rohit is my maternal aunt's mother's only son's son". How is Malini related to Rohit?

- A. Cousin
- B. Mother
- C. Sister
- D. Daughter

Ans  1. C
 2. A
 3. B
 4. D

Question ID : 988837895

Status : Answered

Chosen Option : 2

Q.89 In Tennis, hard court is the type of court whose surface is made of -

- A. Concrete
- B. Clay
- C. Grass
- D. Carpet

Ans  1. A
 2. D
 3. B
 4. C

Question ID : 988837836

Status : Answered

Chosen Option : 1

Q.90

If '+' means \times , '-' means \div , ' \times ' means $+$ and ' \div ' means $-$; compute the value of the expression:

$$36 - 4 + 7 \times 8$$

- A. 72
- B. 71
- C. 74
- D. 75

Ans  1. C
 2. A
 3. D
 4. B

Question ID : 988837905

Status : Answered

Chosen Option : 4

Q.91 The average of first 20 multiples of 12 is:

- A. 124
- B. 120
- C. 126
- D. 130

Ans  1. A
 2. B
 3. C
 4. D

Question ID : 988837891

Status : Not Attempted and Marked For Review

Chosen Option : --

Q.92 What is the median of the following list of numbers: 55, 53, 56, 59, 61, 69, and 31?

- A. 55
- B. 56
- C. 59
- D. 61

Ans  1. B
 2. A
 3. D
 4. C




Question ID : 988837890

Status : Not Attempted and Marked For Review

Chosen Option : --

Q.93 The sum of digits of a two-digit number is 9. When the digits are reversed, the number decreases by 45. Find the changed number.

- A. 45
- B. 72
- C. 63
- D. 27

Ans  1. B
 2. A
 3. C
 4. D



Question ID : 988837866

Status : Answered

Chosen Option : 4

Q.94 If MENTOR = NVMGLI then PROFESSOR =

- A. QSPGFTTPS
- B. KILUVHHLI
- C. KSLGVTHMI
- D. KILGFHHLI

Ans  1. B
 2. C
 3. A
 4. D

Question ID : 988837904

Status : Answered

Chosen Option : 1

Q.95





Question ID : 988837834

Status : Answered

Chosen Option : 4



The national song of India was composed by -

- A. Rabindranath Tagore
- B. Bankim Chandra Chatterjee
- C. Pydimarri Venkata Subba Rao
- D. Pingali Venkayya

Ans  1. C
 2. A
 3. D
 4. B

Q.96 Which of the following is NOT an effect of Noise Pollution?

- A. Death of Animals
- B. Tinnitus
- C. Hypertension
- D. Ozone Depletion

Ans  1. D
 2. C
 3. B
 4. A





Question ID : 988837838

Status : Answered

Chosen Option : 1

Q.97 The upstream speed of the boat is 40 km/hr and the speed of the boat in still water is 55 km/hr. What is the downstream speed of the boat?

- A. 75 km/hr
- B. 70 km/hr
- C. 60 km/hr
- D. 65 km/hr

Ans  1. C
 2. B
 3. A
 4. D

Question ID : 988837877





Status : Answered

Chosen Option : 4

Q.98 Choose the pair which is related in the same way as the words in the first pair from the given choices.

TENNIS : COURT :: BOXING : _____

- A. STADIUM
- B. RING
- C. PITCH
- D. GROUND

Ans  1. C
 2. A
 3. D
 4. B


Question ID : 988837925

Status : Answered

Chosen Option : 4

Q.99 Six years ago, the ratio of the ages of the two persons P and Q was 3:2. Four years hence the ratio of their ages will be 8:7. What is P's age?

- A. 10 years
- B. 12 years
- C. 14 years
- D. 8 years

Ans  1. C
 2. B
 3. D
 4. A

Question ID : 988837884

Status : Answered

Chosen Option : 2

Q.10 Which of the following popular tourist destinations of India were built in 1911 to commemorate the visit of King George V and Queen Mary?

- A. India Gate
- B. Gateway of India
- C. The Prince of Wales Museum
- D. Victoria Terminus

0

Question ID : 988837844

Status : Answered

Chosen Option : 2

Ans  1. B

 2. D

 3. C

 4. A



Railway Recruitment Board (RRB) NTPC Exams Study Kit	English	CLICK HERE
रेलवे भर्ती बोर्ड एनटीपीसी (NTPC) परीक्षा अध्ययन सामग्री	हिन्दी	CLICK HERE
RRB Loco Pilot (ALP) Exam Study Kit	English	CLICK HERE
रेलवे भर्ती बोर्ड लोको पायलट (ALP) परीक्षा अध्ययन सामग्री	हिन्दी	CLICK HERE
RRB Group-D Exam Study Kit	English	CLICK HERE
रेलवे भर्ती बोर्ड Group-D परीक्षा अध्ययन सामग्री	हिन्दी	CLICK HERE
Study Kit for RRB JE (Junior Engineer) Exam	English	CLICK HERE
आरआरबी जूनियर इंजीनियर परीक्षा (चरण -1) अध्ययन किट	हिन्दी	CLICK HERE
IAS EXAMS STUDY MATERIALS		
Study Kit for IAS (Pre) GENERAL STUDIES Paper-1 (GS)	English	CLICK HERE
Study Kit for IAS (Pre) CSAT Paper-2(Aptitude)	English	CLICK HERE
सामान्य अध्ययन (GS) प्रारंभिक परीक्षा (Pre) पेपर-1	हिन्दी	CLICK HERE
आई. ए. एस. (सी-सैट) प्रारंभिक परीक्षा पेपर -2	हिन्दी	CLICK HERE
Gist of NCERT Study Kit For UPSC Exams	English	CLICK HERE