



RAILWAY RECRUITMENT BOARDS

रेलवे भर्ती बोर्ड

RRB NTPC 16th April 2016 Shift 1

Roll No:	
Participants Name:	
Test Center Name:	
Test Date:	16/04/2016
Test Time:	9:00 AM - 10:30 AM
Subject:	RRB NTPC Graduate

- Options shown in green color with a tick icon are correct
- Chosen option on top right of the question indicates the option selected by the candidate

Q.1 Which State in India is the highest producer of raw silk?

- A. Kerala
- B. Andhra Pradesh
- C. Karnataka
- D. Maharashtra

Ans 1. B
 2. C
 3. D
 4. A

Question ID : 2055232682

Status : Not Attempted and Marked For Review

Chosen Option : --

Q.2 Mohan invested Rs. 100,000 in a garment business. After few months, Sohan joined him with Rs. 40000. At the end of the year, the total profit was divided between them in ratio 3 : 1. After how many months did Sohan join the business?

- A. 3
- B. 2
- C. 4
- D. 5

Ans 1. C
 2. B
 3. A
 4. D

Question ID : 2055232732

Status : Answered

Chosen Option : 2

Q.3 If two complimentary angles are in the ratio of 4:5, find the greater angle.

- A. 40°
- B. 50°
- C. 60°
- D. 30°

Ans 1. A
 2. B
 3. D
 4. C

Question ID : 2055232737

Status : Answered

Chosen Option : 2

Q.4 If HEAR is written as KJHA, then MILK can written as

- A. PTNS
- B. PNTS
- C. PNST
- D. PTSN

Ans 1. A

Question ID : 2055232751

Status : Answered

Chosen Option : 3

 2. B

 3. C

 4. D

Q.5 The mean of 12 observations is 15. One more observation is included and the new mean becomes 16. The 13th observation is

- A. 20
B. 24
C. 26
D. 28

Ans  1. C

 2. D

 3. B

 4. A

Question ID : 2055232741

Status : Answered

Chosen Option : 2

Q.6 একটি মানব দেহে দুটি হাড় একে অপরের সাথে কিভাবে সংযুক্ত করা থাকে?

- A. জয়েন্টগুলোর দ্বারা
B. লিগামেন্ট দ্বারা
C. পেশী দ্বারা
D. ছোট ছোট হাড় দ্বারা

Ans 1. C

2. D

3. A

4. B

Note: For this question, discrepancy is found in question/answer. So, Th is question is ignored for all candidates.

Question ID : 2055232709

Status : Answered

Chosen Option : 4

Q.7 Find the least number which when divided by 12, 15, 18 and 27 leaves remainders 10, 13, 16 and 25 respectively.

- A. 540
B. 538
C. 542
D. 552

Ans  1. B

 2. D

 3. A

 4. C

Question ID : 2055232722

Status : Answered

Chosen Option : 1

Q.8 Find the value of $6732.8 + 673.28 + 67.328 + 6.7328 + 0.67328$?

- A. 74808.1408
B. 7480.78408
C. 74808.2408
D. 7480.81408

Ans  1. B

 2. D

 3. C

 4. A

Question ID : 2055232735

Status : Answered

Chosen Option : 2

Q.9 Which Indian state was declared a 'complete Digital State'?

- A. Tamil Nadu
B. Kerala
C. Maharashtra
D. Karnataka

Ans  1. A

 2. D

 3. C

 4. B

Question ID : 2055232680

Status : Answered

Chosen Option : 2

Q.10 একটি বিবৃতি (A) এবং একটি যুক্তি (R) দেওয়া আছে।

বিবৃতি (A) : কার্বন-ডাই-অক্সাইড বেড়ে গেলে মেরুদেশের বরফ গলে যাবে।

যুক্তি (R) : পৃথিবীর তাপমাত্রা বেড়ে যাবে।

সঠিক বিকল্পটি বেছে নিন।

- A. A সত্য কিন্তু R মিথ্যা।
 B. A মিথ্যা কিন্তু R সত্য।
 C. A এবং R উভয়েই সত্য এবং R হল A-র সঠিক ব্যাখ্যা।
 D. A এবং R উভয়েই সত্য কিন্তু R, A-র সঠিক ব্যাখ্যা নয়।

Ans 1. C

2. D

3. A

4. B

Question ID : 2055232779

Status : Answered

Chosen Option : 1

Q.11 Saina Nehwal is associated with which sport?

- A. Tennis
 B. Cricket
 C. Badminton
 D. Gymnastics

Ans 1. B

2. C

3. D

4. A

Question ID : 2055232690

Status : Answered

Chosen Option : 2

Comprehension:

The table below depicts the no. of pages printed by 6 Printers in 5 different months.
 Study the table carefully and answer the following questions

Number of Pages Printed by 6 Printers in 5 Different Months

Month	Printer P	Printer Q	Printer R	Printer S	Printer T	Printer U
1 st	664	618	628	552	638	419
2 nd	569	441	519	438	621	537
3 rd	440	614	503	527	541	742
4 th	256	563	347	651	412	321
5 th	717	429	598	582	519	693

SubQuestion No : 12

Q.1 What is the average number of pages printed by all the given printers in 4th month?

- 2
 A. 415
 B. 430
 C. 425
 D. 325

Ans 1. D

2. A

3. C

4. B

Question ID : 2055232777

Status : Answered

Chosen Option : 3

Comprehension:

The table below depicts the no. of pages printed by 6 Printers in 5 different months. Study the table carefully and answer the following questions

Number of Pages Printed by 6 Printers in 5 Different Months

Month	Printer P	Printer Q	Printer R	Printer S	Printer T	Printer U
1 st	664	618	628	552	638	419
2 nd	569	441	519	438	621	537
3 rd	440	614	503	527	541	742
4 th	256	563	347	651	412	321
5 th	717	429	598	582	519	693

SubQuestion No : 13

Q.1 Which printer printed maximum number of pages in all the given months together?

- 3
- A. Printer S
 - B. Printer U
 - C. Printer P
 - D. Printer T

Question ID : 2055232775

Status : Answered

Chosen Option : 3

- Ans
- 1. D
 - 2. B
 - 3. A
 - 4. C

Comprehension:

The table below depicts the no. of pages printed by 6 Printers in 5 different months. Study the table carefully and answer the following questions

Number of Pages Printed by 6 Printers in 5 Different Months

Month	Printer P	Printer Q	Printer R	Printer S	Printer T	Printer U
1 st	664	618	628	552	638	419
2 nd	569	441	519	438	621	537
3 rd	440	614	503	527	541	742
4 th	256	563	347	651	412	321
5 th	717	429	598	582	519	693

SubQuestion No : 14

Q.1 What is the ratio between the number of pages printed by printer Q in second month and the number of pages printed by printer U in the fifth month?

- 4
- A. 11:13
 - B. 7:11
 - C. 9:11
 - D. 9:13

Question ID : 2055232776

Status : Answered

Chosen Option : 1

- Ans
- 1. B
 - 2. A
 - 3. D
 - 4. C

Q.15 RHYTHM is related to MUSIC in the same way as DESIGN is related to

- A. ARCHITECT
- B. BUILDING
- C. BEAUTY
- D. SYMMETRY

Question ID : 2055232758

Status : Answered

Chosen Option : 2

- Ans
- 1. B
 - 2. A
 - 3. D

X 4. C

Q.16 In which country did the hotaki dynasty flourish?

- A. Sri Lanka
- B. China
- C. Nepal
- D. Afghanistan

Question ID : 2055232683

Status : Answered

Chosen Option : 3

Ans X 1. A

X 2. B

X 3. C

✓ 4. D

Q.17 Which of the following is a nitrogen-fixing bacteria?

- A. Salmonella
- B. Rhizobium
- C. E.coli
- D. Pseudomonas

Question ID : 2055232704

Status : Answered

Chosen Option : 3

Ans X 1. D

X 2. A

✓ 3. B

X 4. C

Q.18 The angle of elevation of a ladder leaning against a wall is 45° and the foot of the ladder is 10 m away from the wall. The length of the ladder is:

- A. 10 m
- B. 13 m
- C. 15 m
- D. 16 m

Question ID : 2055232730

Status : Answered

Chosen Option : 3

Ans 1. A

2. B

3. C

4. D

Note: For this question, discrepancy is found in question/answer. So, This question is ignored for all candidates.

Q.19 Based on the analogy given, find the missing pair from the given options.

$$\frac{3}{5} : 34 :: \text{----} : \text{----}$$

- A. $\frac{3}{7} : 54$
- B. $\frac{4}{7} : 65$
- C. $\frac{3}{11} : 140$
- D. $\frac{4}{9} : 87$

Question ID : 2055232761

Status : Answered

Chosen Option : 4

Ans X 1. C

X 2. A

X 3. D

✓ 4. B

Q.20 In accordance to the Constitution, Protection of Life and Personal Liberty is granted under which Article?

- A. Article 20
- B. Article 21
- C. Article 22
- D. Article 23

Question ID : 2055232693

Status : Not Attempted and Marked For Review

Chosen Option : --

Ans X 1. D

X 2. C

✓ 3. B

 4. A

Q.21 Mayank, Deepak and Pawan, each of them working alone can complete a work in 5, 10 and 15 days respectively. If all three of them work together to complete a work and earn Rs. 12,000, What will be Deepak's share of the earnings?

- A. Rs. 2000
- B. Rs. 6000
- C. Rs. 4000
- D. Rs. 3000

Ans  1. C

 2. A

 3. D

 4. B

Question ID : 2055232727

Status : Answered

Chosen Option : 1

Q.22 Below are given statements followed by two conclusions I and II. You have to take the given statements to be true even if they seem to be at variance from commonly known facts.

Statements: All birds are trees. All trees are papers. Some papers are books.

Conclusions: I. All birds are papers.

II. Some birds are books.

Decide which of the below options logically follows the given conclusions.

- A. Both conclusion I or II follows
- B. Neither conclusion I nor II follows
- C. Only conclusion I follows
- D. Only conclusion II follows

Ans  1. B

 2. C

 3. A

 4. D

Question ID : 2055232767

Status : Answered

Chosen Option : 2

Q.23 If $10x^2 - 6xy + y^2 - 4x + 4 = 0$, then find the value of $(x+2y)$.

- A. 10
- B. 20
- C. 14
- D. 18

Ans 1. A

2. B

3. C

4. D

Note: For this question, discrepancy is found in question/answer. So, Th is question is ignored for all candidates.

Question ID : 2055232719

Status : Answered

Chosen Option : 3

Q.24 Where in the World can we find the Nobel museum?

- A. Sweden
- B. Stockholm
- C. Denmark
- D. London

Ans  1. D

 2. A

 3. B

 4. C

Question ID : 2055232698

Status : Answered

Chosen Option : 2

Q.25 The mean of a distribution is 20 and the standard deviation is 4. What is the value of the coefficient variation?

- A. 10%
- B. 20%
- C. 40%
- D. 60%

Ans  1. B

 2. A

 3. D

 4. C

Question ID : 2055232740

Status : Answered

Chosen Option : 1



RRB NTPC

Railway Recruitment Board

RRB NTPC (Tier -1 & Tier -2) Exam

- [RRB NTPC \(Tier -1\) Exam](#)
- [RRB NTPC \(Tier -2\) Exam](#)
- [Exam PAPERS](#)
- [Exam Syllabus](#)
- [Eligibility](#)
- [Medical Fitness](#)
- [RRB Post Preference & Zones List](#)
- [परीक्षा सिलेबस "Exam Syllabus in Hindi"](#)
- [Printed Study Material \(English Medium\)](#)
- [RRB NTPC Exam for Aptitude Test](#)
- [RRB NTPC Exam for Typing Skill Test](#)

[CLICK HERE](#)

**Disclaimer: rrbexamportal.com is not associated with Railway Recruitment Board,
For RRB official website visit - www.rrcb.gov.in**

Comprehension:

Study the following information carefully and answer the questions given below it.

There are six persons in a family. Chithra is the sister of Rakesh. Badhri is the brother of Eniya's husband. Dilip is the father of Arun and grandfather of Rakesh. There are two fathers, three brothers and a mother in the group.

SubQuestion No : 26

Q.2
6 How many male members are there in the family?

- A. Three
- B. One
- C. Four
- D. Two

Ans  1. C 2. B 3. D 4. A

Question ID : 2055232764

Status : Answered

Chosen Option : 1

Comprehension:

Study the following information carefully and answer the questions given below it.

There are six persons in a family. Chithra is the sister of Rakesh. Badhri is the brother of Eniya's husband. Dilip is the father of Arun and grandfather of Rakesh. There are two fathers, three brothers and a mother in the group.

SubQuestion No : 27

Q.2
7 Which of the following is a group of brothers?

- A. Arun, Badhri, Dilip
- B. Arun, Badhri, Rakesh
- C. Badhri, Rakesh, Chithra
- D. Badri, Dilip, Rakesh

Ans  1. C 2. B 3. A 4. D

Question ID : 2055232766

Status : Answered

Chosen Option : 2

Comprehension:

Study the following information carefully and answer the questions given below it.

There are six persons in a family. Chithra is the sister of Rakesh. Badhri is the brother of Eniya's husband. Dilip is the father of Arun and grandfather of Rakesh. There are two fathers, three brothers and a mother in the group.

SubQuestion No : 28

Q.2
8 How is Rakesh related to Eniya?

- A. Son
- B. Brother
- C. Uncle
- D. Cousin

Ans  1. C 2. A 3. D 4. B

Question ID : 2055232765

Status : Answered

Chosen Option : 2

Q.29



Question ID : 2055232759

Status : Answered

Chosen Option : 2

Choose the one which is different or odd from the following options.

- A. Lion
- B. Tiger
- C. Horse
- D. Giraffe

Ans  1. A
 2. D
 3. B
 4. C

Q.30 নিচের কোনটি একটি বস্তু যা সূর্যকে কেন্দ্র করে থাকা কক্ষপথে রয়েছে?

- A. গ্রহ
- B. স্যাটেলাইট (উপগ্রহ)
- C. তারা
- D. আকাশগঙ্গা (গ্যালাক্সি)

Ans 1. C
 2. D
 3. A
 4. B

Note: For this question, discrepancy is found in question/answer. So, Th is question is ignored for all candidates.

Question ID : 2055232714

Status : Answered

Chosen Option : 3

Q.31 How many bones does a human baby have?

- A. 206
- B. 234
- C. 270
- D. 354

Ans  1. D
 2. C
 3. B
 4. A

Question ID : 2055232717

Status : Answered

Chosen Option : 4

Q.32 Based on the analogy given, find the missing number from the given options.

11 : 13 :: 17 : ----

- A. 29
- B. 21
- C. 19
- D. 23

Ans  1. B
 2. C
 3. D
 4. A

Question ID : 2055232760

Status : Answered

Chosen Option : 2

Q.33 If the angles of a triangle are in the ratio of 2:5:8, then find the value of the smallest angle.

- A. 36°
- B. 18°
- C. 12°
- D. 24°

Ans  1. A
 2. D
 3. B
 4. C

Question ID : 2055232739

Status : Answered

Chosen Option : 2

Q.34

Question ID : 2055232744

When Bablu decreases the selling price of the shoes from Rs. 360 to Rs. 345, his loss increases by 4%. The cost price of the shoes is :

- A. Rs. 275
- B. Rs. 375
- C. Rs. 425
- D. Rs. 450

Ans  1. A

 2. B

 3. C

 4. D

Status : **Answered**

Chosen Option : 2

Q.35 Who received the Dinanath Mangeshkar award for 2015?

- A. Sanjay Leela Bhansali
- B. Ranveer Kapoor
- C. Anil Kapoor
- D. Amir Khan

Ans  1. A

 2. B

 3. D

 4. C

Question ID : 2055232695

Status : **Answered**

Chosen Option : 1

Comprehension:

The following questions are based on the information given below:

In a school of 4000 students 3000 know English, 2000 know French and 500 know Hindi, 1500 know French and English, 300 know French and Hindi, 200 know English and Hindi and 50 know all the three languages.

SubQuestion No : 36

Q.3 How many do not know any of the three languages?

- A. 550
- B. 500
- C. 400
- D. 450

Ans  1. B

 2. A

 3. C

 4. D

Question ID : 2055232773

Status : **Answered**

Chosen Option : 4

Comprehension:

The following questions are based on the information given below:

In a school of 4000 students 3000 know English, 2000 know French and 500 know Hindi, 1500 know French and English, 300 know French and Hindi, 200 know English and Hindi and 50 know all the three languages.

SubQuestion No : 37

Q.3 How many know only two languages?

- A. 450
- B. 500
- C. 1850
- D. 1580

Ans  1. C

 2. B

 3. A

 4. D

Question ID : 2055232772

Status : **Answered**

Chosen Option : 1

Comprehension:

The following questions are based on the information given below:

In a school of 4000 students 3000 know English, 2000 know French and 500 know Hindi, 1500 know French and English, 300 know French and Hindi, 200 know English and Hindi and 50 know all the three languages.

SubQuestion No : 38

Q.3
8 How many know at least one language?

- A. 3500
- B. 3000
- C. 1850
- D. 3550

Ans 1. A
 2. B
 3. C
 4. D

Question ID : 2055232771

Status : Answered

Chosen Option : 4

Q.39 What is the average of first 30 multiples of 9?

- A. 142
- B. 138.5
- C. 139.5
- D. 143.5

Ans 1. B
 2. A
 3. D
 4. C

Question ID : 2055232731

Status : Answered

Chosen Option : 4

Q.40 Centigrade, is a unit of measurement of temperature named after whom?

- A. Kelvin
- B. Jean-Pierre Christin
- C. Marten Stromer
- D. Anders Celsius

Ans 1. C
 2. D
 3. A
 4. B

Question ID : 2055232705

Status : Answered

Chosen Option : 2

Q.41 If 'when' means 'x', 'she' means '+', 'will' means '+' and 'come' means '-', then what will the value of "8 when 12 will 16 she 2 come 10"?

- A. 94
- B. 96
- C. 100
- D. 10

Ans 1. B
 2. D
 3. C
 4. A

Question ID : 2055232753

Status : Answered

Chosen Option : 4

Q.42 Which among the planets is orange in colour with white bands on it?

- A. Mars
- B. Saturn
- C. Jupiter
- D. Venus

Ans 1. C
 2. B
 3. A

Question ID : 2055232715

Status : Answered

Chosen Option : 2

X 4. D

Q.43 Which bacterium is used to turn milk to curd?

- A. Streptomyces
- B. Vibrio
- C. Lactobacillus
- D. Spirilla

Ans ✓ 1. C

X 2. B

X 3. D

X 4. A

Question ID : 2055232716

Status : Answered

Chosen Option : 1

Q.44 Who is the Railway Minister who presented the 2016 Rail Budget?

- A. Suresh Prabhu
- B. Arun Jaitley
- C. Manoj Sinha
- D. Jayant Sinha

Ans X 1. C

✓ 2. A

X 3. B

X 4. D

Question ID : 2055232696

Status : Answered

Chosen Option : 2

Q.45 What does SPM in environment mean?

- A. Suspended Pollution Mark
- B. Suspended Particulate Matter
- C. Suspended Particle Mode
- D. Suspended Particle Management.

Ans X 1. C

✓ 2. B

X 3. A

X 4. D

Question ID : 2055232692

Status : Answered

Chosen Option : 2

Q.46 Rearrange the jumbled up letters to form a meaningful word and find the odd one out.

- A. ELMSL
- B. ERHA
- C. IKNTH
- D. SAETE

Ans 1. D

2. B

3. C

4. A

Note: For this question, discrepancy is found in question/answer. So, This question is ignored for all candidates.

Question ID : 2055232769

Status : Answered

Chosen Option : 3

Q.47 Rs. 10,000 is being compounded at 20% per annum. Calculate the amount after 2 years if the rate of interest is charged half yearly.

- A. 14600
- B. 12500
- C. 14642
- D. 14641

Ans X 1. B

✓ 2. D

X 3. A

X 4. C

Question ID : 2055232723

Status : Answered

Chosen Option : 2

Q.48 Where did Muhammad Bin Tughlaq shift his capital to from Delhi?

- A. Daulatabad
- B. Aurangabad
- C. Allahabad
- D. Shaharanpur

Ans  1. B
 2. D
 3. A
 4. C

Question ID : 2055232685

Status : Answered

Chosen Option : 3

Q.49 If FHNPKMEG means GOLF, then what does RTSUHJBDJL stand for?

- A. HORSE
- B. STICK
- C. PURSE
- D. HOLES

Ans  1. D
 2. A
 3. C
 4. B

Question ID : 2055232750

Status : Answered

Chosen Option : 4

Q.50 If the standard deviation of a population is 4.5, what would be the population variance?

- A. 20.25
- B. 20
- C. 9
- D. 18

Ans  1. D
 2. A
 3. C
 4. B

Question ID : 2055232742

Status : Not Attempted

Chosen Option : --

Q.51 The tallest bridge in the world Millau Viaduct has been constructed over the river

- A. Seine
- B. Tam
- C. Durance
- D. Loir

Ans  1. C
 2. B
 3. D
 4. A





Question ID : 2055232697

Status : Not Attempted

Chosen Option : --

Q.52 একটি অবাধে বুলন্ত চুম্বক কোন দিকে পয়েন্ট করে?

- A. ইস্ট ওয়েস্ট (পূর্ব পশ্চিম)
- B. নর্থ সাউথ (উত্তর দক্ষিণ)
- C. ইস্ট নর্থ (পূর্ব উত্তর)
- D. ওয়েস্ট সাউথ (পশ্চিম দক্ষিণ)

Ans  1. C
 2. B
 3. A
 4. D

Question ID : 2055232700

Status : Answered

Chosen Option : 2

Q.53

Question ID : 2055232694

RRB NTPC EXAM Study Kit



- ▶ 100% Exam Syllabus Covered
- ▶ 4 Books, 950+ Pages
- ▶ Mathematics, General Intelligence & Reasoning,
- ▶ General Science, General Awareness
- ▶ Previous year Solved Papers
- ▶ Mock Tests with Answers
- ▶ 1 Year Current Affairs



₹ 6,000/-
₹ 1,999/-
Only



For RRB Exam Courses & Study Materials Call Us at: +91-8800734161

What you will get:

- 100% Syllabus Covered in printed format.
- 4 Booklets
 - General Intelligence & Reasoning
 - General Awareness
 - Arithmetic
 - General Science
- 950+ Pages
- One Year Current Affairs (PDF Copy)
- Guidance & Support from Our Experts

Price of the Kit:

Rs. 6,000

Rs. 1,999/-

(Limited time Offer)



Net Banking

Order Online (100% Safe)

अन्य भुगतान विकल्प (Offline Payment Options)

**50%
OFF**

CLICK HERE

**Disclaimer: rrbexamportal.com is not associated with Railway Recruitment Board,
For RRB official website visit - www.rrcb.gov.in**

Who is the current supreme commander of Indian Defense forces?

- A. Narendra Modi
- B. Sumitra Mahajan
- C. Pranab Mukherjee
- D. Lt.Gen Dalbir Singh

Answered

Chosen Option : 2

- Ans
- 1. B
 - 2. D
 - 3. C
 - 4. A

Q.54 If $B = 2$, $K = 11$; $MAN = 0$, $SIN = 14$, then what is the value of HOT?

- A. 3
- B. 0
- C. 1
- D. 22

Question ID : 2055232749

Status : Answered

Chosen Option : 4

- Ans
- 1. C
 - 2. D
 - 3. B
 - 4. A

Q.55 Find the value of x if $0.08x + 0.04y = 10$ and $0.2(x-1) + 0.4y = 24.8$

- A. 125
- B. 150
- C. 1.25
- D. 12.5

Question ID : 2055232718

Status : Answered

Chosen Option : 4

- Ans
- 1. B
 - 2. D
 - 3. C
 - 4. A

Q.56 Who made the first chocolate bar?

- A. Nestle
- B. The Hershey Company
- C. Joseph Fry & Sons.
- D. Pearson's

Question ID : 2055232706

Status : Answered

Chosen Option : 2

- Ans
- 1. B
 - 2. A
 - 3. C
 - 4. D

Q.57 Find the LCM of 0.63, 10.5, 2.1, 4.20

- A. 63
- B. 0.63
- C. 6.30
- D. 6300

Question ID : 2055232721


Status : Answered

Chosen Option : 2

- Ans
- 1. C
 - 2. D
 - 3. A
 - 4. B

Q.58 একটি 'এক কঁজ বিশিষ্ট উট' (one hump camel)-কে কি বলা হয়?

- A. ওকাপি (Okapi)
 B. আইবেক্স (Ibex)
 C. ডোমেডারি (Dromedary)
 D. এল্ক (Elk)

Ans  1. A
 2. C
 3. B
 4. D

Question ID : 2055232703





Status : Not Attempted

Chosen Option : --

Q.59 Based on the analogy given, find the missing word from the given options.

Foot : Toes :: Hand: ?

- A. Thumb
 B. Palm
 C. Fingers
 D. Nails

Ans  1. C
 2. A
 3. B
 4. D

Question ID : 2055232762

Status : Answered

Chosen Option : 3

Q.60 Who invented the pendulum clock?

- A. Galileo Galilei
 B. Thomas Alva Edison
 C. Frederick Jones
 D. Davidson

Ans 1. A
 2. C
 3. B
 4. D

Note: For this question, discrepancy is found in question/answer. So, Th is question is ignored for all candidates.

Question ID : 2055232707

Status : Answered

Chosen Option : 4

Q.61 The simple interest at $y\%$ for ' y ' years will be Rs. y on a sum. Find the principal amount.

- A. $100 \div y$
 B. $100 \times y$
 C. $100y^2$
 D. $100 \div y^2$

Ans  1. C
 2. D
 3. A
 4. B

Question ID : 2055232724




Status : Answered

Chosen Option : 3

Q.62 নিচের শব্দযুগলের মধ্য থেকে প্রদত্ত প্রথম শব্দযুগলের ন্যায় একই সম্পর্কযুক্ত একটি শব্দযুগল বেছে নিন-

Everest : Peak :: _____ : _____

- A. Yamuna : River
 B. Chilka : Lake
 C. Sparrow : Bird
 D. Jupiter : Planet

Ans  1. A
 2. C
 3. D
 4. B

Question ID : 2055232756

Status : Answered




Chosen Option : 4

Q.63

Question ID : 2055232755

If '+' means '-', '-' means 'x', 'x' means '+', '+' means '+', then $15 - 3 + 10 \times 5 \div 5 = \dots$



- A. 22
- B. 24
- C. 48
- D. 52

Ans  1. A
 2. B
 3. D
 4. C

Status : **Answered**
 Chosen Option : 4

Q.64 Find the remainder when 4^{13} divided by 3?





- A. 1
- B. 2
- C. 0
- D. 3

Ans  1. B
 2. D
 3. C
 4. A

Question ID : 2055232736
 Status : **Answered**
 Chosen Option : 4

Q.65 If TABLE is written as 84973 and CHAIR is written as 51462, then how is TEACHER coded?





- A. 8431532
- B. 8341532
- C. 8435132
- D. 8345132

Ans  1. D
 2. C
 3. A
 4. B

Question ID : 2055232748
 Status : **Answered**
 Chosen Option : 1

Q.66 Ramu can row 9 km/hr in still water. It takes him twice as long to row up as to row down. Find the rate of stream.



- A. 16 km/hr
- B. 8 km/hr
- C. 3 km/hr
- D. 9 km/hr

Ans  1. C
 2. D
 3. B
 4. A

Question ID : 2055232747
 Status : **Answered**
 Chosen Option : 1

Q.67 Neeraj's earning was decreased by 60% and after that subsequently increased by 60%. Find the final loss % on his earnings?




- A. 12%
- B. 36%
- C. 4%
- D. 5%

Ans  1. B
 2. C
 3. D
 4. A

Question ID : 2055232733
 Status : **Answered**
 Chosen Option : 1

Q.68 A bus is running at a speed of 90 kmph. What distance will it cover in 20 seconds?

- A. 500 m
- B. 450 m
- C. 180 m
- D. 600 m

Ans  1. A
 2. C
 3. D

Question ID : 2055232746
 Status : **Answered**
 Chosen Option : 1

 4. B

Q.69 In what ratio should Darjeeling Tea costing Rs. 400 per kg be mixed with Assam Tea costing Rs. 300 per kg, so that by selling the mixture at Rs. 408 per kg, there is a gain of 20%?

- A. 1:2
- B. 2:3
- C. 2:5
- D. 1:6

Ans  1. A

 2. C

 3. B

 4. D

Question ID : 2055232728

Status : Answered

Chosen Option : 3

Q.70 Consider the following statements & choose the correct options:

When two straight lines intersect then,

1. Adjacent angles are supplementary
2. Opposite angles are supplementary

- A. Both 1 & 2 are incorrect.
- B. Both 1 & 2 are correct
- C. 1 is incorrect and 2 is correct
- D. 1 is correct and 2 is incorrect

Ans  1. B

 2. A

 3. C

 4. D

Question ID : 2055232738

Status : Answered

Chosen Option : 4

Q.71 Which is the official language for Android development?

- A. Java
- B. COBOL
- C. FORTRON
- D. Ada

Ans  1. C

 2. B

 3. A

 4. D

Question ID : 2055232710

Status : Answered

Chosen Option : 3

Q.72 স্বাধীনতাপূর্ব অসংখ্য দেশীয় রাজ্যগুলির মধ্যে কোনটি বৃহত্তম রাজ্য ছিল?

- A. হায়দ্রাবাদ
- B. কোচিন
- C. ত্রিবাঙ্কুর
- D. পুড়ুকোত্তাই

Ans  1. A

 2. C

 3. D

 4. B

Question ID : 2055232686

Status : Answered

Chosen Option : 1

Q.73 Rearrange the jumbled up letters to form a meaningful word and find the odd one out.

- A. CEKRTCI
- B. OHKCYE
- C. ESCSH
- D. OTOLABLF

Ans  1. C

 2. D

 3. A

Question ID : 2055232768

Status : Answered

Chosen Option : 3

X 4. B

Q.74 এক্সহ্যালড (exhaled) বায়ু ধারণ করে-

- A. হাইড্রোজেন
B. হীলিয়াম
C. জলীয় বাষ্প
D. নাইট্রোজেন

Ans 1. C
2. D
3. A
4. B

Note: For this question, discrepancy is found in question/answer. So, This question is ignored for all candidates.

Question ID : 2055232702

Status : Answered

Chosen Option : 1

Q.75 Who invented the mouse of a computer?

- A. John Backus
B. Charles Babbage
C. Douglas Engelbart
D. Simon Colton

Ans X 1. A
X 2. B
✓ 3. C
X 4. D

Question ID : 2055232711

Status : Answered

Chosen Option : 3

Q.76 Which among the following is the brain of the computer?

- A. Software
B. Hardware
C. CPU
D. Monitor

Ans X 1. A
✓ 2. C
X 3. D
X 4. B

Question ID : 2055232712

Status : Answered

Chosen Option : 2

Q.77 Who is the current Chief Election Commissioner of India?

- A. Syed Nasim Ahmed Zaidi
B. Navin Chawla
C. N.Gopalaswami
D. A.K.Jyoti

Ans X 1. D
X 2. B
X 3. C
✓ 4. A

Question ID : 2055232679

Status : Answered

Chosen Option : 4

Q.78 If '+' stands for '+', '-' stands for '-', '↑' stands for '÷', '↓' stands for 'x', '^' stands for '=', then which of the following alternatives is correct?


- A. $3 \downarrow 6 \uparrow 2 \leftarrow 3 \rightarrow 6 \wedge 5$
B. $2 \downarrow 5 \rightarrow 6 \leftarrow 2 \wedge 6$
C. $7 \rightarrow 43 \uparrow 6 \downarrow 1 \wedge 4$
D. $5 \leftarrow 7 \rightarrow 3 \uparrow 2 \wedge 4$

Ans X 1. C

Question ID : 2055232754

Status : Answered

Chosen Option : 4



**रेलवे भर्ती बोर्ड (आरआरबी)
परीक्षा अध्ययन सामग्री**

- 100% Syllabus Covered
- 4 Comprehensive Books
- 1000 Pages
- Current Affairs (PDF)
- Practice MCQs
- Support and Guidance

Only
~~₹6,000/-~~
₹1,995/-
70% Off


www.rrbportal.com

प्रिय अभ्यर्थियों,

आज इस गलाकाट प्रतिस्पर्धा के दौर में, हर जगह, हर क्षेत्र में मारामारी है। बात अगर सरकारी नौकरी की हो तो प्रतिस्पर्धा और भी कड़ी हो जाती है। जैसा की आप सभी जानते हैं RRBPORTAL विगत वर्षों से आप सबों को अंग्रेजी माध्यम में एक समग्र पाठ्यक्रम एवं मार्गदर्शन उपलब्ध करा रहा है। हमारे अध्ययन सामग्री की सफलता की दर करीब 70% है। विगत कुछ वर्षों की सरकारी विज्ञप्तियों (VACANCIES) पर नजर डालें तो आप देखेंगे की सर्वाधिक संख्या Railway के विज्ञप्तियों की है, और उसी अनुपात में भीड़ भी।

मित्रों इस परीक्षा में अंग्रेजी एवं हिंदी माध्यम के छात्र लगभग समान संख्या में सम्मिलित होते हैं, लेकिन हिंदी माध्यम से तैयारी करने वाले छात्रों के साथ सबसे बड़ी समस्या विश्वसनीय अध्ययन सामग्री एवं सही मार्गदर्शन की है।

आपकी इन्हीं समस्याओं और मांग को विचार में रखकर हमने नववर्ष में आपको हिंदी माध्यम में रेलवे भर्ती बोर्ड (आरआरबी), अध्ययन सामग्री उपलब्ध कराने का निर्णय लिया है। मित्रों हमने इस बात का पूरा ध्यान रखा है की आपको पाठ्यक्रम के अनुसार सारी चीजें एक जगह मिलें। हमने व्यवस्थित तरीके से लगभग 800 पृष्ठों में इस अध्ययन सामग्री को परीक्षोपयोगी बनाया है।

आप क्या प्राप्त करेंगे?

- माध्यम: हिन्दी
- 100 प्रतिशत पाठ्यक्रम
- 838 पृष्ठ
- कुल 6 पुस्तिकायें
- Guidance & Support from Our Experts

Price of the Kit:

Rs. 4,000

Rs. 1,995/-
(Limited time Offer)



Order Online (100% Safe)

अन्य भुगतान विकल्प (Offline Payment Options)

**50%
OFF**

CLICK HERE

Disclaimer: RRB EXAM PORTAL वेबसाइट किसी भी प्रकार से रेलवे भर्ती बोर्ड (RRB) के साथ संबद्ध नहीं है, रेलवे भर्ती बोर्ड एवं भारतीय रेलवे की आधिकारिक वेबसाइट पर जाने के लिए www.rrcb.gov.in पर विजिट करें।

2. D
 3. A
 4. B

Q.79 যে বাজার অল্প সংখ্যক সংস্থা দ্বারা চালিত এবং একত্রিত রূপে তারা মার্কেট শেষারে সংখ্যাগরিষ্ঠতা নিয়ন্ত্রণ করে, সেই বাজারকে কি বলা হয়?

- A. মনোপলি
 B. গলিগোপলি
 C. ডুমোপলি
 D. পারফেক্ট কমপিটিশন

- Ans** 1. D
 2. B
 3. A
 4. C

Question ID : 2055232708

Status : Answered

Chosen Option : 2

Q.80 B is thrice as efficient as A and C is 0.75 times as efficient as A. What is the ratio of number of days taken by A, B and C when they work individually?

- A. 4:1:3
 B. 3:1:4
 C. 2:3:1
 D. 5:1:2

- Ans** 1. C
 2. A
 3. D
 4. B

Question ID : 2055232725

Status : Answered

Chosen Option : 4

Q.81 How many bio-geographical zones are there in India?

- A. 2
 B. 4
 C. 6
 D. 10

- Ans** 1. A
 2. C
 3. D
 4. B

Question ID : 2055232691

Status : Answered

Chosen Option : 2

Q.82 One of four words is a class to which the other three belong. Identify the class.

- A. Coal
 B. Lignite
 C. Anthracite
 D. Peat

- Ans** 1. D
 2. B
 3. C
 4. A

Question ID : 2055232757

Status : Answered

Chosen Option : 4

Q.83 Where did Rani Lakshmi Bai die fighting the British?

- A. Varanasi
 B. Gwalior
 C. Morar
 D. Jhansi

- Ans** 1. B
 2. C
 3. D
 4. A

Question ID : 2055232687

Status : Answered

Chosen Option : 3

Q.84 Which is the most powerful piece in a game of chess?

- A. King
- B. Queen
- C. Rook
- D. Knight

Ans  1. C
 2. A
 3. B
 4. D

Question ID : 2055232689

Status : Answered

Chosen Option : 3

Q.85 An Assertion (A) and a Reason (R) are given below.

Assertion (A): The Indian Constitution came into force with effect from 26th January 1950.

Reason (R): 26th January is celebrated as the Republic day.

Choose the correct option.

- A. A is true but R is false.
- B. A is false but R is true.
- C. Both A and R are false.
- D. Both A and R are true but R is not the correct explanation of A.

Ans  1. C
 2. A
 3. B
 4. D

Question ID : 2055232780

Status : Answered

Chosen Option : 3

Q.86 If $20-10$ means 200, $8 \div 4$ means 12, 6×2 means 4, then

$$100 - 10 \times 1000 \div 1000 + 100 \times 10 = ?$$

- A. 20
- B. 10
- C. 0
- D. 1

Ans  1. B
 2. D
 3. A
 4. C





Question ID : 2055232752

Status : Answered

Chosen Option : 4

Q.87 UHT প্রক্রিয়াকরণ স্পষ্টরূপে কিসের প্রক্রিয়াকরণের জন্য ব্যবহার করা হয়?

- A. তেল
- B. দুধ
- C. পেট্রোল
- D. জল

Ans  1. A
 2. C
 3. D
 4. B

Question ID : 2055232699

Status : Answered

Chosen Option : 3

Q.88 Who was the Chinese pilgrim who visited India during the Gupta period?

- A. Hiuen Tsang
- B. Fa Hien
- C. I ching
- D. Li Xiu

Ans  1. B
 2. D

Question ID : 2055232684

Status : Answered

Chosen Option : 1

X 3. A

X 4. C

Q.89 Atul can do a piece of work in 18 days, Aaravya is 50% more efficient than Atul. How much more time does Atul take than Aaravya to do the same piece of work?

- A. 12
B. 6
C. 18
D. 10

Ans X 1. D

X 2. A

X 3. C

✓ 4. B

Question ID : 2055232726

Status : Answered

Chosen Option : 2

Q.90 If $(x+a)$ is the H.C.F of $2x^2+5x-12$ and x^2+x-12 then find the value of a.

- A. -3
B. -2
C. 4
D. 5

Ans ✓ 1. C

X 2. B

X 3. D

X 4. A

Question ID : 2055232720

Status : Answered

Chosen Option : 1

Q.91 কোন খেলায় 'বাগেল' (Bagel) শব্দটি ব্যবহার করা হয়?

- A. টেনিস
B. ক্রিকেট
C. স্কোয়াশ
D. বক্সিং

Ans ✓ 1. A

X 2. D

X 3. B

X 4. C

Question ID : 2055232688

Status : Answered

Chosen Option : 4

Q.92 The shadow of a tower on ground level is increased by 30 m, when the angle of depression by the sun changes from 60° to 30° . The height of the tower is?

- A. $12\sqrt{3}$ m
B. $17\sqrt{3}$ m
C. $16\sqrt{3}$ m
D. $15\sqrt{3}$ m

Ans X 1. B

X 2. C

✓ 3. D

X 4. A

Question ID : 2055232729

Status : Not Attempted and Marked For Review

Chosen Option : --

Q.93 Which of the below options is called a laughing gas?

- A. N_2O
B. CO_2
C. H_2O
D. SO_2

Ans ✓ 1. A

X 2. B

X 3. C

X 4. D

Question ID : 2055232701

Status : Answered

Chosen Option : 1

Q.94 Deepak sells all his goods available in his shop at the cost price, but he cheats his customer and gives 20% less goods as he should give. Find his % profit.

- A. 30%
- B. 33%
- C. 25%
- D. 20%

Ans 1. C

2. A

3. D

4. B

Question ID : 2055232745

Status : Answered

Chosen Option : 1

Q.95 Who is the current CEO of Flipkart?

- A. Ananth Narayanan
- B. Mukesh Bansal
- C. Binny Bansal
- D. Sachin Bansal

Ans 1. A

2. C

3. B

4. D

Question ID : 2055232678

Status : Answered

Chosen Option : 2

Q.96 What is the shape of the orbit of the planets?

- A. Round
- B. Straight line
- C. Elliptical
- D. Stretched out circles

Ans 1. A

2. D

3. C

4. B

Question ID : 2055232713

Status : Answered

Chosen Option : 3

Q.97 What is the minimum value of 'Y' for which 267Y2 is divisible by 3?

- A. 2
- B. 1
- C. 0
- D. 5

Ans 1. C

2. A

3. D

4. B

Question ID : 2055232734

Status : Answered

Chosen Option : 4

Q.98 Ram Naresh got two successive discounts, a bag with a list price of Rs. 400 is available at Rs. 160. If the second discount is 20%, find the first discount.

- A. 40%
- B. 30%
- C. 50%
- D. 80%

Ans 1. D

2. B

3. A

4. C

Question ID : 2055232743

Status : Answered

Chosen Option : 4

Q.99

Question ID : 2055232681

Status : Answered

Chosen Option : 1

Goecha La is a pass in which of the following Indian State?

- A. Sikkim
- B. Assam
- C. Meghalaya
- D. Uttarakhand

Ans  1. A

 2. D

 3. C

 4. B

Q.10 An Assertion (A) and a Reason (R) are given below.

0

Assertion (A): Clothes are not washed properly in hot water.

Reason (R): Hard water contains many minerals.

Choose the correct option.

- A. A is true but R is false.
- B. A is false but R is true.
- C. Both A and R are true and R is the correct explanation of A.
- D. Both A and R are true but R is not the correct explanation of A.

Ans  1. D

 2. A

 3. C

 4. B

Question ID : 2055232778

Status : Answered

Chosen Option : 1



Railway Recruitment Board (RRB) NTPC Exams Study Kit	English	CLICK HERE
रेलवे भर्ती बोर्ड एनटीपीसी (NTPC) परीक्षा अध्ययन सामग्री	हिन्दी	CLICK HERE
RRB Loco Pilot (ALP) Exam Study Kit	English	CLICK HERE
रेलवे भर्ती बोर्ड लोको पायलट (ALP) परीक्षा अध्ययन सामग्री	हिन्दी	CLICK HERE
RRB Group-D Exam Study Kit	English	CLICK HERE
रेलवे भर्ती बोर्ड Group-D परीक्षा अध्ययन सामग्री	हिन्दी	CLICK HERE
Study Kit for RRB JE (Junior Engineer) Exam	English	CLICK HERE
आरआरबी जूनियर इंजीनियर परीक्षा (चरण -1) अध्ययन किट	हिन्दी	CLICK HERE
IAS EXAMS STUDY MATERIALS		
Study Kit for IAS (Pre) GENERAL STUDIES Paper-1 (GS)	English	CLICK HERE
Study Kit for IAS (Pre) CSAT Paper-2(Aptitude)	English	CLICK HERE
सामान्य अध्ययन (GS) प्रारंभिक परीक्षा (Pre) पेपर-1	हिन्दी	CLICK HERE
आई. ए. एस. (सी-सैट) प्रारंभिक परीक्षा पेपर -2	हिन्दी	CLICK HERE
Gist of NCERT Study Kit For UPSC Exams	English	CLICK HERE