



RAILWAY RECRUITMENT BOARDS

रेलवे भर्ती बोर्ड

RRB NTPC 19th April 2016 Shift 1

Test Date:	19/04/2016
Test Time:	9:00 AM - 10:30 AM
Subject:	RRB NTPC Graduate

- Options shown in green color with a tick icon are correct
- Chosen option on top right of the question indicates the option selected by the candidate

Q.1 If 'summer is hot' is coded as 'de fe ba' and 'come cold summer' as 'ja ha ba' and 'winter is cold' as 'pa ja de' then 'come hot winter' is coded as _____.

- A. de ba ja
- B. fe ba pa
- C. ba pa ha
- D. pa ha fe

Ans 1. C

2. D

3. B

4. A

Question ID : 2055233162

Status : Answered

Chosen Option : 3

Q.2 What is the minimum number to be subtracted from 6321, which makes it completely divisible by 14?

- A. 8
- B. 12
- C. 7
- D. 11

Ans 1. A

2. B

3. C

4. D

Question ID : 2055233147

Status : Answered

Chosen Option : 3

Q.3 Jahangir was the _____ Mughal emperor of India.

- A. 3rd
- B. 4th
- C. 5th
- D. 6th

Ans 1. A

2. B

3. C

Question ID : 2055233096

Status : Answered

Chosen Option : 1

 4. D

Q.4 If P means '+', R means '×', Q means '+' and S means '-', then

$$48 P 8 Q 6 R 9 S 31 = ?$$

- A. 60
- B. 29
- C. 31
- D. 54

Ans  1. D

 2. B

 3. C

 4. A

Question ID : 2055233165

Status : Answered

Chosen Option : 3

Q.5 _____ granted charter to East India Company to establish trading posts in India in 1600.

- A. Queen Elizabeth I
- B. Queen Elizabeth II
- C. King George V
- D. King George VI

Ans  1. B

 2. A

 3. D

 4. C

Question ID : 2055233097

Status : Not Attempted and Marked For Review

Chosen Option : --

Q.6 Ramdas invested Rs. 90000 in a cosmetic business. After few months, Shyamdas joined him with Rs. 30000. At the end of the year, the total profit was divided between them in ratio 4 : 1. After how many months did Shyamdas joined business?

- A. 4
- B. 3
- C. 1
- D. 6

Ans  1. B

 2. C

 3. A

 4. D

Question ID : 2055233145

Status : Not Attempted and Marked For Review

Chosen Option : --

Q.7 Methane is known as _____.

- A. Laughing gas
- B. Tear gas
- C. Marsh gas
- D. Non-greenhouse gas

Ans  1. A

 2. B

 3. C

 4. D

Question ID : 2055233115

Status : Answered

Chosen Option : 4

Q.8 Hawa Mahal in Jaipur is constructed using

- A. White and green marble
- B. Granite
- C. Red and Pink sandstone
- D. Normal rocks

Ans  1. A
 2. C
 3. D
 4. B

Question ID : 2055233109
 Status : Answered
 Chosen Option : 2

Q.9 If the angles of a triangle are in the ratio of 1:2:3, then find the value of the largest angle.

- A. 30°
- B. 60°
- C. 90°
- D. 120°

Ans  1. B
 2. A
 3. C
 4. D

Question ID : 2055233151
 Status : Answered
 Chosen Option : 3

Q.10 Read the given statements carefully and answer the question.

Statement: Though the school bags policy has been announced, it is not clear how many schools are following it. The state Government is also clueless whether schools have implemented the rules. Which of the following is true according to the given statement?

- A. School bags policy has been implemented by the Government.
- B. Schools are not interested in following the rules.
- C. There is no monitoring system.
- D. State Government is not interested in follow-up.

Ans  1. A
 2. C
 3. D
 4. B

Question ID : 2055233190
 Status : Answered
 Chosen Option : 2

Q.11 The concept of the game of _____ is eliminating an opponent by touching.

- A. Kho Kho
- B. Kabaddi
- C. Judo
- D. Kalari

Ans 1. D
 2. C
 3. B
 4. A

Note: For this question, discrepancy is found in question/answer. So, This question is ignored for all candidates.

Question ID : 2055233102
 Status : Answered
 Chosen Option : 3

Q.12 The mean of 22 observations is 10. Two more observations are included and the new mean becomes 11. The mean of two new observations is

- A. 19
- B. 20
- C. 21
- D. 22

Question ID : 2055233153
 Status : Answered
 Chosen Option : 1

- Ans 1. B
 2. A
 3. C
 4. D

Q.13 An angle is 10° more than one third of its complement. Find the greater angle.

- A. 30°
B. 60°
C. 45°
D. 75°

- Ans 1. B
 2. C
 3. D
 4. A

Question ID : 2055233149

Status : Answered

Chosen Option : 1

Q.14 Neelam and Manisha starting from the same place run at a rate of 7 kmph and 9 kmph respectively. What time will they take to be 12 km apart, If they walk in the same direction?

- A. 3 hours
B. 6 hours
C. 12 hours
D. 9 hours

- Ans 1. B
 2. A
 3. D
 4. C

Question ID : 2055233159

Status : Answered

Chosen Option : 1

Q.15 Delhi metro covers a distance in 40 minutes, if it runs at a speed of 48 kmph on an average. Find the speed at which the train must run to reduce the time of journey to 32 minutes:

- A. 60kmph
B. 50kmph
C. 70kmph
D. 80kmph

- Ans 1. B
 2. A
 3. C
 4. D

Question ID : 2055233158

Status : Answered

Chosen Option : 2

Q.16 The mean of a distribution is 13 and the standard deviation is 7. What is the value of the coefficient variation?

- A. 50%
B. 76.77%
C. 53.85%
D. 38.88%

- Ans 1. A
 2. D
 3. C
 4. B

Question ID : 2055233152

Status : Answered

Chosen Option : 3

Q.17 A car stops on applying brakes mainly due to _____ force.

- A. Gravitational
- B. Centripetal
- C. Frictional
- D. Centrifugal

Ans  1. C

 2. B

 3. A

 4. D

Question ID : 2055233111

Status : Answered

Chosen Option : 1

Q.18 Statements followed by some conclusions are given below.

Statements:

1. Knowledge is not a skill. It is learning and experience.
2. The illiterate are not those who cannot read and write but those who cannot learn.

Conclusions:

- I. Those who cannot read and write are literate.
- II. Knowledge and skill are two different things.

Find which of the given conclusions logically follows from the given statements.

- A. Only conclusion I follows.
- B. Only conclusion II follows.
- C. Both I and II follow.
- D. Neither I nor II follows.

Ans  1. A

 2. C

 3. B

 4. D

Question ID : 2055233180

Status : Answered

Chosen Option : 3

Q.19 Statements followed by some conclusions are given below.

Statements:

1. Depleting natural resources is a major concern in our country.
2. Unless we go for renewable energy sources in a big way, increase in population being a heavy burden on the energy resources, will reduce the quality of life.

Conclusions:

- I. Depleting resources impacts quality of life.
- II. Use of renewable energy sources is a solution to counter increase in population.

Find which of the given conclusions logically follows from the given statements.

- A. Only conclusion I follows.
- B. Only conclusion II follows.
- C. Both I and II follow.
- D. Neither I nor II follows.

Ans  1. A

 2. D

 3. C

 4. B

Question ID : 2055233179

Status : Answered

Chosen Option : 1

Q.20 Quartz used in clocks is _____.

- A. Nitrogen silicate
- B. Silicon dioxide
- C. Sodium silicate
- D. Calcium silicate

Question ID : 2055233117

Status : Answered

Chosen Option : 4

- Ans  1. C
 2. B
 3. D
 4. A

Q.21 The head of the state in India is the _____.

- A. Prime Minister
- B. President
- C. Parliament
- D. Chief Justice of India

Question ID : 2055233105
Status : Answered
Chosen Option : 3

- Ans  1. D
 2. A
 3. C
 4. B

Q.22 Name the type of government in Bangladesh.

- A. Islamic Republic
- B. Parliamentary Democracy
- C. Federal Republic
- D. Constitutional Monarchy

Question ID : 2055233095
Status : Answered
Chosen Option : 1

- Ans  1. C
 2. D
 3. B
 4. A

Q.23 Which pair is not exactly similar to the other three pairs?

- A. Principal : School
- B. Pages : Note book
- C. Letters : Word
- D. Students : Class

Question ID : 2055233171
Status : Answered
Chosen Option : 1

- Ans  1. C
 2. A
 3. D
 4. B

Q.24 Which Indian state shares its borders with the maximum number of other Indian states?

- A. Manipur
- B. West Bengal
- C. Assam
- D. Uttarakhand

Question ID : 2055233094
Status : Answered
Chosen Option : 3

- Ans  1. D
 2. B
 3. C
 4. A

Q.25 _____ does not refer to the game of playing card.

- A. Bridge
- B. Blackjack
- C. Squash
- D. Solitaire

Question ID : 2055233100
Status : Answered
Chosen Option : 4

- Ans  1. D
 2. B
 3. C
 4. A

Q.26 _____ was appointed as one of the Goodwill Ambassadors by UNDP in March 2016.

- A. Ashley Judd
- B. Michelle Yeoh
- C. Merrick Garland
- D. Hillary Clinton

Question ID : 2055233108
Status : Answered
Chosen Option : 3

- Ans  1. A
 2. D
 3. C
 4. B

Q.27 _____ is the process of absorption of moisture from air.

- A. Deliquescence
- B. Capillary action
- C. Absorption
- D. Osmosis




Question ID : 2055233118
Status : Answered
Chosen Option : 4


- Ans  1. C
 2. B
 3. A
 4. D

Q.28 The process of optimizing fat content in milk is called _____.

- A. Vitamin fortification
- B. Pasteurization
- C. Standardization
- D. Homogenization

Question ID : 2055233120
Status : Answered
Chosen Option : 4


- Ans  1. A
 2. D
 3. C



**रेलवे भर्ती बोर्ड (आरआरबी)
परीक्षा अध्ययन सामग्री**

- 100% Syllabus Covered
- 4 Comprehensive Books
- 1000 Pages
- Current Affairs (PDF)
- Practice MCQs
- Support and Guidance

Only
~~₹6,000/-~~
₹1,995/-
70% Off


www.rrbportal.com

प्रिय अभ्यर्थियों,

आज इस गलाकाट प्रतिस्पर्धा के दौर में, हर जगह, हर क्षेत्र में मारामारी है। बात अगर सरकारी नौकरी की हो तो प्रतिस्पर्धा और भी कड़ी हो जाती है। जैसा की आप सभी जानते हैं RRBPORTAL विगत वर्षों से आप सबों को अंग्रेजी माध्यम में एक समग्र पाठ्यक्रम एवं मार्गदर्शन उपलब्ध करा रहा है। हमारे अध्ययन सामग्री की सफलता की दर करीब 70% है। विगत कुछ वर्षों की सरकारी विज्ञप्तियों (VACANCIES) पर नजर डालें तो आप देखेंगे की सर्वाधिक संख्या Railway के विज्ञप्तियों की है, और उसी अनुपात में भीड़ भी।

मित्रों इस परीक्षा में अंग्रेजी एवं हिंदी माध्यम के छात्र लगभग समान संख्या में सम्मिलित होते हैं, लेकिन हिंदी माध्यम से तैयारी करने वाले छात्रों के साथ सबसे बड़ी समस्या विश्वसनीय अध्ययन सामग्री एवं सही मार्गदर्शन की है।

आपकी इन्हीं समस्याओं और मांग को विचार में रखकर हमने नववर्ष में आपको हिंदी माध्यम में रेलवे भर्ती बोर्ड (आरआरबी), अध्ययन सामग्री उपलब्ध कराने का निर्णय लिया है। मित्रों हमने इस बात का पूरा ध्यान रखा है की आपको पाठ्यक्रम के अनुसार सारी चीजें एक जगह मिलें। हमने व्यवस्थित तरीके से लगभग 800पृष्ठों में इस अध्ययन सामग्री को परीक्षोपयोगी बनाया है।

आप क्या प्राप्त करेंगे?

- माध्यम: हिन्दी
- 100 प्रतिशत पाठ्यक्रम
- 838 पृष्ठ
- कुल 6 पुस्तिकायें
- Guidance & Support from Our Experts

Price of the Kit:

Rs. 4,000

Rs. 1,995/-
(Limited time Offer)



Order Online (100% Safe)

अन्य भुगतान विकल्प (Offline Payment Options)

**50%
OFF**

CLICK HERE

Disclaimer: RRB EXAM PORTAL वेबसाइट किसी भी प्रकार से रेलवे भर्ती बोर्ड (RRB) के साथ संबद्ध नहीं है, रेलवे भर्ती बोर्ड एवं भारतीय रेलवे की आधिकारिक वेबसाइट पर जाने के लिए www.rrcb.gov.in पर विजिट करें।

 4. B

Q.29 **Bird : Wings :: Fish : ?**

- A. Gills
- B. Head
- C. Fins
- D. Legs

Ans  1. A
 2. D
 3. C
 4. B

Question ID : 2055233169

Status : Answered

Chosen Option : 1

Q.30 **An assertion (A) and a reason (R) are given below.**

Assertion (A): Perennial rivers mostly originate from the Himalayas.

Reason (R): The fountains in the Himalayas feed the rivers.

Choose the correct option.

- A. Both A and R are true and R is the correct explanation of A
- B. Both A and R are true, but R is not the correct explanation of A
- C. A is true, but R is false
- D. A is false, but R is true

Ans  1. C
 2. A
 3. B
 4. D

Question ID : 2055233191

Status : Answered

Chosen Option : 3

Q.31 **Find the missing (?) in the series -**

3, 7, 13, 21, 31, ?

- A. 41
- B. 42
- C. 43
- D. 44

Ans  1. B
 2. D
 3. A
 4. C

Question ID : 2055233167

Status : Answered

Chosen Option : 3

Q.32 **Which state has the second highest number of seats in the Lok Sabha?**

- A. Uttar Pradesh
- B. Andhra Pradesh
- C. West Bengal
- D. Bihar

Question ID : 2055233106

Status : Answered

Chosen Option : 2

- Ans 1. C
 2. B
 3. D
 4. A

Q.33 If **TABLE = RYZJC**, then **CHAIR = _____**.

- A. AFZHQ
 B. AFYGP
 C. FAGYP
 D. ZFAHQ

Question ID : 2055233163

Status : Answered

Chosen Option : 2

- Ans 1. A
 2. B
 3. C
 4. D

Q.34 Find the odd pair out.

- A. Nitrogen & oxygen : Air
 B. Sulphur & Phosphorous : Match stick
 C. Hydrogen & Oxygen : Water
 D. Magnesium & Silver : Stainless steel

Question ID : 2055233113

Status : Answered

Chosen Option : 3

- Ans 1. C
 2. B
 3. D
 4. A

Q.35 _____ was the first Geographical Indication (GI) tagged product in India.

- A. Darjeeling Tea
 B. Solapuri Chaddar
 C. Nagpur Orange
 D. Orissa Ikat

Question ID : 2055233093

Status : Not Attempted and Mark ed For Review

Chosen Option : --

- Ans 1. D
 2. A
 3. C
 4. B

Q.36 Freezing point of water is _____.

- A. 40° F
- B. 42° F
- C. 34° F
- D. 32° F

Ans  1. A
 2. C
 3. D
 4. B

Question ID : 2055233129

Status : Answered

Chosen Option : 1

Q.37 ADGJ, CFIL, EHKJ, _____.

- A. FILO
- B. HKNQ
- C. DGJM
- D. GJMP

Ans  1. C
 2. B
 3. A
 4. D

Question ID : 2055233166

Status : Answered

Chosen Option : 4

Q.38 If the rate of interest is 8% per annum and Rs. 10000 lent at the compound interest half yearly then calculate the equivalent simple rate of interest for the first year?

- A. 8.16%
- B. 9%
- C. 7%
- D. 10%

Ans  1. B
 2. C
 3. D
 4. A

Question ID : 2055233135

Status : Answered

Chosen Option : 2

Q.39 '.docx' file is created with

- A. Spreadsheet
- B. Powerpoint
- C. Word processor
- D. Paint

Ans  1. D
 2. B
 3. A
 4. C

Question ID : 2055233122

Status : Answered

Chosen Option : 4

Q.40 Evaluate $(35/2)\%$ of 800gm – $(45/2)\%$ of 400gm

- A. 50 gm
- B. 150 gm
- C. 100 gm
- D. 80 gm

Ans  1. D
 2. C
 3. A
 4. B

Question ID : 2055233143

Status : Answered

Chosen Option : 3

Q.41 12 men finished $1/4$ part of whole work in 6 days. Find the number of additional men required to complete the job in next 6 days.

- A. 36
- B. 12
- C. 18
- D. 24

Ans  1. D
 2. A
 3. C
 4. B

Question ID : 2055233138

Status : Answered

Chosen Option : 1

Q.42 B is the brother of C. D is the sister of B. F is the sister of E who is the son of C. K is the husband of C. How is D related to F?

- A. Maternal Aunt
- B. Mother
- C. Sister
- D. Niece

Ans  1. C
 2. B
 3. A
 4. D

Question ID : 2055233174

Status : Answered

Chosen Option : 3

Q.43 _____ does not belong to the twelve zodiac signs.

- A. Ophiuchus
- B. Aquarius
- C. Libra
- D. Pisces

Ans  1. A
 2. D
 3. C
 4. B

Question ID : 2055233125

Status : Answered

Chosen Option : 4

Q.44 Rearrange the jumbled letters to make meaningful words and then select the one which is different.

- A. ENIMSAJ
- B. DLOGIRAM
- C. TORRAC
- D. REWOLFNUM

Question ID : 2055233181

Status : Answered

Chosen Option : 1

- Ans 1. A
 2. B
 3. D
 4. C

Q.45 Taxonomy is basically related to _____.

- A. Biodiversity
 B. Tax structure
 C. A branch of astronomy
 D. Study of human behaviour

Question ID : 2055233116
 Status : Answered
 Chosen Option : 1

- Ans 1. D
 2. B
 3. A
 4. C

Q.46 Ramesh purchased a memory card at a price of Rs. 625 including the sales tax. The rate of sales tax is 25%. If the seller has made a gain of 50%, then the cost price of the memory card is :

- A. Rs. 333
 B. Rs. 310
 C. Rs. 350
 D. Rs. 360

- Ans 1. D
 2. C
 3. B
 4. A

Question ID : 2055233155
 Status : Answered
 Chosen Option : 3

Q.47 The shadow of a standing tower of height $25\sqrt{3}$ m is found to be 50 m longer when the sun's elevation changes from 60° to X° . Find the measure of X ?

- A. 45°
 B. 30°
 C. 75°
 D. 90°

- Ans 1. D
 2. B
 3. C
 4. A

Question ID : 2055233142
 Status : Answered
 Chosen Option : 2

Q.48 30 persons can finish a job in 20 days. After 6 days how many persons should leave the job, so that work is completed in a total of 26 days?

- A. 9
 B. 12
 C. 8
 D. 7

- Ans 1. B
 2. D
 3. C
 4. A

Question ID : 2055233137
 Status : Answered
 Chosen Option : 4

Q.49 An investor invested 1/2 of his capital at 5%, 1/4 at 10% and rest at 8%. If his income after 2 years is Rs. 2800, find the capital amount.

- A. Rs. 10000
- B. Rs. 15000
- C. Rs. 20000
- D. Rs. 12000

Ans  1. C

-  2. B
-  3. D
-  4. A

Question ID : 2055233136

Status : Answered

Chosen Option : 1

Q.50 The distance between the two poles of length 16 m and 9 m, is X m. If two angles of elevation of their respective top from the bottom of the other are complementary to each other then the value X is :

- A. 10m
- B. 15m
- C. 16m
- D. 12m

Ans  1. D

-  2. A
-  3. B
-  4. C

Question ID : 2055233141

Status : Not Attempted and Marked For Review

Chosen Option : --

Q.51 _____ is not a constituent of tooth paste.

- A. Abrasive
- B. Fluoride
- C. Lubricant
- D. Surfactant

Ans  1. B

-  2. A
-  3. C
-  4. D

Question ID : 2055233114

Status : Answered

Chosen Option : 4

Comprehension:

Consider the following information and answer questions based on it.

Suresh is taller than Ramesh who is shorter than Rakesh. Jinesh is taller than the shortest person but shorter than Rakesh.

Pritesh is taller than Suresh but shorter than Jinesh.

SubQuestion No : 52

Q.5 Who is the shortest?
2

- A. Rakesh
- B. Ramesh
- C. Pritesh
- D. Suresh

Ans  1. D

-  2. B
-  3. A

Question ID : 2055233176

Status : Answered

Chosen Option : 3

 4. C

Comprehension:

Consider the following information and answer questions based on it.

Suresh is taller than Ramesh who is shorter than Rakesh. Jinesh is taller than the shortest person but shorter than Rakesh. Pritesh is taller than Suresh but shorter than Jinesh.

SubQuestion No : 53

Q.5 If Jayesh who is taller than Suresh joins the group, who will be fourth, if they are arranged in a descending order?

- 3**
- A. Jayesh
 - B. Jinesh
 - C. Pritesh
 - D. Cannot be determined

Question ID : 2055233177

Status : Answered

Chosen Option : 4

Ans  1. A

 2. B

 3. C

 4. D

Comprehension:

Consider the following information and answer questions based on it.

Suresh is taller than Ramesh who is shorter than Rakesh. Jinesh is taller than the shortest person but shorter than Rakesh. Pritesh is taller than Suresh but shorter than Jinesh.

SubQuestion No : 54

Q.5 Which statement, among the following, is correct?

- 4**
- A. Suresh is taller than Jinesh.
 - B. Pritesh is shorter than Rakesh
 - C. Jinesh is taller than Rakesh.
 - D. Ramesh is taller than Pritesh.

Question ID : 2055233178

Status : Answered

Chosen Option : 3

Ans  1. A

 2. D

 3. C

 4. B

Q.55 If VOTER = 41352, HEATER = 743654, TEASER = 645834, which number represents S?

- A. 1
- B. 5
- C. 8
- D. 7

Question ID : 2055233160

Status : Answered

Chosen Option : 3

Ans  1. A

 2. D

 3. C

 4. B

Q.56 Pointing to a man, a woman said "he is the brother of the daughter of my husband's wife". What is the woman to the man?

- A. Son
- B. Mother
- C. Father
- D. Sister

Question ID : 2055233172

Status : Answered

Chosen Option : 4

Ans  1. D



RRB NTPC

Railway Recruitment Board

RRB NTPC (Tier -1 & Tier -2) Exam

- [RRB NTPC \(Tier -1\) Exam](#)
- [RRB NTPC \(Tier -2\) Exam](#)
- [Exam PAPERS](#)
- [Exam Syllabus](#)
- [Eligibility](#)
- [Medical Fitness](#)
- [RRB Post Preference & Zones List](#)
- [परीक्षा सिलेबस "Exam Syllabus in Hindi"](#)
- [Printed Study Material \(English Medium\)](#)
- [RRB NTPC Exam for Aptitude Test](#)
- [RRB NTPC Exam for Typing Skill Test](#)

[CLICK HERE](#)

**Disclaimer: rrbexamportal.com is not associated with Railway Recruitment Board,
For RRB official website visit - www.rrcb.gov.in**

2. C 3. A 4. B

Q.57 Triangle PQR is such that $PR=7.5$ cm and triangle PQR is similar to triangle XYZ. If $XY=18$ and $YZ=12$ cm then find the ratio of PQ:QR

- A. 1:2
 B. 3:2
 C. 4:5
 D. 5:2

Ans 1. A

 2. D 3. C 4. B

Question ID : 2055233150

Status : Answered

Chosen Option : 4

Q.58 The planet Pluto was discovered in the year...

A. 1925

B. 1930

C. 1935

D. 1940

Ans 1. C

 2. B 3. D 4. A

Question ID : 2055233126

Status : Answered

Chosen Option : 2

Q.59 Two numbers are in the ratio 3:5. If each number is increased by 10, the ratio becomes 5:7. The smaller number is :

- A. 8
 B. 12
 C. 15
 D. 18

Ans 1. D

 2. A 3. B 4. C

Question ID : 2055233139

Status : Answered

Chosen Option : 4

Q.60 In 1955, _____ was renamed as State Bank of India.

A. Bank of Bengal

B. Bank of Bombay

C. Bank of Madras

D. Imperial Bank of India

Ans 1. C

 2. B 3. D 4. A

Question ID : 2055233091

Status : Answered

Chosen Option : 2

Q.61 Two vessels contain milk and water in the ratio 2:3 and 7:3. Find the ratio in which the contents of the two vessels have to be mixed so that the ratio of milk and water in the new mixture is equal.

- A. 2:1
- B. 1:2
- C. 3:2
- D. 2:3

Ans 1. A
 2. B
 3. D
 4. C

Question ID : 2055233140

Status : Answered

Chosen Option : 3

Q.62 Find the value of $335 * 335 - 165 * 165$?

- A. 20000
- B. 85000
- C. 85500
- D. 27500

Ans 1. D
 2. A
 3. B
 4. C

Question ID : 2055233146

Status : Answered

Chosen Option : 3

Q.63 Which one is not generally used as a fruit?

- A. Strawberry
- B. Grapes
- C. Pear
- D. Tomato

Ans 1. D
 2. B
 3. A
 4. C

Question ID : 2055233170

Status : Answered

Chosen Option : 1

Q.64 'Make in India Week' was launched in _____ from 13th to 18th February 2016.

- A. Bhubaneswar
- B. Udaipur
- C. Mysuru
- D. Mumbai

Ans 1. A
 2. C
 3. B
 4. D

Question ID : 2055233092

Status : Answered

Chosen Option : 2

Q.65 If **Chennai : Tamil Nadu**, then _____ : **Jharkhand**

- A. Raipur
- B. Ranchi
- C. Dhanbad
- D. Durgapur

Ans  1. A
 2. D
 3. C
 4. B

Question ID : 2055233168

Status : Answered

Chosen Option : 4

Q.66 Read the given statements carefully and answer the question.

Most people get their own cars to office. The number of vehicles on road is increasing day by day. It leads to traffic congestion and adds to the ever-increasing air pollution issues. As a result, respiratory problems are on a rise. People should, as far as possible, take public transport or do carpooling.

Which of the following situations better fits the above statement?

- A. People are becoming rich day by day and hence buying more cars.
- B. People can go to the shopping malls in cars but not to office.
- C. Respiratory problems doesn't affect the people who use public transport.
- D. More number of vehicles on road leads to traffic congestion.

Ans  1. B
 2. A
 3. C
 4. D

Question ID : 2055233192

Status : Not Attempted and Marked For Review

Chosen Option : --

Q.67 The famous forbidden city is in _____.

- A. France
- B. Italy
- C. China
- D. USA

Ans  1. B
 2. D
 3. A
 4. C

Question ID : 2055233110

Status : Answered

Chosen Option : 1

Q.68 Rate of heat conduction in solids does not depend on _____.

- A. Density of the material
- B. Dimensions of the material
- C. Friction
- D. Electronic configuration

Ans  1. A

Question ID : 2055233112

Status : Answered

Chosen Option : 4

✓ 2. C

✗ 3. D

✗ 4. B

Q.69 As per tiger census of 2014, tiger population in India was estimated at _____.

A. 1411

B. 1706

C. 2226

D. 1906

Ans ✓ 1. C

✗ 2. B

✗ 3. D

✗ 4. A

Question ID : 2055233103

Status : Answered

Chosen Option : 2

Q.70 _____ was the theme for World Wetland Day in 2016.

A. Sustainable Livelihoods

B. Wetlands take care of water

C. Wetlands for our future

D. Wetlands and Agriculture

Ans ✗ 1. C

✓ 2. A

✗ 3. B

✗ 4. D

Question ID : 2055233104

Status : Not Attempted and Marked For Review

Chosen Option : --

Q.71 L is K's sister. M is the father of K. N and O are brothers. L is the mother of O. How is K related to N?

A. Maternal Uncle

B. Brother

C. Nephew

D. Cannot be determined

Ans ✗ 1. B

✓ 2. C

✗ 3. D

✗ 4. A

Question ID : 2055233173

Status : Answered

Chosen Option : 1

Q.72 _____ is used in refrigeration.

A. Chlorofluorocarbon

B. Carbon dioxide

C. Nitrogen peroxide

D. Ammonium oxide

Ans ✓ 1. A

✗ 2. B

✗ 3. C

✗ 4. D

Question ID : 2055233119

Status : Answered

Chosen Option : 4

Q.73 If $(x^2+1/x^2)=6$, then find the value of $(10x-10/x)$

- A. +/- 15
- B. +/- 20
- C. +/- 30
- D. +/- 40

Ans  1. B
 2. C
 3. D
 4. A

Question ID : 2055233130

Status : Not Attempted and Marked For Review

Chosen Option : --

Q.74 Halley's comet is expected to return to the vicinity of earth in the year...

- A. 2086
- B. 2061
- C. 2041
- D. 2026

Ans  1. D
 2. B
 3. A
 4. C

Question ID : 2055233127

Status : Not Attempted and Marked For Review

Chosen Option : --

Q.75 Asymmetric Digital Subscriber Line (ADSL) is _____ technology.

- A. a wireless data communication
- B. a wired data communication
- C. amateur radio communication
- D. satellite communication

Ans  1. D
 2. A
 3. B
 4. C

Question ID : 2055233128

Status : Answered

Chosen Option : 4

Q.76 Who was appointed as the Defense Minister when the 16th Lok Sabha was formed in 2014?

- A. Venkaiah Naidu
- B. Ravi Shankar Prasad
- C. Manohar Parikkar
- D. Suresh Prabhu

Ans  1. D
 2. C
 3. B
 4. A

Question ID : 2055233107

Status : Answered

Chosen Option : 4

Q.77 If '+' means '+', '+' means '+', and '-' means '×', then $25 \div 25 + 5 \div 2 - 15 = ?$

- A. 0
- B. -12
- C. 60
- D. 45

Question ID : 2055233164

Status : Answered

Chosen Option : 4

- Ans  1. A
 2. D
 3. B
 4. C

Q.78 If SMART = 31524, MARBLE = 428376 and EAT = 537, then STABLE =?

- A. 618537
B. 253678
C. 453678
D. 243678

- Ans  1. C
 2. B
 3. D
 4. A

Question ID : 2055233161

Status : **Not Attempted and Marked For Review**

Chosen Option : --

Q.79 Choose the odd one out

- A. Optical disc
B. Magnetic Storage
C. Solid State Drive
D. Petabyte

- Ans  1. C
 2. A
 3. B
 4. D

Question ID : 2055233124

Status : **Answered**

Chosen Option : 4

Q.80 Which one is not true with 'backup'?

- A. Exact copy of computer files.
B. It is part of business continuity plan.
C. PCs do not require regular back up.
D. Offsite and on-site backup are more beneficial.

- Ans  1. A
 2. B
 3. C
 4. D

Question ID : 2055233123

Status : **Answered**

Chosen Option : 4

Q.81 If the standard deviation of a population is 9.5, what would be the population variance?

- A. 19
B. 90.25
C. 81.25
D. 93.25

- Ans  1. B
 2. C

Question ID : 2055233154

Status : **Answered**

Chosen Option : 3

~~3. A~~~~4. D~~

Q.82 Find the largest 6 digit number which is completely divided by 71?

A. 999965

B. 999954

C. 999964

D. 999974

Ans ~~1. B~~~~2. A~~~~3. D~~

✓ 4. C

Question ID : 2055233148

Status : Answered

Chosen Option : 4

Q.83 The first, all women two wheeler public transportation service in India was started in

A. Gurgaon

B. Noida

C. Chennai

D. Bengaluru

Ans ~~1. C~~~~2. B~~~~3. D~~

✓ 4. A

Question ID : 2055233090

Status : Answered

Chosen Option : 4

Q.84 If $(a-1/a) = 3/4$, Find the value of (a^3-1/a^3) .

A. 164/31

B. 171/64

C. 171/32

D. 164/37

Ans ~~1. D~~

✓ 2. B

~~3. C~~~~4. A~~

Question ID : 2055233132

Status : Answered

Chosen Option : 2

Q.85 Find the greatest number which on dividing 3050 and 5200 leaves remainders 7 and 9 respectively.

A. 149

B. 111

C. 153

D. 179

Ans ~~1. A~~

✓ 2. D

~~3. B~~~~4. C~~

Question ID : 2055233133

Status : Not Attempted and Marked For Review

Chosen Option : --

Comprehension:

RRB NTPC EXAM Study Kit



- ▶ 100% Exam Syllabus Covered
- ▶ 4 Books, 950+ Pages
- ▶ Mathematics, General Intelligence & Reasoning,
- ▶ General Science, General Awareness
- ▶ Previous year Solved Papers
- ▶ Mock Tests with Answers
- ▶ 1 Year Current Affairs



₹ 6,000/-
₹ 1,999/-
Only



For RRB Exam Courses & Study Materials Call Us at: +91-8800734161

What you will get:

- 100% Syllabus Covered in printed format.
- 4 Booklets
 - General Intelligence & Reasoning
 - General Awareness
 - Arithmetic
 - General Science
- 950+ Pages
- One Year Current Affairs (PDF Copy)
- Guidance & Support from Our Experts

Price of the Kit:

Rs. 6,000

Rs. 1,999/-

(Limited time Offer)



Net Banking

Order Online (100% Safe)

अन्य भुगतान विकल्प (Offline Payment Options)

**50%
OFF**

CLICK HERE

**Disclaimer: rrbexamportal.com is not associated with Railway Recruitment Board,
For RRB official website visit - www.rrcb.gov.in**

The following table represents the human resource profile of a global company.

Consider the table and answer questions based on it.

Country	No. of offices	Male		Female		Total
		Class I	Class II	Class I	Class II	
US	20	150	50	70	35	305
UK	15	115	40	65	20	240
India	10	125	25	45	90	285
Canada	10	80	30	50	10	170

SubQuestion No : 86

Q.8 The percentage of male employees in India to the total number of employees of the company is

6

- A. 11%
- B. 15.5%
- C. 15%
- D. 20%

Question ID : 2055233189

Status : Not Attempted and Marked For Review

Chosen Option : --

- Ans
- 1. A
 - 2. B
 - 3. D
 - 4. C

Comprehension:

The following table represents the human resource profile of a global company.

Consider the table and answer questions based on it.

Country	No. of offices	Male		Female		Total
		Class I	Class II	Class I	Class II	
US	20	150	50	70	35	305
UK	15	115	40	65	20	240
India	10	125	25	45	90	285
Canada	10	80	30	50	10	170

SubQuestion No : 87

Q.8 Total number of employees in the company is

7

- A. 950
- B. 960
- C. 995
- D. 1000

Question ID : 2055233187

Status : Answered

Chosen Option : 1

- Ans
- 1. C
 - 2. A
 - 3. D
 - 4. B

Comprehension:

The following table represents the human resource profile of a global company.

Consider the table and answer questions based on it.

Country	No. of offices	Male		Female		Total
		Class I	Class II	Class I	Class II	
US	20	150	50	70	35	305
UK	15	115	40	65	20	240
India	10	125	25	45	90	285
Canada	10	80	30	50	10	170

SubQuestion No : 88

Q.88 The ratio of female employees of US to Canada is

- A. 4 : 7
 B. 7 : 4
 C. 21 : 17
 D. 21 : 29

Question ID : 2055233188

Status : Answered

Chosen Option : 1

Ans  1. B 2. A 3. C 4. D

Q.89 The period of Dominion of India refers to

- A. Pre-partition day
 B. Pre-Independence day
 C. Post Republic day
 D. Independence day to Republic day

Question ID : 2055233099

Status : Not Attempted and Marked For Review

Chosen Option : --

Ans  1. A 2. B 3. D 4. C

Q.90 Who won the man of the match award in the 2016 Asia Cup T20 held in Bangladesh?

- A. Bhuvaneshwar Kumar
 B. Virat Kohli
 C. Shikhar Dhawan
 D. R Ashwin

Question ID : 2055233101

Status : Answered

Chosen Option : 2

Ans 1. D

2. B

3. A

4. C

Note: For this question, discrepancy is found in question/answer. So, This question is ignored for all candidates.

Q.91 What is the average of first 25 multiples of 11?

- A. 152
- B. 147
- C. 143
- D. 134

Ans  1. B
 2. C
 3. A
 4. D

Question ID : 2055233144

Status : **Not Attempted and Marked For Review**

Chosen Option : --

Q.92 If $2x(x+y+z) = 250$, $2y(x+y+z) = 100$, $2z(x+y+z) = 100$, then find the value of $(3x+6y+15z)$.

- A. 110
- B. 95
- C. 85
- D. 69

Ans  1. A
 2. C
 3. D
 4. B

Question ID : 2055233131

Status : **Answered**

Chosen Option : 3

Q.93 Kakori train robbery took place in the year

- A. 1923
- B. 1924
- C. 1925
- D. 1926

Ans  1. B
 2. A
 3. D
 4. C

Question ID : 2055233098

Status : **Answered**

Chosen Option : 1

Q.94 By selling an article for Rs. 979, a shopkeeper bears a loss of 11%. If shopkeeper sells that article for Rs. 1232, then the profit % is :

- A. 12%
- B. 21%
- C. 11%
- D. 14%

Ans  1. B
 2. C
 3. D
 4. A

Question ID : 2055233157

Status : **Answered**

Chosen Option : 1

Q.95 The HCF and LCM of two numbers are 45 and 270 respectively. If the ratio of the two numbers is 2:3 and smaller of the two numbers is X, then find X^2 .

- A. 2025
- B. 4225
- C. 8100
- D. 18225

Question ID : 2055233134

Status : **Answered**

Chosen Option : 3

- Ans  1. D
 2. A
 3. B
 4. C

Q.96 Inflammation of the mucous membrane is called _____.

- A. Bronchitis
 B. Hepatitis
 C. Iritis
 D. Gastritis

Question ID : 2055233121

Status : Answered

Chosen Option : 1

- Ans  1. A
 2. B
 3. C
 4. D

Comprehension:

Consider the following information and answer the questions based on it.

Out of 200 kids, 20 wanted to see only the galaxy, 25 wanted to see only stars, 30 wanted to see only planets, 50 wanted to see stars, planets and moon, 25 wanted to see both moon and galaxy, 25 wanted to see only moon and the remaining did not want to see anything.

SubQuestion No : 97





Q.97 In all, how many kids did not want to see the galaxy?

- A. 130
 B. 100
 C. 155
 D. 125

Question ID : 2055233185

Status : Not Attempted and Marked For Review

Chosen Option : --

- Ans  1. D
 2. B
 3. A
 4. C

Comprehension:





Consider the following information and answer the questions based on it.

Out of 200 kids, 20 wanted to see only the galaxy, 25 wanted to see only stars, 30 wanted to see only planets, 50 wanted to see stars, planets and moon, 25 wanted to see both moon and galaxy, 25 wanted to see only moon and the remaining did not want to see anything.

SubQuestion No : 98

Q.9
8 In all, how many kids wanted to see the moon?

- A. 50
- B. 75
- C. 100
- D. 120

Ans  1. D
 2. A
 3. B
 4. C

Question ID : 2055233183

Status : Not Attempted and Marked For Review

Chosen Option :--

Comprehension:





Consider the following information and answer the questions based on it.

Out of 200 kids, 20 wanted to see only the galaxy, 25 wanted to see only stars, 30 wanted to see only planets, 50 wanted to see stars, planets and moon, 25 wanted to see both moon and galaxy, 25 wanted to see only moon and the remaining did not want to see anything.

SubQuestion No : 99

Q.9
9 How many kids wanted to see at least 2 objects?

- A. 50
- B. 25
- C. 75
- D. 55

Ans  1. C
 2. A
 3. D
 4. B

Question ID : 2055233184

Status : Not Attempted and Marked For Review

Chosen Option :--

Q.10
0 Manish purchased mobile phone and got 50% concession on the marked price of the phone and sold it for Rs. 8100 with 35% profit on the price he bought. What was the marked price?

- A. Rs. 8000
- B. Rs. 12000
- C. Rs. 10000
- D. Rs. 9000

Ans  1. D
 2. B
 3. A
 4. C

Question ID : 2055233156

Status : Answered

Chosen Option : 1



Railway Recruitment Board (RRB) NTPC Exams Study Kit	English	CLICK HERE
रेलवे भर्ती बोर्ड एनटीपीसी (NTPC) परीक्षा अध्ययन सामग्री	हिन्दी	CLICK HERE
RRB Loco Pilot (ALP) Exam Study Kit	English	CLICK HERE
रेलवे भर्ती बोर्ड लोको पायलट (ALP) परीक्षा अध्ययन सामग्री	हिन्दी	CLICK HERE
RRB Group-D Exam Study Kit	English	CLICK HERE
रेलवे भर्ती बोर्ड Group-D परीक्षा अध्ययन सामग्री	हिन्दी	CLICK HERE
Study Kit for RRB JE (Junior Engineer) Exam	English	CLICK HERE
आरआरबी जूनियर इंजीनियर परीक्षा (चरण -1) अध्ययन किट	हिन्दी	CLICK HERE
IAS EXAMS STUDY MATERIALS		
Study Kit for IAS (Pre) GENERAL STUDIES Paper-1 (GS)	English	CLICK HERE
Study Kit for IAS (Pre) CSAT Paper-2(Aptitude)	English	CLICK HERE
सामान्य अध्ययन (GS) प्रारंभिक परीक्षा (Pre) पेपर-1	हिन्दी	CLICK HERE
आई. ए. एस. (सी-सैट) प्रारंभिक परीक्षा पेपर -2	हिन्दी	CLICK HERE
Gist of NCERT Study Kit For UPSC Exams	English	CLICK HERE