



RAILWAY RECRUITMENT BOARDS

रेलवे भर्ती बोर्ड

RRB NTPC 27th April 2016 Shift 3

Test Date:	27/04/2016
Test Time:	4:00 PM - 5:30 PM
Subject:	RRB NTPC Graduate

- Options shown in green color with a tick icon are correct
- Chosen option on top right of the question indicates the option selected by the candidate

Q.1 Introducing a man, Shamita said, "He is the only son of my mother's mother."
How is Shamita related to the man?

- A. Mother
- B. Aunt
- C. Sister
- D. Niece

Ans 1. D

2. A

3. C

4. B

Question ID : 9888373174

Status : Answered

Chosen Option : 1

Q.2 If $2x+3 = 9$ then find the value of $3x+2$

- A. 12
- B. 16
- C. 13
- D. 11

Ans 1. D

2. C

3. B

4. A

Question ID : 9888373150

Status : Answered

Chosen Option : 1

Q.3 Radish is an example of:

- A. bulb
- B. root
- C. tuber
- D. fruit

Ans 1. A

2. D

3. C

4. B

Question ID : 9888373111

Status : Answered

Chosen Option : 4

Q.4

Question ID : 9888373175

Status : Answered

Pointing to a man in a photograph, Gunjan said, "His mother's only daughter is my mother." How is Gunjan related to that man?

- A. Nephew
- B. Sister
- C. Wife
- D. Niece

Ans 1. A
 2. D
 3. B
 4. C

Chosen Option : 1

Q.5 One should use porcelain and not metal containers in a microwave oven because...

- A. Charge may accumulate on the metal surface and there is danger of getting a shock.
- B. Porcelain vessels are better conductors of heat and thus food gets cooked quickly.
- C. Metal containers might undergo chemical reaction leading to spoilage of food.
- D. Porcelain vessels are cheaper than the metal containers.

Ans 1. A
 2. B
 3. C
 4. D

Question ID : 9888373094

Status : Answered

Chosen Option : 1

Q.6 Thomas Cup is associated with which of the following sports?

- A. Hockey
- B. Badminton
- C. Football
- D. Cricket

Ans 1. C
 2. B
 3. A
 4. D

Question ID : 9888373102

Status : Answered

Chosen Option : 3

Q.7 When was the ASLV used in India for the first time?

- A. 1980
- B. 1987
- C. 1994
- D. 2000

Ans 1. C
 2. B
 3. A
 4. D

Question ID : 9888373128

Status : Not Attempted

Chosen Option : --

Q.8 Three clocks are designed to alarm in every hour, two hours and three hours respectively. If they all alarmed together three hours before, then after how many hours will they next alarm together?

- A. 3 hours
- B. 6 hours
- C. 2 hours
- D. 1 hours

Ans 1. D
 2. A
 3. B
 4. C

Question ID : 9888373138

Status : Answered

Chosen Option : 2

Q.9 Name the international independent agency whose key activities include scientific research, education, development & monitoring of anti-doping capacities and code in all sports and all countries.

- A. International Body Against Doping
- B. World Anti-Doping Agency
- C. Play true, Play safe
- D. International Body for Sports Ethics

Ans 1. A

Question ID : 9888373104

Status : Answered

Chosen Option : 3

 2. C

 3. B

 4. D

Q.10 Winner of Mixed doubles category in Wimbledon, 2015 is _____.

- A. Sania Mirza & Leander Paes
- B. Serena Williams & Roger Federer
- C. Martina Hingis & Leander Paes
- D. Serena Williams & Novak Djokovic

Question ID : 9888373097

Status : Answered

Chosen Option : 4

Ans  1. A

 2. D

 3. B

 4. C

Q.11 Insert the missing character depicted by ‘?’

18	24	32
12	14	16
3	?	4
72	112	128

A. 2

B. 3

C. 4

D. 5

Ans  1. B

 2. A

 3. C

 4. D

Question ID : 9888373165

Status : Answered

Chosen Option : 4

Q.12 India has designed and developed pilotless target aircrafts named _____, and made successful test flights of its unmanned air vehicle (UAV).

- 1. Nishant
- 2. Lakshya
- 3. Astra

- A. Only 2
- B. Only 1
- C. Only 2 and 3
- D. Only 1 and 2

Ans  1. D

 2. A

 3. C

 4. B

Question ID : 9888373121

Status : Not Attempted

Chosen Option : --

Q.13 Which of the following branch of medical science deals with the study and treatment of the liver?

- A. Helcology
- B. Hepatology
- C. Heterology
- D. Geriatrics

Ans  1. D

 2. C

 3. B

Question ID : 9888373125

Status : Answered

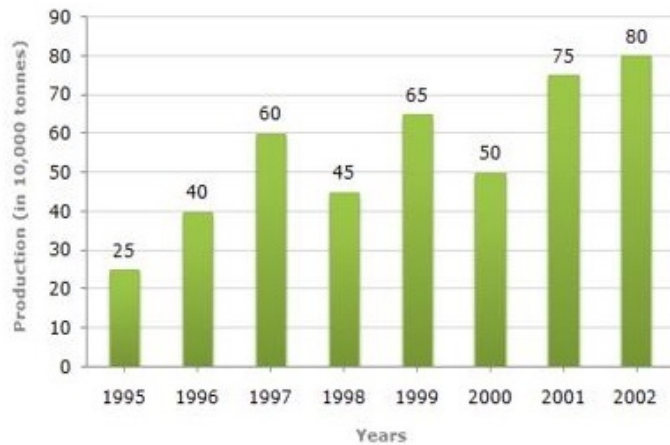
Chosen Option : 3

X 4. A

Comprehension:

Study the bar chart and answer the questions based on it.

Production of Pesticides by Coromandal International Ltd. Company (in 1000 tonnes)



SubQuestion No : 14

Q.1 The average production of 1996 and 1997 was exactly equal to the average production of which of the following pairs of years?

- 4
- A. 2000 and 2001
 - B. 1999 and 2000
 - C. 1998 and 2000
 - D. 1995 and 2001

- Ans
- 1. B
 - 2. A
 - 3. C
 - 4. D

Question ID : 9888373188

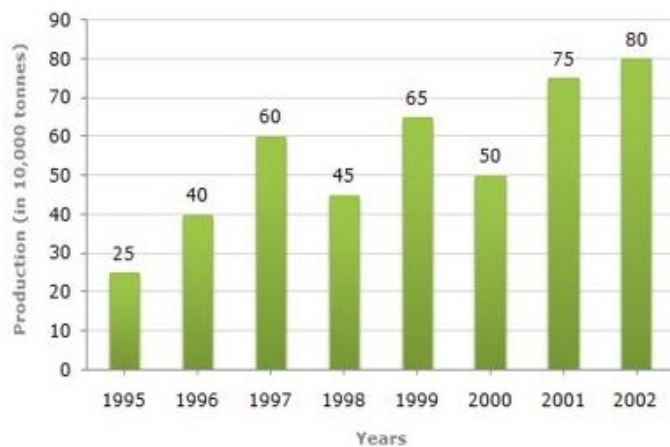
Status : Answered

Chosen Option : 4

Comprehension:

Study the bar chart and answer the questions based on it.

Production of Pesticides by Coromandal International Ltd. Company (in 1000 tonnes)



SubQuestion No : 15

Q.1 In which year was the percentage increase in production as compared to the previous year the maximum?

- 5
- A. 2002
 - B. 2001
 - C. 1997
 - D. 1996

- Ans
- 1. C
 - 2. D
 - 3. A
 - 4. B

Question ID : 9888373190

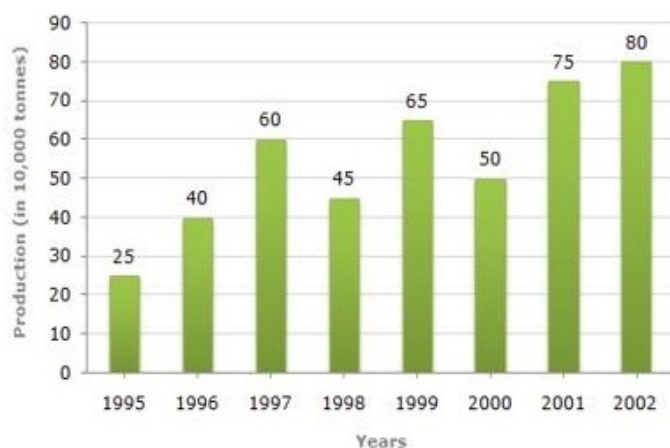
Status : Answered

Chosen Option : 2

Comprehension:

Study the bar chart and answer the questions based on it.

Production of Pesticides by Coromandal International Ltd. Company (in 1000 tonnes)



SubQuestion No : 16

Q.1 What was the percentage increase in production of Pesticides in 2002 compared to that in 1995?

- 6
- A. 320%
 - B. 300%
 - C. 220%
 - D. 200%

Ans 1. A
 2. C
 3. D
 4. B

Question ID : 9888373189

Status : Answered

Chosen Option : 2

Q.17 The President of India, Pranab Mukherjee presented the 24th Saraswati Sammaan for the year 2014 to:

- A. Govind Mishra
- B. Sugathakumari
- C. M Veerappa Moily
- D. Dilip Parulekar

Ans 1. B
 2. D
 3. A
 4. C

Question ID : 9888373101

Status : Answered

Chosen Option : 4

Q.18 _____ is one of the states of matter obtained by cooling a gas of very low density to extremely low temperatures.

- A. Gas
- B. Plasma
- C. Bose-Einstein Condensate (BEC)
- D. Plasma Condensate

Ans 1. C
 2. B
 3. A
 4. D

Question ID : 9888373091

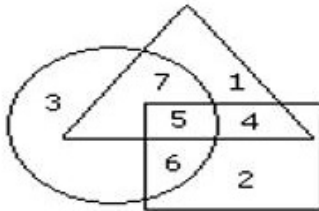
Status : Answered

Chosen Option : 1

Comprehension:

Study the following figure and answer the questions given below.

- Trained Lecturers
 Married Population
 Lecturers in college



SubQuestion No : 19

Q.1 By which number, the trained unmarried lecturers in the college are represented?

- 9
 A. 6
 B. 5
 C. 7
 D. 4

- Ans 1. C
 2. B
 3. D
 4. A

Question ID : 9888373186

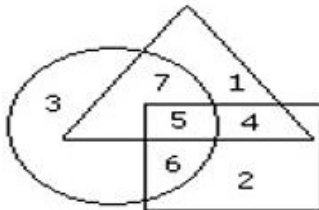
Status : Answered

Chosen Option : 3

Comprehension:

Study the following figure and answer the questions given below.

- Trained Lecturers
 Married Population
 Lecturers in college



SubQuestion No : 20

Q.2 If Ravenshaw College management requires only married trained lecturers for teaching, What is represented by the number ??

- 0
 A. Married lecturers in the college
 B. Trained lecturers
 C. Unmarried trained lecturers
 D. Married trained lecturers

- Ans 1. C
 2. B
 3. A
 4. D

Question ID : 9888373185

Status : Answered

Chosen Option : 3

Comprehension:

RRB NTPC EXAM Study Kit



- ▶ 100% Exam Syllabus Covered
- ▶ 4 Books, 950+ Pages
- ▶ Mathematics, General Intelligence & Reasoning,
- ▶ General Science, General Awareness
- ▶ Previous year Solved Papers
- ▶ Mock Tests with Answers
- ▶ 1 Year Current Affairs



₹ 6,000/-
₹ 1,999/-
Only



For RRB Exam Courses & Study Materials Call Us at: +91-8800734161

What you will get:

- 100% Syllabus Covered in printed format.
- 4 Booklets
 - General Intelligence & Reasoning
 - General Awareness
 - Arithmetic
 - General Science
- 950+ Pages
- One Year Current Affairs (PDF Copy)
- Guidance & Support from Our Experts

Price of the Kit:

Rs. 6,000

Rs. 1,999/-

(Limited time Offer)



Net Banking

Order Online (100% Safe)

अन्य भुगतान विकल्प (Offline Payment Options)

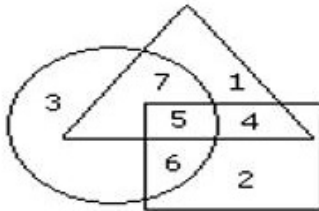
**50%
OFF**

CLICK HERE

**Disclaimer: rrbexamportal.com is not associated with Railway Recruitment Board,
For RRB official website visit - www.rrcb.gov.in**

Study the following figure and answer the questions given below.

- Trained Lecturers
 Married Population
 Lecturers in college



SubQuestion No : 21

Q.2 By which number, the trained married lecturers in the college are represented?

1

- A. 7
 B. 6
 C. 5
 D. 4

Ans 1. B

2. C

3. A

4. D

Question ID : 9888373184

Status : Answered

Chosen Option : 2

Q.22 Four pairs of words are given below out of which three are alike in some manner and one is different. Which is different from the rest?

- A. Steel : Utensils
 B. Bronze : Statue
 C. Duralumin : Aircraft
 D. Wood : Rails

Ans 1. D

2. C

3. A

4. B

Question ID : 9888373170

Status : Answered

Chosen Option : 1

Q.23 Find the least number that must be subtracted from 98534, to get a number exactly divisible by 824.

- A. 484
 B. 478
 C. 422
 D. 375

Ans 1. C

2. A

3. B

4. D

Question ID : 9888373134

Status : Answered

Chosen Option : 3

Q.24 20 pens and 46 pencils were purchased for Rs. 235. If the average price of a pencil is Rs. 2.50 then calculate the average price (in Rs.) of a pen.

- A. 6
 B. 4
 C. 8
 D. 12

Ans 1. B

2. C

3. A

4. D

Question ID : 9888373133

Status : Answered

Chosen Option : 3

Q.25

Question ID : 9888373112

Status : Answered

Chosen Option : 2

Belur Math is located at:

- A. West Bengal
- B. Maharashtra
- C. Uttar Pradesh
- D. Tamil Nadu

Ans 1. D
 2. A
 3. B
 4. C

Q.26 Galvanization a process to prevent rusting involves use of _____ coating to steel or iron.

- A. Nickel
- B. Magnesium
- C. Copper
- D. Zinc

Ans 1. A
 2. B
 3. C
 4. D

Question ID : 9888373118

Status : Answered

Chosen Option : 4

Q.27 **Direction:**
 There are three statements which are followed by three conclusions. Choose the conclusions which logically follow from the given statements.

Statements:

All the doors are keys.
 All the keys are bats.
 Some clocks are bats.

Conclusions:

- (1) Some bats are doors.
- (2) Some clocks are keys.
- (3) All the keys are doors.

- A. Only (1) and (2)
- B. Only (1)
- C. Only (2)
- D. Only (1) and (3)

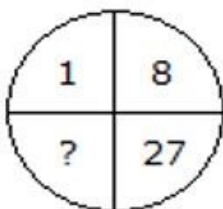
Ans 1. C
 2. B
 3. D
 4. A

Question ID : 9888373180

Status : Answered

Chosen Option : 2

Q.28 Insert the missing character depicted by '?'



- A. 41
- B. 64
- C. 35
- D. 61

Ans 1. C
 2. B
 3. A
 4. D

Question ID : 9888373167

Status : Answered

Chosen Option : 2

Q.29

Question ID : 9888373132

If $\sqrt{5} = 2.236$; then $\sqrt{5/2}$ is

- A. 1.851
- B. 1.118
- C. 2.236
- D. 1.782

Ans 1. C
 2. A
 3. B
 4. D

Status : Answered
 Chosen Option : 3

Q.30 Which state of India produces the highest quantity of Jute?

- A. Bihar
- B. Odisha
- C. West Bengal
- D. Jharkhand

Ans 1. B
 2. A
 3. C
 4. D

Question ID : 9888373114
 Status : Answered
 Chosen Option : 3

Q.31 Which of the following languages was not included in the 8th schedule of Indian Constitution through 92nd amendment act?

- A. Maithili
- B. Bodo
- C. Santhali
- D. Kannada

Ans 1. A
 2. D
 3. C
 4. B

Question ID : 9888373113
 Status : Answered
 Chosen Option : 2

Q.32 A table tennis player, lost 12 games out of 18 games played. Calculate the games won in terms of decimal.

- A. 0.667
- B. 0.067
- C. 0.50
- D. 0.333

Ans 1. D
 2. A
 3. B
 4. C

Question ID : 9888373136
 Status : Answered
 Chosen Option : 1

Q.33 কোন গৌণ রঙটি, দুটি মৌলিক রঙ লাল এবং নীল-এর মিশ্রণে পাওয়া যায়?

- A. সাদা
- B. হলুদ
- C. ম্যাগেন্টা
- D. সায়ান

Ans 1. D
 2. C
 3. B
 4. A

Question ID : 9888373093
 Status : Answered
 Chosen Option : 2

Q.34

Question ID : 9888373164
 Status : Answered

If in a certain language, MANURE is coded as EMRNUA, how is LIVELY coded in that code?

Chosen Option : 1

- A. YLLEVI
- B. YLVLEI
- C. YLLVEI
- D. YLVLIE

Ans  1. C
 2. A
 3. B
 4. D

Q.35 The value of $(0.00000729/0.00000027)$ is

- A. 0.27
- B. 0.027
- C. 2.7
- D. 27

Ans  1. C
 2. D
 3. A
 4. B

Question ID : 9888373131

Status : Answered

Chosen Option : 2

Q.36 If $a/b = 1/4$; $b/c = 1/8$ and $a=2$ then the value of c is-

- A. 8
- B. 16
- C. 32
- D. 64

Ans  1. C
 2. A
 3. D
 4. B



Question ID : 9888373140

Status : Answered

Chosen Option : 3

Q.37 The value of $\cos 0^\circ$ is

- A. 0
- B. Infinite
- C. not defined
- D. 1

Ans  1. B
 2. A
 3. D
 4. C

Question ID : 9888373156

Status : Answered

Chosen Option : 3

Q.38 Read the statement and select a conclusion from the given alternatives:

Statement:

Company 'X' had asked its employees to declare income and assets but it has been strongly opposed by the employees' his/her union and no employee is going to declare his/her income.

Conclusions:

- I. The employees of the company 'X' do not seem to have any additional income besides their salary.
- II. The employees' union want all the senior officer to declare their income first.

- A. only conclusion I follows.
- B. only conclusion II follows.
- C. either I or II follows.
- D. neither I nor II follows.

Ans  1. C
 2. B
 3. A

Question ID : 9888373191

Status : Answered

Chosen Option : 4

✓ 4. D

Q.39 Prime Minister Narendra Modi has released two commemorative coins of denominations Rs. 125 & Rs. 10 as a mark of tribute to whom?

- A. Abdul Kalam
B. Mahatma Gandhi
C. Dr. Rajendra Prasad
D. B.R.Ambedkar

Ans ✗ 1. B

✓ 2. D

✗ 3. C

✗ 4. A

Question ID : 9888373095

Status : Answered

Chosen Option : 2

Q.40 যদি একটি সমকোণী ত্রিভুজের, দীর্ঘতম বাহুটি মাঝারি বাহুর থেকে 4 সেমি বেশী লম্বা হয় এবং মাঝারি বাহুটি ক্ষুদ্রতম বাহুটির থেকে 4 সেমি বেশী লম্বা হয়, তাহলে মাঝারি বাহুটির দৈর্ঘ্য কত?

- A. 12 সেমি
B. 16 সেমি
C. 20 সেমি
D. 8 সেমি

Ans ✗ 1. D

✓ 2. B

✗ 3. C

✗ 4. A

Question ID : 9888373155

Status : Answered

Chosen Option : 2

Q.41 _____ soils are red in color and not suitable for agriculture found along the Tamil Nadu, Odisha and small part of Chhotanagpur and Meghalaya.

- A. Alluvial Soil
B. Red Soil
C. Laterite Soil
D. Regur Soil

Ans ✗ 1. A

✗ 2. B

✗ 3. D

✓ 4. C

Question ID : 9888373115

Status : Answered

Chosen Option : 4

Q.42 Complete the Figure X from the given alternatives 1,2,3,4



(X)



(1)



(2)



(3)



(4)

- A. 1
B. 2
C. 3
D. 4

Ans ✗ 1. B

✗ 2. A

✗ 3. C

✓ 4. D

Question ID : 9888373171

Status : Answered

Chosen Option : 1

Q.43 নিম্নলিখিত কোনটি রাজ্যের মুখ্যমন্ত্রীর সম্পর্কে সত্য নয়?

- A. রাজ্য পর্যায়ে মুখ্যমন্ত্রীর অবস্থান, কেন্দ্রে রাষ্ট্রপতির পদের অনুরূপ।
B. গভর্নর সেইসমস্ত ব্যক্তিদেরই মন্ত্রী হিসাবে নিয়োগ করেন যাদের শুধুমাত্র মুখ্যমন্ত্রী সুপারিশ করেন।
C. মুখ্যমন্ত্রী হলেন রাজ্য পরিচালনা বোর্ডের চেয়ারম্যান।
D. মুখ্যমন্ত্রী যতদিন বিধানসভায় সংখ্যাগরিষ্ঠ সমর্থন পান ততদিন গভর্নর তাঁকে বরখাস্ত করতে পারবেন না।

Question ID : 9888373106

Status : Answered

Chosen Option : 3

- Ans 1. B
 2. D
 3. A
 4. C

Q.44 Name the device used to connect computers for communication via telephone lines.

- A. HUB
 B. Switch
 C. Repeater
 D. MODEM

Question ID : 9888373107

Status : Answered

Chosen Option : 1

- Ans 1. D
 2. A
 3. C
 4. B

Q.45 Factors of $x^2+7x+10$ are

- A. $(x-5)(x-2)$
 B. $(x+5)(x+2)$
 C. $(x-5)(x+2)$
 D. $(x-4)(x+2)$

Question ID : 9888373151

Status : Answered

Chosen Option : 1

- Ans 1. B
 2. C
 3. D
 4. A

Q.46 Who among the following is known as the Father of Civil Services in India?

- A. Lord Cornwallis
 B. Warren Hastings
 C. Lord Wellesley
 D. Lord William Bentinck

Question ID : 9888373117

Status : Answered

Chosen Option : 2

- Ans 1. C
 2. A
 3. D
 4. B

Q.47 In terms of environmental studies, CER refers to:

- A. Certified Emission Reductions
 B. Capped Emission Repository
 C. Certified Emission Repository
 D. Capped Emission Reductions

Question ID : 9888373130

Status : Not Attempted

Chosen Option : --

- Ans 1. B
 2. A
 3. C
 4. D

Q.48 World climate conference popularly known as COP-21 (2015) was held in _____.

- A. New York
 B. London
 C. Paris
 D. Berlin

Question ID : 9888373122

Status : Answered

Chosen Option : 3

- Ans 1. B
 2. D



RRB NTPC

Railway Recruitment Board

RRB NTPC (Tier -1 & Tier -2) Exam

- [RRB NTPC \(Tier -1\) Exam](#)
- [RRB NTPC \(Tier -2\) Exam](#)
- [Exam PAPERS](#)
- [Exam Syllabus](#)
- [Eligibility](#)
- [Medical Fitness](#)
- [RRB Post Preference & Zones List](#)
- [परीक्षा सिलेबस "Exam Syllabus in Hindi"](#)
- [Printed Study Material \(English Medium\)](#)
- [RRB NTPC Exam for Aptitude Test](#)
- [RRB NTPC Exam for Typing Skill Test](#)

[CLICK HERE](#)

**Disclaimer: rrbexamportal.com is not associated with Railway Recruitment Board,
For RRB official website visit - www.rrcb.gov.in**

✓ 3. C

✗ 4. A

Q.49 Gitish took a loan for 4 years at 5% Compound Interest. If the total interest paid was Rs. 431.01, Calculate the principal.

- A. Rs. 2000
B. Rs. 2050
C. Rs. 2100
D. Rs. 2150

Ans ✗ 1. B

✗ 2. D

✗ 3. C

✓ 4. A

Question ID : 9888373145

Status : Answered

Chosen Option : 4

Q.50 A, B and C can complete the work in 4, 5 and 6 hours respectively. If they all work together and receive Rs. 777 as wages, then find the share of A.

- A. Rs. 300
B. Rs. 315
C. Rs. 326
D. Rs. 175

Ans ✗ 1. D

✓ 2. B

✗ 3. A

✗ 4. C

Question ID : 9888373141

Status : Answered

Chosen Option : 2

Q.51 A shopkeeper purchased a pen drive of marked price Rs. 1000 at successive discounts of 10% & 15% respectively. He spent Rs. 35 on packaging and sold it on Rs. 1000. Calculate the Gain percent.

- A. No Gain
B. 25%
C. 30%
D. 35%

Ans ✗ 1. D

✗ 2. C

✗ 3. A

✓ 4. B

Question ID : 9888373149

Status : Answered

Chosen Option : 3

Q.52 In a certain code language, if EXECUTE is coded as 5351695 and SCRIPT is coded as 714279, then EXIST will be coded as?

- A. 23579
B. 97532
C. 23597
D. 53279

Ans ✗ 1. B

✗ 2. A

✗ 3. C

✓ 4. D

Question ID : 9888373161

Status : Answered

Chosen Option : 4

Q.53 Complete the Figure X from the given alternatives 1,2,3,4



(X)



(1)



(2)



(3)



(4)

- A. 1
B. 2
C. 3
D. 4

Ans ✗ 1. A

✗ 2. C

Question ID : 9888373172

Status : Answered

Chosen Option : 2

✓ 3. D

✗ 4. B

Q.54 Rampal told Arjun, 'Yesterday I defeated the only brother of the daughter of my grandmother.' Whom did Rampal defeat?

- A. Son
- B. Father
- C. Brother
- D. Father-in-law

Ans ✗ 1. D

✗ 2. A

✗ 3. C

✓ 4. B

Question ID : 9888373173

Status : Answered

Chosen Option : 4

Q.55 Battle of Gulnabad was led by Mahmud Hotaki and fought in the year _____.

- A. 1770
- B. 1722
- C. 1712
- D. 1702

Ans ✗ 1. A

✓ 2. B

✗ 3. D

✗ 4. C

Question ID : 9888373123

Status : Not Attempted

Chosen Option : --

Q.56 Apollo 11, the first artificial satellite that landed humans on moon, was launched in which year?

- A. 1975
- B. 1968
- C. 1969
- D. 1958

Ans ✗ 1. D

✗ 2. B

✓ 3. C

✗ 4. A

Question ID : 9888373126

Status : Answered

Chosen Option : 3

Q.57 The smallest number that is completely divisibly by 6, 8, 12 and 16 is-

- A. 48
- B. 24
- C. 64
- D. 80

Ans ✗ 1. C

✗ 2. B

✗ 3. D

✓ 4. A

Question ID : 9888373137

Status : Answered

Chosen Option : 4

Q.58 Name the committee appointed in 1986 by Rajiv Gandhi on "Revitalisation of Panchayati Raj Institution for Democracy & Development".

- A. Ashok Mehta Committee
- B. L M Singhvi Committee
- C. G.V.K Rao Committee
- D. Balwant Rai Mehta Committee.

Ans ✗ 1. A

✗ 2. C

✓ 3. B

✗ 4. D

Question ID : 9888373105

Status : Answered

Chosen Option : 1

Q.59 _____ are a mountain range that runs almost parallel to the western coast of the Indian peninsula, and is one of the eight "hottest hotspots" of biological diversity in the world sometimes called the "Great Escarpment of India".

- A. Eastern Ghats
- B. Western Ghats
- C. Himalayas
- D. Satpura Range

Ans ✗ 1. C

Question ID : 9888373098

Status : Answered

Chosen Option : 4

2. D
 3. A
 4. B

Q.60 A man, rowing a boat, covers a distance of 16 km in two hours downstream. He covers half the distance in same amount of time when rowing upstream. Calculate the speed of the stream.

- A. 4 km/hr
 B. 2 km/hr
 C. 3 km/hr
 D. 1 km/hr

- Ans** 1. C
 2. A
 3. D
 4. B

Question ID : 9888373143

Status : Answered

Chosen Option : 4

Q.61 Match the Correct Memory Units.

- | | |
|------------|--------------|
| a) 4 bit | (p) 1 MB |
| b) 1024 KB | (q) 1 byte |
| c) 1024 TB | (r) 1 nibble |
| d) 8 bit | (s) 1 PB |

- A. a-r, b-p, c-s, d-q
 B. a-p, b-s, c-q, d-r
 C. a-r, b-s, c-q, d-p
 D. a-r, b-q, c-s, d-p

- Ans** 1. A
 2. B
 3. D
 4. C

Question ID : 9888373108

Status : Answered

Chosen Option : 1

Q.62 Read the statement and select a conclusion from the given alternatives:

Statement:

The Official Secret Act (OSA) enacted by the 'ABC' Government in the year 1930 seems to be one of the major sources of corruption in the country 'X'.

Conclusions:

- I. The Official Secret Act has to be abolished immediately to put an end to the corruption in the country 'X'.
 II. The 'ABC' Government had an intention of encouraging corruption in the Government offices.

- A. only conclusion I follows.
 B. only conclusion II follows
 C. either I or II follows.
 D. neither I nor II follows

- Ans** 1. A
 2. B
 3. C
 4. D

Question ID : 9888373192

Status : Answered

Chosen Option : 3

Q.63 Who is the Amrut Yojana scheme named after? (initiative to meet the nutrition needs of pregnant, lactating women in the tribal areas)

- A. Mahatma Gandhi
 B. Abdul Kalam
 C. B R Ambedkar
 D. Indira Gandhi

- Ans** 1. C
 2. B
 3. D
 4. A

Question ID : 9888373096

Status : Answered

Chosen Option : 2


Q.64

Question ID : 9888373153

Status : Answered

Find the maximum area of a rectangular field which is surrounded by a rope of 400 m.

- A. 5000 m²
- B. 6250 m²
- C. 4000 m²
- D. 10000 m²

Ans  1. A
 2. D
 3. C
 4. B

Chosen Option : 2

Q.65 Read the statements and select a conclusion from the given alternatives:




Statement:

The minimum qualification for this job is MTECH.
 However, candidates who have appeared for the final year of MTECH can also apply.

Conclusions:

- I. All candidates who have yet to post graduate will be there in the list of selected candidates.
- II. All candidates having MTECH as their minimum qualification will be there in the list of selected candidates.

- A. only conclusion I follows.
- B. only conclusion II follows.
- C. either I or II follows.
- D. neither I nor II follows

Ans  1. C
 2. A
 3. D
 4. B




Question ID : 9888373193

Status : Answered

Chosen Option : 3

Q.66 If $19x^2 = 100^2 - 90^2$, then find the value of x

- A. 10
- B. 9
- C. 11
- D. 12

Ans  1. C
 2. A
 3. D
 4. B




Question ID : 9888373152

Status : Answered

Chosen Option : 2

Q.67 _____ a professional Tennis player, became the new goodwill ambassador for the UN Fund for Children.

- A. Sania Mirza
- B. Serena Williams
- C. Roger Federer
- D. Novak Djokovic

Ans  1. D
 2. A
 3. C
 4. B




Question ID : 9888373100

Status : Answered

Chosen Option : 2

Q.68 Rahul and Raghav are 110 km apart from each other and they started horse-riding towards each other at same time at a speed of 20 km/hr. and 24 km/hr. After how many hours of riding will they be a distance of 22 km?

- A. 1 hour
- B. 1 hour 30 min
- C. 2 hours
- D. 2 hours 30 min

Ans  1. D
 2. C
 3. B
 4. A

Question ID : 9888373144

Status : Answered

Chosen Option : 2

Q.69

Question ID : 9888373116

Status : Answered

Chosen Option : 3

The lady who played an important role in the awakening of Indian women to fight for independence and who is also known as Nightingale of India is -

- A. Vijaya Lakshmi Pandit
- B. Durga Bai Deshmukh
- C. Sarojini Naidu
- D. Madam Bhikaji Cama

Ans 1. A
 2. D
 3. C
 4. B

Q.70 A man buys 10 oranges for Rs. 3 and sells 8 for Rs. 3. Calculate his gain percent.

- A. 20 %
- B. 25 %
- C. 27 %
- D. 30 %

Ans 1. B
 2. D
 3. A
 4. C

Question ID : 9888373148

Status : Answered

Chosen Option : 1

Q.71 A motorist knows four different routes from Jaipur to Bhangarh. From Bhangarh to Alwar he knows three different routes and from Alwar to Carlisle he knows two different routes. How many routes does he know from Jaipur to Carlisle?

- A. 12
- B. 24
- C. 48
- D. 60

Ans 1. B
 2. D
 3. A
 4. C

Question ID : 9888373168

Status : Answered

Chosen Option : 1

Q.72 The expenses of a person increases by Rs. 50000 for every month in February and March. If his expenses in January was Rs. 50000, Calculate his average expenditure (in Rs.) from January to March.

- A. 100000
- B. 150000
- C. 75000
- D. 50000

Ans 1. C
 2. D
 3. A
 4. B

Question ID : 9888373160

Status : Answered

Chosen Option : 3

Q.73 An example of Full Duplex communication channel.

- A. Radio Broadcasting
- B. Television Broadcasting
- C. Walkie-Talkie
- D. Telephone conversation

Ans 1. D
 2. A
 3. C
 4. B

Question ID : 9888373109

Status : Answered

Chosen Option : 1

Q.74 Ravi, Rohan and Rajesh alone can complete a work in 10, 12 and 15 days respectively. In how many days can the work be completed, if all three work together?

- A. 4 days
- B. 5 days
- C. 3 days
- D. 8 days

Ans 1. B

Question ID : 9888373142

Status : Answered

Chosen Option : 4

2. C
 3. D
 4. A

Q.75 In an examination, student gets on average 76 marks. The total marks for five subjects is 500. His marks in 4 subjects are mentioned; calculate the marks obtained by the student in Mathematics marked as "x" in the table below.

Subject	Maths	English	Sanskrit	Science	Social Science
Marks Obtained	x	87	83	78	57

- A. 80
 B. 83
 C. 72
 D. 75

Ans 1. A
 2. D
 3. B
 4. C

Question ID : 9888373159

Status : Answered

Chosen Option : 2

Q.76 If Selling Price is Rs. 72 & Gain Percentage = 20%, calculate the Cost Price.

- A. Rs. 60
 B. Rs. 58
 C. Rs. 61
 D. Rs. 59

Ans 1. D
 2. A
 3. B
 4. C

Question ID : 9888373147

Status : Answered

Chosen Option : 2

Q.77 রাসায়নিক প্রতীক সম্পর্কে নিচের কোনটি সত্য নয়?

- A. মৌলের নামের জন্য এগুলি একটি শর্ট-হ্যান্ড নোটেশন
 B. প্রতীক একটি একক অক্ষর বা দুটি অক্ষর নিয়ে গঠিত হয়
 C. এটি জেমস চ্যাডউইক এবং জে. জে. থমসন দ্বারা প্রস্তাবিত হয়েছিল
 D. ক্লোরিনের রাসায়নিক প্রতীক হল Cl.

Ans 1. D
 2. A
 3. B
 4. C

Question ID : 9888373092

Status : Answered

Chosen Option : 4

Q.78 What fraction of 2 hours is 12 seconds?

- A. 1/200
 B. 1/300
 C. 1/400
 D. 1/600

Ans 1. B
 2. C
 3. A
 4. D

Question ID : 9888373135

Status : Answered

Chosen Option : 4




**रेलवे भर्ती बोर्ड
स्टडी किट**

FOR HELP CALL
011-45151781, 45041881

रेलवे भर्ती बोर्ड (आरआरबी) परीक्षा अध्ययन सामग्री

- 100% Syllabus Covered
- 4 Comprehensive Books
- 1000 Pages
- Current Affairs (PDF)
- Practice MCQs
- Support and Guidance

Only
~~₹6,000/-~~
₹1,995/-
70% Off


www.rrbportal.com

प्रिय अभ्यर्थियों,

आज इस गलाकाट प्रतिस्पर्धा के दौर में, हर जगह, हर क्षेत्र में मारामारी है। बात अगर सरकारी नौकरी की हो तो प्रतिस्पर्धा और भी कड़ी हो जाती है। जैसा की आप सभी जानते हैं RRBPORTAL विगत वर्षों से आप सबों को अंग्रेजी माध्यम में एक समग्र पाठ्यक्रम एवं मार्गदर्शन उपलब्ध करा रहा है। हमारे अध्ययन सामग्री की सफलता की दर करीब 70% है। विगत कुछ वर्षों की सरकारी विज्ञप्तियों (VACANCIES) पर नजर डालें तो आप देखेंगे की सर्वाधिक संख्या Railway के विज्ञप्तियों की है, और उसी अनुपात में भीड़ भी।

मित्रों इस परीक्षा में अंग्रेजी एवं हिंदी माध्यम के छात्र लगभग समान संख्या में सम्मिलित होते हैं, लेकिन हिंदी माध्यम से तैयारी करने वाले छात्रों के साथ सबसे बड़ी समस्या विश्वसनीय अध्ययन सामग्री एवं सही मार्गदर्शन की है।

आपकी इन्हीं समस्याओं और मांग को विचार में रखकर हमने नववर्ष में आपको हिंदी माध्यम में रेलवे भर्ती बोर्ड (आरआरबी), अध्ययन सामग्री उपलब्ध कराने का निर्णय लिया है। मित्रों हमने इस बात का पूरा ध्यान रखा है की आपको पाठ्यक्रम के अनुसार सारी चीजें एक जगह मिलें। हमने व्यवस्थित तरीके से लगभग 800 पृष्ठों में इस अध्ययन सामग्री को परीक्षोपयोगी बनाया है।

आप क्या प्राप्त करेंगे?

- माध्यम: हिन्दी
- 100 प्रतिशत पाठ्यक्रम
- 838 पृष्ठ
- कुल 6 पुस्तिकायें
- Guidance & Support from Our Experts

Price of the Kit:

Rs. 4,000

Rs. 1,995/-
(Limited time Offer)



Order Online (100% Safe)

अन्य भुगतान विकल्प (Offline Payment Options)

**50%
OFF**

CLICK HERE

Disclaimer: RRB EXAM PORTAL वेबसाइट किसी भी प्रकार से रेलवे भर्ती बोर्ड (RRB) के साथ संबद्ध नहीं है, रेलवे भर्ती बोर्ड एवं भारतीय रेलवे की आधिकारिक वेबसाइट पर जाने के लिए www.rrcb.gov.in पर विजिट करें।

Q.79 Who has been appointed as first-ever Ombudsman (Ethics officer) of BCCI?

- A. Justice A.P. Shah
- B. Justice Anil R. Dave
- C. Justice Dipak Misra
- D. Justice Jagdish Singh Khehar

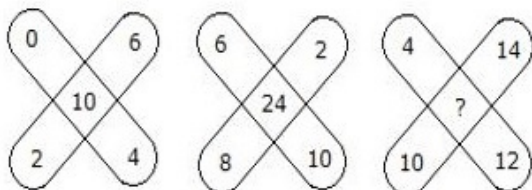
Ans 1. C
 2. A
 3. B
 4. D

Question ID : 9888373103

Status : Answered

Chosen Option : 4

Q.80 Insert the missing character depicted by ‘?’



- A. 36
- B. 48
- C. 38
- D. 30

Ans 1. A
 2. B
 3. C
 4. D

Question ID : 9888373166

Status : Not Attempted

Chosen Option : --

Q.81 If the average age of 20 students in Class I is 10 years and average age of 25 students in Class II is 12 years, find the average age (in years) of all students.

- A. 11
- B. 11.111
- C. 10.50
- D. 10.85

Ans 1. D
 2. B
 3. A
 4. C

Question ID : 9888373158

Status : Answered

Chosen Option : 2

Q.82 Which part of the human brain is the centre for intelligence, memory and emotions?

- A. Hypothalamus
- B. Cerebrum
- C. Corpus Callosum
- D. Mid Brain

Ans 1. D
 2. A
 3. B
 4. C

Question ID : 9888373124

Status : Answered

Chosen Option : 3

Q.83 Two numbers are in ratio 3:4. When 3 is subtracted from both the numbers, the ratio becomes 2:3. Find the sum of the numbers.

- A. 16
- B. 20
- C. 21
- D. 22

Ans 1. C
 2. B
 3. D

Question ID : 9888373139

Status : Answered

Chosen Option : 1

 4. A

Q.84 একটি সমবাহু ত্রিভুজ, যার ক্ষেত্রফল $44\sqrt{3}$ বর্গ ইউনিট, তার অন্তর্ভুক্ত বৃত্ত (incircle) ও বহির্ভুক্ত বৃত্ত (circumcircle) ব্যাসার্ধের অনুপাত কত হবে?

- A. $1/2$
B. $1/4$
C. $1/3$
D. $2/3$

Ans  1. B

 2. A

 3. C

 4. D

Question ID : 9888373154

Status : Not Attempted

Chosen Option : --

Q.85 Calculate the principal if an amount of Rs. 441 is received on compound interest at the rate of 5% per annum after 2 years.

- A. Rs. 400
B. Rs. 390
C. Rs. 380
D. Rs. 350

Ans  1. C

 2. D

 3. A

 4. B

Question ID : 9888373146

Status : Answered

Chosen Option : 3

Comprehension:

Answer the questions based on the following information:

Six colleagues are sitting in a circle and are facing the center of the circle. Diana is between Puskar and Padma. Priyanka is between Mahesh and Lucky. Puskar and Mahesh are opposite to each other.

SubQuestion No : 86

Q.86 Who are the neighbours of Mahesh?

- A. Puskar and Diana
B. Diana and Priyanka
C. Priyanka and Padma
D. Lucky and Priyanka

Ans  1. C

 2. B

 3. D

 4. A

Question ID : 9888373178

Status : Answered

Chosen Option : 1

Comprehension:

Answer the questions based on the following information:

Six colleagues are sitting in a circle and are facing the center of the circle. Diana is between Puskar and Padma. Priyanka is between Mahesh and Lucky. Puskar and Mahesh are opposite to each other.

SubQuestion No : 87

Q.87 Who is just right to Padma?

- A. Diana
B. Lucky
C. Puskar
D. Priyanka

Ans  1. B

 2. D

 3. A

 4. C

Question ID : 9888373177

Status : Answered

Chosen Option : 3

Comprehension:

Answer the questions based on the following information:

Six colleagues are sitting in a circle and are facing the center of the circle. Diana is between Puskar and Padma. Priyanka is between Mahesh and Lucky. Puskar and Mahesh are opposite to each other.

SubQuestion No : 88

Q.8 Who is sitting opposite to Priyanka?

- A. Puskar
- B. Diana
- C. Padma
- D. Lucky

Ans 1. A
 2. D
 3. B
 4. C

Question ID : 9888373179
 Status : Answered
 Chosen Option : 3

Q.89 Directions:

There are three statements which are followed by four conclusions. Choose the conclusions which logically follow from the given statements

Statements:

Some cups are pins.
 Some pins are covers.
 All the covers are pens.

Conclusions:

- (1) Some pens are pins.
- (2) Some covers are cups.
- (3) No cup is pin.
- (4) Some pins are cups.

- A. Only (1) and (2)
- B. Only (2) and (4)
- C. Only (2) and (3)
- D. Only (1) and (4)

Ans 1. D
 2. C
 3. A
 4. B

Question ID : 9888373181
 Status : Answered
 Chosen Option : 1

Q.90 নিচে চার জোড়া শব্দ দেওয়া হয়েছে যার তিনটির মধ্যে কোনো ধরনের একটি মিল রয়েছে এবং একটি জোড়া হলো পৃথক। বাকিগুলির থেকে কোনটি পৃথক?

- A. টুপি
- B. ঘোমটা
- C. হেলমেট
- D. পাগড়ি

Ans 1. A
 2. C
 3. D
 4. B

Question ID : 9888373169
 Status : Answered
 Chosen Option : 4

Q.91 If $\sin\theta = 40/41$, then $\cot\theta$ is

- A. 40/9
- B. 9/40
- C. 9/41
- D. 41/9

Ans 1. D
 2. A
 3. B

Question ID : 9888373157
 Status : Answered
 Chosen Option : 3

 4. C

Q.92 _____ হল ভারতের বৃহত্তম প্রাসাদগুলির একটি, যা 'অম্বা ভিলা' নামেও পরিচিত এবং ওদেয়ার মহারাজার বাসভবন ছিল।

- A. মাইসোর প্যালেস
- B. লেখ প্যালেস
- C. মাত্তানচেরী প্যালেস
- D. হাম্পি

Ans  1. A

 2. C

 3. D

 4. B

Question ID : 9888373099

Status : Answered

Chosen Option : 1

Q.93 If in a certain language, SCARCE is coded as CSRAEC, how is STABLE coded in that code?

- A. TBSAEL
- B. BTSAEL
- C. BTELSA
- D. TSB AEL

Ans  1. A

 2. B

 3. D

 4. C

Question ID : 9888373163

Status : Answered

Chosen Option : 3

Q.94 **Direction:**
There are three statements which are followed by four conclusions. Choose the conclusions which logically follow from the given statements

Statements:

- Some images are answers.
- Some answers are videos.
- All the videos are poems.

Conclusions:

- (1) Some videos are answers.
- (2) Some poems are images.
- (3) All the images are poems.
- (4) Some poems are answers.

- A. Only (1) and (2)
- B. Only (1) and (4)
- C. Only (1) and (3)
- D. Only (2) and (4)

Ans  1. D

 2. A

 3. B

 4. C

Question ID : 9888373182

Status : Answered

Chosen Option : 3

Q.95 In a certain code language, if CHECK is coded as 97294 and QUERY is coded as 51238, then CHERRY will be coded as?

- A. 729833
- B. 792338
- C. 972338
- D. 338972

Ans  1. D

 2. C

 3. B

 4. A

Question ID : 9888373162

Status : Answered

Chosen Option : 2

Q.96 Human blood platelets releases _____ which helps in clotting of blood.

- A. Prothrombin
- B. Fibrin
- C. Fructose
- D. Sucrose

Ans  1. A

 2. D

 3. B

 4. C

Question ID : 9888373110

Status : Answered

Chosen Option : 3

Q.97

Question ID : 9888373120

Light can travel _____ km in a year.



- A. 5 billion
- B. 10 billion
- C. 5 trillion
- D. 10 trillion

Ans  1. B
 2. C
 3. D
 4. A

Status : Answered
Chosen Option : 1

Q.98 What was the major decision that took place in 1987 Montreal Conference?

- A. Developed countries will completely ban CFC production by 2000
- B. Developed countries will completely ban CFC production by 2010
- C. Developing countries will completely ban CFC production by 2000
- D. Developing countries will completely ban CFC production by 2020

Ans  1. C
 2. D
 3. B
 4. A

Question ID : 9888373129
Status : Answered
Chosen Option : 3

Q.99 The major objective of INSAT series of satellites is to facilitate.

- A. TV relay to remote areas
- B. Mobile network in remote areas
- C. Internet services
- D. Mapping locations through GPS

Ans  1. D
 2. A
 3. C
 4. B

Question ID : 9888373127
Status : Answered
Chosen Option : 2

Q.10 A good cricket fielder while catching a fast moving ball moves his hand along with the ball because _____.

- A. He decreases the time of contact therefore increasing the force of contact.
- B. He increases the time of contact thereby reducing the force of contact.
- C. He is afraid to take the ball and thus takes his hand out.
- D. He decreases the time of contact therefore reducing the force of contact

Ans  1. C
 2. A
 3. D
 4. B

Question ID : 9888373119
Status : Answered
Chosen Option : 4



Railway Recruitment Board (RRB) NTPC Exams Study Kit	English	CLICK HERE
रेलवे भर्ती बोर्ड एनटीपीसी (NTPC) परीक्षा अध्ययन सामग्री	हिन्दी	CLICK HERE
RRB Loco Pilot (ALP) Exam Study Kit	English	CLICK HERE
रेलवे भर्ती बोर्ड लोको पायलट (ALP) परीक्षा अध्ययन सामग्री	हिन्दी	CLICK HERE
RRB Group-D Exam Study Kit	English	CLICK HERE
रेलवे भर्ती बोर्ड Group-D परीक्षा अध्ययन सामग्री	हिन्दी	CLICK HERE
Study Kit for RRB JE (Junior Engineer) Exam	English	CLICK HERE
आरआरबी जूनियर इंजीनियर परीक्षा (चरण -1) अध्ययन किट	हिन्दी	CLICK HERE
IAS EXAMS STUDY MATERIALS		
Study Kit for IAS (Pre) GENERAL STUDIES Paper-1 (GS)	English	CLICK HERE
Study Kit for IAS (Pre) CSAT Paper-2(Aptitude)	English	CLICK HERE
सामान्य अध्ययन (GS) प्रारंभिक परीक्षा (Pre) पेपर-1	हिन्दी	CLICK HERE
आई. ए. एस. (सी-सैट) प्रारंभिक परीक्षा पेपर -2	हिन्दी	CLICK HERE
Gist of NCERT Study Kit For UPSC Exams	English	CLICK HERE