



# RAILWAY RECRUITMENT BOARDS

## रेलवे भर्ती बोर्ड

### RRB NTPC Graduate 18th Jan 2017 Shift 3

Roll No:	
Participants Name:	
Test Center Name:	
Test Date:	18/01/2017
Test Time:	4:00 PM - 5:30 PM
Subject:	RRB NTPC Graduate

- Options shown in green color with a tick icon are correct
- Chosen option on top right of the question indicates the option selected by the candidate

**Q.1** Lifeline Express (LLE), the World's first 'Hospital on Train', went on its maiden journey on

- Ans
- 1. July 16, 2000
  - 2. July 16, 1992
  - 3. July 16, 1993
  - 4. July 16, 1991

Question ID : 584189284

Status : Not Attempted

Chosen Option : --

**Q.2** Priya invested a certain amount of money and got back an amount of Rs. 8800 after 3 years. If the rate of simple interest is 40 %, what is the principal amount invested by Priya?

- Ans
- 1. Rs. 7000
  - 2. Rs. 4000
  - 3. Rs. 4333
  - 4. Rs. 7333

Question ID : 584189311

Status : Answered

Chosen Option : 4

**Q.3** A piece of wire, bent in the shape of a square having 44 cm as its side, is subsequently bent to form a circle. What will be the radius of the circle?

- Ans
- 1. 14 cm
  - 2. 56 cm
  - 3. 28 cm
  - 4. 108 cm

Question ID : 584189300

Status : Answered

Chosen Option : 3

**Q.4** Which of the following is used by a computer to translate the procedure oriented language program into machine language program?

- Ans
- 1. Scanner
  - 2. Plotter
  - 3. Compiler
  - 4. VDU (Video Display Unit)

Question ID : 584189280

Status : Answered

Chosen Option : 3

**Q.5** Based on the relationship between the first two words, find out the missing word.

TERRESTRIALS : ANTS :: AMPHIBIANS : \_\_\_\_\_

- Ans
- 1. FISH
  - 2. SNAILS
  - 3. FROGS
  - 4. DOGS

Question ID : 584189367

Status : Answered

Chosen Option : 3

**Q.6** Which of the following is one of the largest and the most versatile space telescopes that was launched into low Earth orbit in 1990?

Question ID : 584189268

- Ans  1. Spitzer  
 2. James Webb  
 3. Chandra  
 4. Hubble

Status : Answered  
 Chosen Option : 4

Q.7 Pankaj buys 10 lemons for Rs. 80. At what price should he sell a dozen lemons, if he wishes to make a profit of 25%?

- Ans  1. Rs. 10  
 2. Rs. 100  
 3. Rs. 120  
 4. Rs. 240

Question ID : 584189323  
 Status : Answered  
 Chosen Option : 3

Q.8 Rs. 200 was distributed among three persons – Anil, Binay and Chinmay. Binay received 50% more than Chinmay. Anil received Rs.10 more than 150% of what Binay received. How much money did Anil receive?

- Ans  1. Rs. 100  
 2. Rs. 60  
 3. Rs. 40  
 4. Rs. 43

Question ID : 584189319  
 Status : Answered  
 Chosen Option : 1

Q.9 Which of the following uses only convex lens?

- Ans  1. Microscope  
 2. Flashlights  
 3. Peepholes  
 4. Car Headlights

Question ID : 584189282  
 Status : Answered  
 Chosen Option : 4

Q.10 An alphabet series is given below with one term missing, shown by a "?". Choose from the options the correct alternative that will fit the pattern of the series.  
 ADM, BFL, CHK, ?, ELI, FNH

- Ans  1. DHJ  
 2. DJJ  
 3. DHL  
 4. DJK

Question ID : 584189339  
 Status : Answered  
 Chosen Option : 2

Q.11 Which of the following is an annual nationwide campaign in Singapore encouraging awareness and action for the environment?

- Ans  1. Eco Action Day  
 2. My Planet Day  
 3. Earth Day  
 4. Cycling Day

Question ID : 584189291  
 Status : Answered  
 Chosen Option : 4

Q.12 In 2015, which ex-President of Romania was prosecuted for crime against humanity?

- Ans  1. John Ashe  
 2. Richard Heck  
 3. Khaled Bahah  
 4. Ion Iliescu

Question ID : 584189265  
 Status : Not Attempted  
 Chosen Option : --

Q.13 Which of the following States came into existence in 2014?

- Ans  1. Uttarakhand  
 2. Jharkhand  
 3. Telangana  
 4. Chhattisgarh

Question ID : 584189258  
 Status : Answered  
 Chosen Option : 3

A trader buys a Persian rug for Rs. 1235 and sells it for Rs. 1500. Find his gain percentage.

- Q.14  
Ans
- 1. 17.67 %
  - 2. 20.1 %
  - 3. 22.5 %
  - 4. 21.46 %

Question ID : 584189313  
Status : Answered  
Chosen Option : 4

- Q.15 A number series is given below with one number missing, shown by a “?”. Choose from the options the correct alternative that will fit the pattern of the series.  
4, 9, 19, ?, 79, 159

Question ID : 584189358  
Status : Answered  
Chosen Option : 3

- Ans
- 1. 33
  - 2. 59
  - 3. 39
  - 4. 34

Comprehension:

Read the information given below and answer the questions that follow:

Following table gives the data on the number of students who appeared, qualified and were selected from various states in a national level exam.

Students who			
State	Appeared	Qualified	Were Selected
Maharashtra	8500	950	80
Uttar Pradesh	5600	620	85
Kerala	7500	720	78
Delhi	4800	400	48
Arunachal Pradesh	7000	650	70

SubQuestion No : 16

- Q.1  
6 Which State has the highest ratio of number of students selected to the number of students who qualified from that State?

Question ID : 584189360  
Status : Answered  
Chosen Option : 1

- Ans
- 1. Maharashtra
  - 2. Uttar Pradesh
  - 3. Kerala
  - 4. Delhi

Comprehension:

Read the information given below and answer the questions that follow:

Following table gives the data on the number of students who appeared, qualified and were selected from various states in a national level exam.

Students who			
State	Appeared	Qualified	Were Selected
Maharashtra	8500	950	80
Uttar Pradesh	5600	620	85
Kerala	7500	720	78
Delhi	4800	400	48
Arunachal Pradesh	7000	650	70

SubQuestion No : 17

- Q.1  
7 Which State has the lowest percentage of qualifications over those who had appeared?

Question ID : 584189361  
Status : Answered

Ans

1. Kerala 2. Maharashtra 3. Delhi

Chosen Option : 4

Comprehension:

**Read the information given below and answer the questions that follow:**

Following table gives the data on the number of students who appeared, qualified and were selected from various states in a national level exam.

Students who			
State	Appeared	Qualified	Were Selected
Maharashtra	8500	950	80
Uttar Pradesh	5600	620	85
Kerala	7500	720	78
Delhi	4800	400	48
Arunachal Pradesh	7000	650	70

SubQuestion No : 18

Q.1 What percentage of students who appeared in the exam were selected?  
8Ans  1. 0.90 % 2. 2.11 % 3. 1.08 % 4. 2 %

Question ID : 584189362

Status : Answered

Chosen Option : 3

Comprehension:

**Read the information given below and answer the questions that follow:**

Following table gives the data on the number of students who appeared, qualified and were selected from various states in a national level exam.

Students who			
State	Appeared	Qualified	Were Selected
Maharashtra	8500	950	80
Uttar Pradesh	5600	620	85
Kerala	7500	720	78
Delhi	4800	400	48
Arunachal Pradesh	7000	650	70

SubQuestion No : 19

Q.1 Which State has the highest ratio of number of students selected to the number of students who appeared from that State?  
9Ans  1. Uttar Pradesh 2. Maharashtra 3. Kerala 4. Delhi

Question ID : 584189363

Status : Answered

Chosen Option : 1

Q.20

Question ID : 584189353

Status : Answered

Chosen Option : 2

In the question given below, are given two statements followed by a few conclusions. You have to take the two given statements to be true even if they seem to be at variance with commonly known facts. Read all the conclusions and then decide which of the given conclusions follow the two given statements disregarding commonly known facts.

Statements:

- Ans  1. All arrows are bullets  
 2. Conclusions 1, 2 and 3 follow  
 3. Conclusions 2, 3 and 4 follow  
 4. All conclusions follow

4. No bullet is an arrow

Q.21 A batsman scored 150 runs in a one-day cricket match. He hit 20 fours and 5 sixes. Calculate the percentage of runs he scored by running between the wickets.

- Ans  1. 73.33%  
 2. 31.33%  
 3. 25%  
 4. 26.67%

Question ID : 584189318

Status : Answered

Chosen Option : 4

Q.22 'Integrated Circuits' belonged to which of the following generation of Computers?

- Ans  1. Fourth Generation  
 2. Fifth Generation  
 3. Third Generation  
 4. Second Generation

Question ID : 584189281

Status : Answered

Chosen Option : 1

Q.23 Based on the relationship between the first two words, find out the missing word.  
 ODISHA : ODISSI :: KERALA : \_\_\_\_\_

- Ans  1. KUCHIPUDI  
 2. BHARATANATYAM  
 3. KATHAK  
 4. KATHAKALI

Question ID : 584189342

Status : Answered

Chosen Option : 2

Q.24 If 'J' means '×', 'K' means '+', 'Q' means '-' and 'T' means '÷' then what is the value of:  
 26 J 74 K 4 T 5 Q 2

- Ans  1. 220  
 2. 488  
 3. 478  
 4. 376

Question ID : 584189336

Status : Answered

Chosen Option : 3

Q.25 Who is the author of the novel 'Anandamath'?

- Ans  1. Subramania Bharathi  
 2. Bhartendu Harish Chandra  
 3. Bankim Chandra Chattopadhyay  
 4. Dinabandhu Mitra

Question ID : 584189288

Status : Answered

Chosen Option : 3

Comprehension:

Read the passage given below and answer the questions that follow:

In a class of 32 students, 20 of them like Spiderman and 14 like Batman. 6 students like neither Spiderman nor Batman.

SubQuestion No : 26

Q.2 How many students like either Spiderman or Batman?  
 6

- Ans  1. 6  
 2. 28  
 3. 12

Question ID : 584189357

Status : Answered

Chosen Option : 3



**RRB NTPC**

Railway Recruitment Board

## RRB NTPC (Tier -1 & Tier -2) Exam

- [RRB NTPC \(Tier -1\) Exam](#)
- [RRB NTPC \(Tier -2\) Exam](#)
- [Exam PAPERS](#)
- [Exam Syllabus](#)
- [Eligibility](#)
- [Medical Fitness](#)
- [RRB Post Preference & Zones List](#)
- [परीक्षा सिलेबस "Exam Syllabus in Hindi"](#)
- [Printed Study Material \(English Medium\)](#)
- [RRB NTPC Exam for Aptitude Test](#)
- [RRB NTPC Exam for Typing Skill Test](#)

[CLICK HERE](#)

**Disclaimer:** rrbexamportal.com is not associated with Railway Recruitment Board,  
For RRB official website visit - [www.rrcb.gov.in](http://www.rrcb.gov.in)

✓ 4. 26

Comprehension:

**Read the passage given below and answer the questions that follow:**

In a class of 32 students, 20 of them like Spiderman and 14 like Batman. 6 students like neither Spiderman nor Batman.

SubQuestion No : 27

Q.27 How many students like both Spiderman and Batman?

Question ID : 584189356

Status : Answered

Chosen Option : 4

Ans ✗ 1. 5

✗ 2. 6

✗ 3. 7

✓ 4. 8

Q.28 Who said - 'Give me blood and I will give you freedom'?

Question ID : 584189273

Status : Answered

Chosen Option : 2

Ans ✗ 1. Mahatma Gandhi

✓ 2. Subhas Chandra Bose

✗ 3. Jawaharlal Nehru

✗ 4. Chandra Shekhar Azad

Q.29 Which of the following Articles of the Constitution of India defines the 'Right to Education'?

Question ID : 584189254

Status : Answered

Chosen Option : 2

Ans ✗ 1. Article 5

✓ 2. Article 21A

✗ 3. Article 23

✗ 4. Article 12

Q.30 An electric bulb of 60 W is connected to a source of 240 V. The current drawn by the bulb will be:

Question ID : 584189256

Status : Answered

Chosen Option : 2

Ans ✗ 1. 2.5 A

✗ 2. 4 A

✗ 3. 0.4 A

✓ 4. 0.25 A

Q.31 Four words are given below out of which three are alike in some manner and one is different. Which one is different from the rest?

Question ID : 584189343

Status : Answered

Chosen Option : 1

Ans ✓ 1. Chalk

✗ 2. Paper

✗ 3. Blackboard

✗ 4. Slate

Q.32 In December 2015, Sadhana Shivdasani passed away. She was a popular \_\_\_\_\_.

Question ID : 584189248

Status : Answered

Chosen Option : 2

Ans ✓ 1. Actress

✗ 2. Politician

✗ 3.

✗ 4.

Q.33

Ans ✗ 1.

✗ 2.

✓ 3.

✗ 4.

Question ID : 584189297

Status : Answered

Chosen Option : 3

Q.34

Ans  1.  
 2.  
 3.  
 4.

Question ID : 584189267  
Status : Answered  
Chosen Option : 1

Q.35  
Ans  1.  
 2.  
 3.  
 4.

Question ID : 584189346  
Status : Answered  
Chosen Option : 3

Q.36  
Ans  1.  
 2.  
 3.  
 4.

Question ID : 584189289  
Status : Answered  
Chosen Option : 2

Q.37  
Ans  1.  
 2.  
 3.  
 4.

Question ID : 584189331  
Status : Answered  
Chosen Option : 3

Q.38  
Ans  1.  
 2.  
 3.  
 4.

Question ID : 584189327  
Status : Answered  
Chosen Option : 2

Q.39  
Ans  1.  
 2.  
 3.  
 4.

Question ID : 584189285  
Status : Answered  
Chosen Option : 3

Q.40  
Ans  1.  
 2.  
 3.  
 4.

Question ID : 584189274  
Status : Answered  
Chosen Option : 3

Q.41  
Ans  1.  
 2.  
 3.  
 4.

Question ID : 584189301  
Status : Answered  
Chosen Option : 2

Q.42  
Ans  1.  
 2.

Question ID : 584189305  
Status : Answered  
Chosen Option : 3



✓ 3.

✗ 4.

Q.43

Ans ✗ 1.

✗ 2.

✗ 3.

✓ 4.

Question ID : 584189366

Status : Answered

Chosen Option : 2

Q.44

Ans ✓ 1.

✗ 2.

✗ 3.

✗ 4.

Question ID : 584189309

Status : Answered

Chosen Option : 1

Q.45

Ans ✗ 1.

✗ 2.

✓ 3.

✗ 4.

Question ID : 584189368

Status : Answered

Chosen Option : 3

Q.46

Ans ✓ 1.

✗ 2.

✗ 3.

✗ 4.

Question ID : 584189303

Status : Answered

Chosen Option : 1

Q.47

Ans ✗ 1.

✓ 2.

✗ 3.

✗ 4.

Question ID : 584189259

Status : Answered

Chosen Option : 3

Q.48

Ans ✗ 1.

✓ 2.

✗ 3.

✗ 4.

Question ID : 584189266

Status : Answered

Chosen Option : 4

Q.49

Ans ✗ 1.

✗ 2.

✓ 3.

✗ 4.

Question ID : 584189294

Status : Answered

Chosen Option : 3

Q.50

Ans ✗ 1.

✓ 2.

✗ 3.

✗ 4.

Question ID : 584189251

Status : Answered

Chosen Option : 2

Q.51

- Ans
- 1.
  - 2.
  - 3.
  - 4.

Question ID : 584189337  
Status : Answered  
Chosen Option : 3

Q.52

- Ans
- 1.
  - 2.
  - 3.
  - 4.

Question ID : 584189283  
Status : Answered  
Chosen Option : 2

Q.53

- Ans
- 1.
  - 2.
  - 3.
  - 4.

Question ID : 584189302  
Status : Answered  
Chosen Option : 2

Q.54

- Ans
- 1.
  - 2.
  - 3.
  - 4.

Question ID : 584189290  
Status : Answered  
Chosen Option : 4

Q.55

- Ans
- 1.
  - 2.
  - 3.
  - 4.

Question ID : 584189324  
Status : Answered  
Chosen Option : 2

Q.56

- Ans
- 1.
  - 2.
  - 3.
  - 4.

Question ID : 584189293  
Status : Answered  
Chosen Option : 4

Q.57

- Ans
- 1.
  - 2.
  - 3.
  - 4.

Question ID : 584189272  
Status : Answered  
Chosen Option : 3

Q.58

- Ans
- 1.
  - 2.
  - 3.
  - 4.

Question ID : 584189255  
Status : Answered  
Chosen Option : 2

Q.59

- Ans
- 1.

Question ID : 584189270  
Status : Answered

# RRB NTPC EXAM Study Kit



- ▶ 100% Exam Syllabus Covered
- ▶ 4 Books, 950+ Pages
- ▶ Mathematics, General Intelligence & Reasoning,
- ▶ General Science, General Awareness
- ▶ Previous year Solved Papers
- ▶ Mock Tests with Answers
- ▶ 1 Year Current Affairs



₹ 6,000/-  
**₹ 1,999/-**  
Only

For RRB Exam Courses & Study Materials Call Us at: +91-8800734161

## What you will get:

- 100% Syllabus Covered in printed format.
- 4 Booklets
  - General Intelligence & Reasoning
  - General Awareness
  - Arithmetic
  - General Science
- 950+ Pages
- One Year Current Affairs (PDF Copy)
- Guidance & Support from Our Experts

Price of the Kit:

Rs. 6,000

**Rs. 1,999/-**  
(Limited time Offer)



Net Banking

**Order Online (100% Safe)**

**अन्य भुगतान विकल्प (Offline Payment Options)**

**50%  
OFF**

**CLICK HERE**

**Disclaimer: rrbexamportal.com is not associated with Railway Recruitment Board,  
For RRB official website visit - [www.rrcb.gov.in](http://www.rrcb.gov.in)**

- 2.
- 3.
- 4.

Chosen Option : 2

Q.60

- Ans
- 1.
  - 2.
  - 3.
  - 4.

Question ID : 584189249  
Status : Answered  
Chosen Option : 2

Q.61

- Ans
- 1.
  - 2.
  - 3.
  - 4.

Question ID : 584189328  
Status : Answered  
Chosen Option : 2

Q.62

- Ans
- 1.
  - 2.
  - 3.
  - 4.

Question ID : 584189329  
Status : Answered  
Chosen Option : 2

Q.63

- Ans
- 1.
  - 2.
  - 3.
  - 4.

Question ID : 584189271  
Status : Answered  
Chosen Option : 2

Q.64

- Ans
- 1.
  - 2.
  - 3.
  - 4.

Question ID : 584189252  
Status : Answered  
Chosen Option : 2

Q.65

- Ans
- 1.
  - 2.
  - 3.
  - 4.

Question ID : 584189250  
Status : Answered  
Chosen Option : 3

Q.66

- Ans
- 1.
  - 2.
  - 3.
  - 4.

Question ID : 584189332  
Status : Answered  
Chosen Option : 1





Q.67

- Ans
- 1.
  - 2.
  - 3.

Question ID : 584189262  
Status : Answered  
Chosen Option : 3





 4.

Q.68

- Ans  1.  
 2.  
 3.  
 4.





Question ID : 584189351  
Status : Answered  
Chosen Option : 2

Q.69

- Ans  1.  
 2.  
 3.  
 4.





Question ID : 584189261  
Status : Answered  
Chosen Option : 1

Q.70

- Ans  1.  
 2.  
 3.  
 4.





Question ID : 584189365  
Status : Answered  
Chosen Option : 4

Q.71

- Ans  1.  
 2.  
 3.  
 4.





Question ID : 584189322  
Status : Answered  
Chosen Option : 1

Q.72

- Ans  1.  
 2.  
 3.  
 4.




Question ID : 584189354  
Status : Answered  
Chosen Option : 4

Q.73

- Ans  1.  
 2.  
 3.  
 4.





Question ID : 584189321  
Status : Answered  
Chosen Option : 4

Q.74

- Ans  1.  
 2.  
 3.  
 4.

Question ID : 584189247  
Status : Answered  
Chosen Option : 1

Q.75

- Ans  1.  
 2.  
 3.  
 4.

Question ID : 584189333  
Status : Answered  
Chosen Option : 1

Q.76

- Ans  1.  
 2.  
 3.  
 4.

Question ID : 584189299  
Status : Answered  
Chosen Option : 1

Q.77

- Ans  1.  
 2.  
 3.  
 4.

Question ID : 584189314  
Status : Answered  
Chosen Option : 1

Q.78

- Ans  1.  
 2.  
 3.  
 4.

Question ID : 584189352  
Status : Answered  
Chosen Option : 4

Q.79

- Ans  1.  
 2.  
 3.  
 4.

Question ID : 584189296  
Status : Answered  
Chosen Option : 4

Q.80

- Ans  1.  
 2.  
 3.  
 4.

Question ID : 584189335  
Status : Answered  
Chosen Option : 3

Q.81

- Ans  1.  
 2.  
 3.  
 4.

Question ID : 584189316  
Status : Answered  
Chosen Option : 4

Q.82

- Ans  1.  
 2.  
 3.  
 4.

Question ID : 584189315  
Status : Answered  
Chosen Option : 3

Q.83

- Ans  1.  
 2.  
 3.  
 4.

Question ID : 584189298  
Status : Answered  
Chosen Option : 1



Q.84

- Ans  1.  
 2.

Question ID : 584189369  
Status : Answered  
Chosen Option : 4





-  3.
-  4.

Q.85

- Ans
-  1.
  -  2.
  -  3.
  -  4.





Question ID : 584189340  
Status : Answered  
Chosen Option : 1

Q.86

- Ans
-  1.
  -  2.
  -  3.
  -  4.





Question ID : 584189306  
Status : Answered  
Chosen Option : 2

Q.87

- Ans
-  1.
  -  2.
  -  3.
  -  4.





Question ID : 584189277  
Status : Answered  
Chosen Option : 4

Q.88

- Ans
-  1.
  -  2.
  -  3.
  -  4.



Question ID : 584189308  
Status : Answered  
Chosen Option : 1

Q.89

- Ans
-  1.
  -  2.
  -  3.
  -  4.





Question ID : 584189275  
Status : Answered  
Chosen Option : 4

Q.90

- Ans
-  1.
  -  2.
  -  3.
  -  4.

Question ID : 584189292  
Status : Not Attempted  
Chosen Option : --

Q.91



- Ans
-  1.
  -  2.
  -  3.
  -  4.

Question ID : 584189326  
Status : Answered  
Chosen Option : 1


Comprehension:

SubQuestion No : 92

Q.92

- Ans
-  1.
  -  2.


Question ID : 584189350  
Status : Not Attempted  
Chosen Option : --



## रेलवे भर्ती बोर्ड (आरआरबी) परीक्षा अध्ययन सामग्री

- 100% Syllabus Covered
- 4 Comprehensive Books
- 1000 Pages
- Current Affairs (PDF)
- Practice MCQs
- Support and Guidance

Only  
~~₹6,000/-~~  
**₹1,995/-**  
70% Off

  
[www.rrbportal.com](http://www.rrbportal.com)

### प्रिय अभ्यर्थियों,

आज इस गलाकाट प्रतिस्पर्धा के दौर में, हर जगह, हर क्षेत्र में मारामारी है। बात अगर सरकारी नौकरी की हो तो प्रतिस्पर्धा और भी कड़ी हो जाती है। जैसा की आप सभी जानते हैं RRBPORTAL विगत वर्षों से आप सबों को अंग्रेजी माध्यम में एक समग्र पाठ्यक्रम एवं मार्गदर्शन उपलब्ध करा रहा है। हमारे अध्ययन सामग्री की सफलता की दर करीब 70% है। विगत कुछ वर्षों की सरकारी विज्ञप्तियों (VACANCIES) पर नजर डालें तो आप देखेंगे की सर्वाधिक संख्या Railway के विज्ञप्तियों की है, और उसी अनुपात में भीड़ भी।

मित्रों इस परीक्षा में अंग्रेजी एवं हिंदी माध्यम के छात्र लगभग समान संख्या में सम्मिलित होते हैं, लेकिन हिंदी माध्यम से तैयारी करने वाले छात्रों के साथ सबसे बड़ी समस्या विश्वसनीय अध्ययन सामग्री एवं सही मार्गदर्शन की है।

आपकी इन्हीं समस्याओं और मांग को विचार में रखकर हमने नववर्ष में आपको हिंदी माध्यम में रेलवे भर्ती बोर्ड (आरआरबी), अध्ययन सामग्री उपलब्ध कराने का निर्णय लिया है। मित्रों हमने इस बात का पूरा ध्यान रखा है की आपको पाठ्यक्रम के अनुसार सारी चीजें एक जगह मिलें। हमने व्यवस्थित तरीके से लगभग 800 पृष्ठों में इस अध्ययन सामग्री को परीक्षोपयोगी बनाया है।

### आप क्या प्राप्त करेंगे?

- माध्यम: हिन्दी
- 100 प्रतिशत पाठ्यक्रम
- 838 पृष्ठ
- कुल 6 पुस्तिकायें
- Guidance & Support from Our Experts

### Price of the Kit:

**Rs. 4,000**

**Rs. 1,995/-**  
(Limited time Offer)



## Order Online (100% Safe)

अन्य भुगतान विकल्प (Offline Payment Options)

**50%  
OFF**

**CLICK HERE**

**Disclaimer: RRB EXAM PORTAL वेबसाइट किसी भी प्रकार से रेलवे भर्ती बोर्ड (RRB) के साथ संबद्ध नहीं है, रेलवे भर्ती बोर्ड एवं भारतीय रेलवे की आधिकारिक वेबसाइट पर जाने के लिए [www.rrcb.gov.in](http://www.rrcb.gov.in) पर विजिट करें।**



 3.

 4.

**Comprehension:**

SubQuestion No : 93

Q.9  
3

Ans  1.

 2.

 3.

 4.

Question ID : 584189349

Status : Not Attempted

Chosen Option : --

**Comprehension:**

SubQuestion No : 94

Q.9  
4

Ans  1.

 2.

 3.

 4.

Question ID : 584189348

Status : Not Attempted

Chosen Option : --

Q.95

Ans  1.

 2.

 3.

 4.

Question ID : 584189320

Status : Answered

Chosen Option : 4

Q.96

Ans  1.

 2.

 3.

 4.

Question ID : 584189338

Status : Answered

Chosen Option : 3

Q.97

Ans  1.

 2.

 3.

 4.

Question ID : 584189341

Status : Answered

Chosen Option : 1

Q.98

Ans  1.

 2.

 3.

 4.

Question ID : 584189286

Status : Answered

Chosen Option : 3

Q.99

Ans  1.

 2.

 3.

 4.

Question ID : 584189307

Status : Not Attempted

Chosen Option : --

Q.10

0

- Ans  1.  
 2.  
 3.  
 4.

Question ID : 584189257  
Status : Answered  
Chosen Option : 1

Q.10  
1

- Ans  1.  
 2.  
 3.  
 4.

Question ID : 584189278  
Status : Answered  
Chosen Option : 1

Q.10  
2

- Ans  1.  
 2.  
 3.  
 4.

Question ID : 584189287  
Status : Answered  
Chosen Option : 2

Q.10  
3

- Ans  1.  
 2.  
 3.  
 4.

Question ID : 584189364  
Status : Answered  
Chosen Option : 2

Q.10  
4

- Ans  1.  
 2.  
 3.  
 4.

Question ID : 584189263  
Status : Answered  
Chosen Option : 4

Q.10  
5

- Ans  1.  
 2.  
 3.  
 4.

Question ID : 584189310  
Status : Answered  
Chosen Option : 2

Q.10  
6

- Ans  1.  
 2.  
 3.  
 4.

Question ID : 584189325  
Status : Answered  
Chosen Option : 3

Q.10  
7

- Ans  1.  
 2.  
 3.

Question ID : 584189312  
Status : Answered  
Chosen Option : 4

✓ 4.

Q.10  
8

Ans ✓ 1.

✗ 2.

✗ 3.

✗ 4.

Question ID : 584189345

Status : Answered

Chosen Option : 1

Q.10  
9

Ans ✗ 1.

✓ 2.

✗ 3.

✗ 4.

Question ID : 584189317

Status : Not Attempted

Chosen Option : --

Q.11  
0

Ans ✗ 1.

✓ 2.

✗ 3.

✗ 4.

Question ID : 584189334

Status : Answered

Chosen Option : 2

Q.11  
1

Ans ✗ 1.

✗ 2.

✗ 3.

✓ 4.

Question ID : 584189260

Status : Answered

Chosen Option : 4

Q.11  
2

Ans ✗ 1.

✗ 2.

✓ 3.

✗ 4.

Question ID : 584189276

Status : Answered

Chosen Option : 3

Q.11  
3

Ans ✗ 1.

✓ 2.

✗ 3.

✗ 4.

Question ID : 584189330

Status : Answered

Chosen Option : 2

Q.11  
4

Ans ✗ 1.

✓ 2.

✗ 3.

✗ 4.

Question ID : 584189253

Status : Answered

Chosen Option : 2

Q.11  
5

Ans ✗ 1.





Question ID : 584189279

Status : Answered

Chosen Option : 1





-  2.
-  3.
-  4.

Q.11  
6

- Ans
-  1.
  -  2.
  -  3.
  -  4.


Question ID : 584189304  
Status : Answered  
Chosen Option : 4

Q.11  
7

- Ans
-  1.
  -  2.
  -  3.
  -  4.




Question ID : 584189344  
Status : Answered  
Chosen Option : 4

Q.11  
8

- Ans
-  1.
  -  2.
  -  3.
  -  4.




Question ID : 584189269  
Status : Answered  
Chosen Option : 2

Q.11  
9

- Ans
-  1.
  -  2.
  -  3.
  -  4.

Question ID : 584189264  
Status : Answered  
Chosen Option : 2

Q.12  
0

- Ans
-  1.
  -  2.
  -  3.
  -  4.

Question ID : 584189295  
Status : Not Attempted  
Chosen Option : --



<a href="#">Railway Recruitment Board (RRB) <b>NTPC</b> Exams Study Kit</a>	<a href="#">English</a>	<a href="#">CLICK HERE</a>
<a href="#">रेलवे भर्ती बोर्ड <b>एनटीपीसी (NTPC)</b> परीक्षा अध्ययन सामग्री</a>	<a href="#">हिन्दी</a>	<a href="#">CLICK HERE</a>
<a href="#">RRB <b>Loco Pilot (ALP)</b> Exam Study Kit</a>	<a href="#">English</a>	<a href="#">CLICK HERE</a>
<a href="#">रेलवे भर्ती बोर्ड <b>लोको पायलट (ALP)</b> परीक्षा अध्ययन सामग्री</a>	<a href="#">हिन्दी</a>	<a href="#">CLICK HERE</a>
<a href="#">RRB <b>Group-D</b> Exam Study Kit</a>	<a href="#">English</a>	<a href="#">CLICK HERE</a>
<a href="#">रेलवे भर्ती बोर्ड <b>Group-D</b> परीक्षा अध्ययन सामग्री</a>	<a href="#">हिन्दी</a>	<a href="#">CLICK HERE</a>
<a href="#">Study Kit for RRB <b>JE (Junior Engineer)</b> Exam</a>	<a href="#">English</a>	<a href="#">CLICK HERE</a>
<a href="#">आरआरबी <b>जूनियर इंजीनियर</b> परीक्षा (चरण -1) अध्ययन किट</a>	<a href="#">हिन्दी</a>	<a href="#">CLICK HERE</a>
<b>IAS EXAMS STUDY MATERIALS</b>		
<a href="#">Study Kit for IAS (Pre) <b>GENERAL STUDIES</b> Paper-1 (GS)</a>	<a href="#">English</a>	<a href="#">CLICK HERE</a>
<a href="#">Study Kit for IAS (Pre) <b>CSAT</b> Paper-2(Aptitude)</a>	<a href="#">English</a>	<a href="#">CLICK HERE</a>
<a href="#">सामान्य अध्ययन (GS) प्रारंभिक परीक्षा (Pre) पेपर-1</a>	<a href="#">हिन्दी</a>	<a href="#">CLICK HERE</a>
<a href="#">आई. ए. एस. (सी-सैट) प्रारंभिक परीक्षा पेपर -2</a>	<a href="#">हिन्दी</a>	<a href="#">CLICK HERE</a>
<a href="#">Gist of NCERT Study Kit For UPSC Exams</a>	<a href="#">English</a>	<a href="#">CLICK HERE</a>