



Subtraction



0119CH04

Take Away




5



Take away 2



Left 3




4

Take away 2





Left



Take away



Left



Take Away




Left




Teachers Note


Refer to page no. 141 to develop understanding of subtraction.




Subtraction




$$\boxed{6} - \boxed{4} = \boxed{2}$$



$$\boxed{5} - \boxed{2} = \boxed{}$$



$$\boxed{9} - \boxed{4} = \boxed{}$$

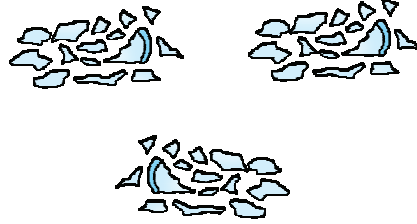



$$\boxed{5} - \boxed{1} = \boxed{}$$








Subtraction






-

=




-

=



-


=




-


=




 Subtraction



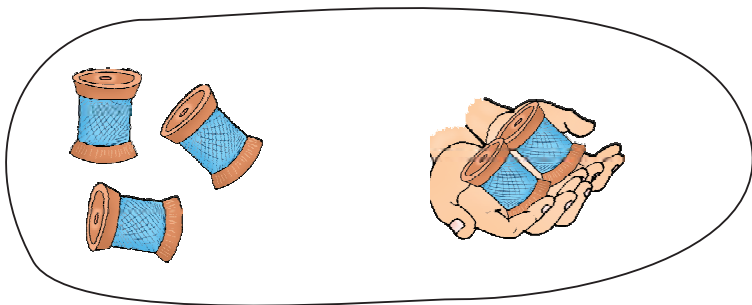
$$\boxed{3} - \boxed{1} = \boxed{2}$$



$$\boxed{} - \boxed{} = \boxed{}$$



$$\boxed{} - \boxed{} = \boxed{}$$



$$\boxed{} - \boxed{} = \boxed{}$$



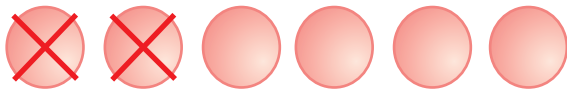


Subtraction



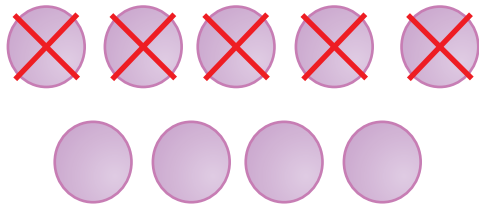
$5 - 4 = \boxed{1}$

$$\begin{array}{r} 5 \\ - 4 \\ \hline 1 \end{array}$$




$6 - 2 = \boxed{}$

$$\begin{array}{r} 6 \\ - 2 \\ \hline \end{array}$$



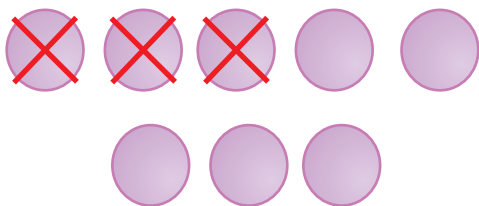
$9 - 5 = \boxed{}$

$$\begin{array}{r} 9 \\ - 5 \\ \hline \end{array}$$



$4 - 4 = \boxed{}$

$$\begin{array}{r} 4 \\ - 4 \\ \hline \end{array}$$



$8 - 3 = \boxed{}$

$$\begin{array}{r} 8 \\ - 3 \\ \hline \end{array}$$





Subtract and Match

$4 - 2$

3

$9 - 5$

$7 - 2$

4

$8 - 2$

$9 - 1$

2

$7 - 4$

$5 - 1$

5

$8 - 0$

$6 - 3$

6

$5 - 3$

$7 - 1$

8

$8 - 3$

$5 - 0$

0

$7 - 7$



Subtract

$4 - 2 =$

2

$4 - 0 =$

$5 - 2 =$

$6 - 5 =$

$7 - 7 =$

$8 - 4 =$

$3 - 1 =$



$$\begin{array}{r} 2 \\ - 0 \\ \hline \end{array}$$

2

$$\begin{array}{r} 9 \\ - 7 \\ \hline \end{array}$$

$$\begin{array}{r} 3 \\ - 0 \\ \hline \end{array}$$

$$\begin{array}{r} 8 \\ - 8 \\ \hline \end{array}$$

$$\begin{array}{r} 6 \\ - 4 \\ \hline \end{array}$$

$$\begin{array}{r} 4 \\ - 2 \\ \hline \end{array}$$





Write the missing numbers

$$8 - \square = 7$$

$$5 - \square = 1$$

$$3 - \square = 3$$

$$9 - 2 = \square$$

$$\square - 2 = 3$$

$$\square - 3 = 5$$

$$\square - 2 = 0$$

$$\square - 2 = 7$$

