




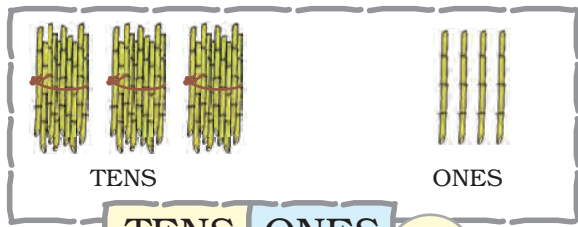
Numbers



0119CHI1



Write the number.



TENS

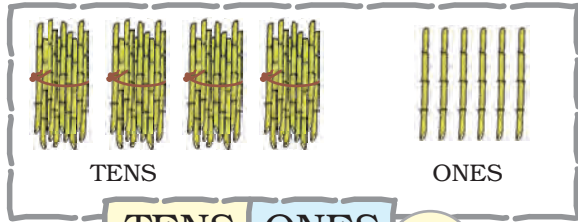
ONES

TENS

ONES

3

4



TENS

ONES

TENS

ONES



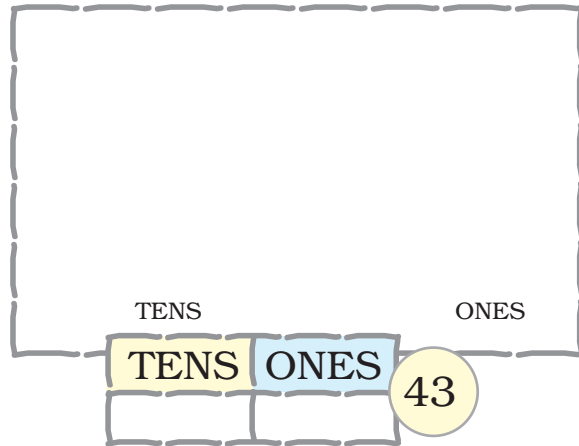
TENS

ONES

TENS

ONES

Draw the bundles of tens and ones of the number.



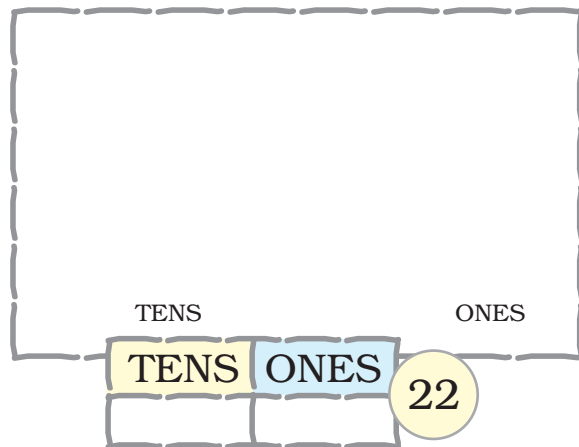
TENS

ONES

TENS

ONES

43



TENS

ONES

TENS


ONES

22

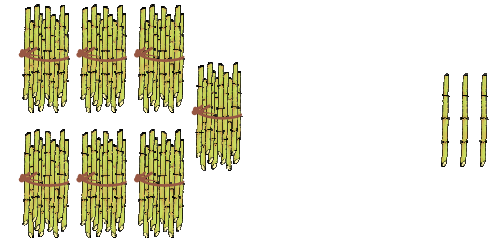




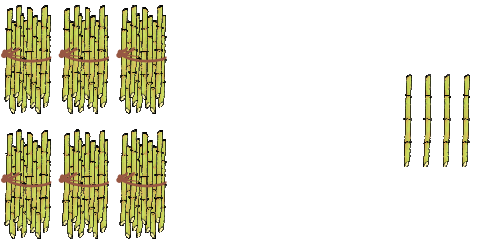
Write the number in the given space.



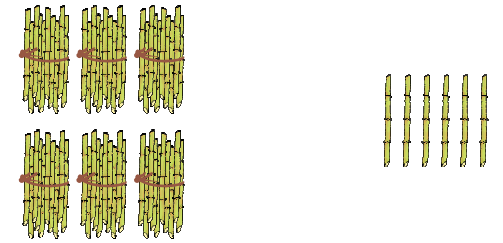
TENS	ONES	



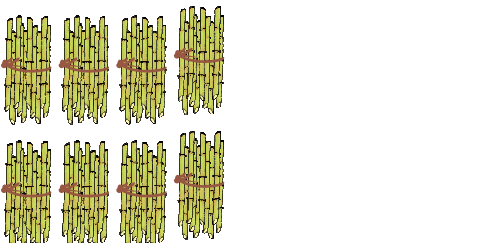
TENS	ONES	



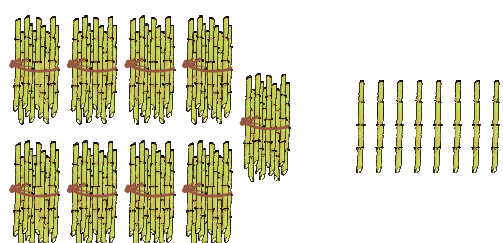
TENS	ONES	



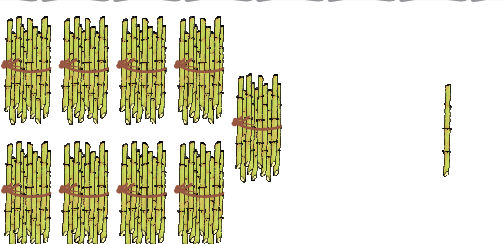
TENS	ONES	



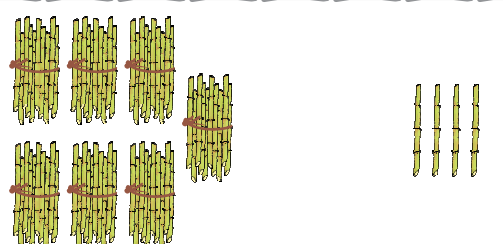
TENS	ONES	



TENS	ONES	



TENS	ONES	



TENS	ONES	



Numbers from 51 to 70

Fill in the blanks.

		51
5 TENS	1 ONE	

		61
6 TENS	1 ONE	

		52
5 TENS	2 ONES	

6 TENS	2 ONES	

		53
5 TENS	3 ONES	

		63
6 TENS	3 ONES	

		54
5 TENS	4 ONES	

6 TENS	4 ONES	

5 TENS	5 ONES	

		65
6 TENS	5 ONES	

5 TENS	6 ONES	

6 TENS	6 ONES	

5 TENS	7 ONES	

		67
6 TENS	7 ONES	

		58
5 TENS	8 ONES	

		68
6 TENS	8 ONES	

		59
5 TENS	9 ONES	

6 TENS	9 ONES	

		60
5 TENS	1 TEN	

		70
6 TENS	1 TEN	





Numbers from 71 to 90

Fill in the blanks.

		71
--	--	----

7 TENS

1 ONE

		81
--	--	----

8 TENS

1 ONE

--	--	--

7 TENS

2 ONES

		82
--	--	----

8 TENS

2 ONES

		73
--	--	----

7 TENS

3 ONES

--	--	--

8 TENS

3 ONES

		74
--	--	----

7 TENS

4 ONES

--	--	--

8 TENS

4 ONES

--	--	--

7 TENS

5 ONES

		85
--	--	----

8 TENS

5 ONES

		76
--	--	----

7 TENS

6 ONES

		86
--	--	----

8 TENS

6 ONES

--	--	--

7 TENS

7 ONES

--	--	--

8 TENS

7 ONES

--	--	--

7 TENS

8 ONES

		88
--	--	----

8 TENS

8 ONES

		79
--	--	----

7 TENS

9 ONES

		89
--	--	----

8 TENS

9 ONES

		80
--	--	----

7 TENS

1 TEN

		90
--	--	----

8 TENS

1 TEN



Numbers from 91 to 100

Fill in the blanks.


		91
9 TENS	1 ONE	
		92
9 TENS	2 ONES	
		93
9 TENS	3 ONES	
		94
9 TENS	4 ONES	
		95
9 TENS	5 ONES	
		96
9 TENS	6 ONES	
9 TENS	7 ONES	
9 TENS	8 ONES	
9 TENS	9 ONES	
		100
9 TENS	1 TEN	





Write the missing numbers.

51	52	53	54	55	56	57	58	59	60
	62			65				69	
		73							80
			84				88		
		93		95				99	



Let us play the game of snakes and ladders.

